



**FEDERATION OF
ACADEMIC ASSOCIATION
GUJARAT**



PRA TIBHA

BOARD PAPER SET

2026

STD. 12TH (ENGLISH MEDIUM)

Prepared by Expert Teachers of Federation of Academic
Association - Gujarat. (Reg. No. 1073/14-11-2017)

AIM, OBJECTIVE AND MOTTO

Education is not mere accumulation of facts; it is preparation of life itself. Education is knowledge imbued with wisdom and ethics. It develops the personality of the students, moulds their character and develops mental skills to help them cope with problems and challenges of the complex world of today. One of the most significant character traits that need to be instilled in our youth during their education is a finely ingrained attitude of service- before-self. The aim is to make them successful not only in life, but also conscious of their duties and responsibilities towards their fellow citizens. It is with this vision that the Federation of Academic Association was established in 2014 to set up across the state over the last decade, offering quality education from Pre-Primary to Doctoral level. Federation of Academic Association is the association of Coaching Class owners and teachers connected with them.

About the paper set...

This paper set is prepared by our association members who are subject experts with experience of decades. This will enhance student's knowledge regarding the way in which the questions are asked in the board exams and prepare them for the same to improve their result. Our Association members are always dedicated to fulfilment of student's goal and always support them personally to choose right path for the same. This paper set is distributed free of cost.

Positive suggestions will be appreciated.

Best of Luck
*to all the students for
their Board Exams...*

President, Core Committee and
Members of FAA - Gujarat.

Hemang Raval
President - Federation of Academic Association





Federation of Academic Association

PAPER - 1

- STD. 12TH EM
- SUB. ACCOUNT
- MARK 100
- TIME 3 Hour.

SECTION :- A

✦ Select the correct answer from the options. [20]

1. How would you consider the interest on credit balance of partner's current account for firm?
(A) An expense (B) Liability
(C) Income (D) Loss
2. Viral withdraws ₹ 500 in the beginning of every month. If 10% p.a. interest is chargeable on drawing, determine interest on drawings.
(A) ₹275 (B) ₹300 (C) ₹325 (D) ₹350
3. Goodwill depends on which aspect?
(A) On employee of business enterprise
(B) On management of business enterprise
(C) On assets of business enterprise
(D) On future maintainable profit
4. Superprofit means
(A) Capital employed - Expected profit
(B) Expected profit - Capital employed
(C) Average profit - Expected profit
(D) Expected profit - Average profit
5. Revaluation account is type of account.
(A) personal (B) nominal (C) real (D) temporary
6. At the time of reconstruction of a partnership firm is prepared.
(A) Trading account (B) Revaluation account
(C) Realisation account
(D) Profit and loss appropriation account
7. Internally generated goodwill cannot be shown in the books as per which accounting standard?
(A) 25 (B) 26 (C) 27 (D) 28
8. When only old profit-loss sharing sacrificing ratio of old partners = ratio is given;
(A) equal (B) old ratio
(C) old share-new share (D) cannot be calculated
9. X, Y and Z are the partners sharing profit and loss in the ratio of 5:32. Z retires. Calculate the new profit and loss ratio.
(A) 5:3 (B) 5:2 (C) 3:2 (D) 1:1
10. Which is the last payment made from the realisation of assets, at the time of the dissolution of a firm
(A) Dissolution expense
(B) Partner's capital
(C) Liabilities towards third parties
(D) Partner's loan
11. Which of the following amounts will be written at the credit side of realisation account, when there is balance of debtors ₹ 49,000 and bad-debt reserve of ₹ 5,000 in the balance sheet at the time of dissolution of a firm.
(A) ₹ 49,000 (B) ₹ 5,000 (C) ₹ 44,000 (D) 54,000
12. As per SEBI guidelines, the minimum amount on each share called by companies must be at least % of the issue price.
(A) 25 (B) 30 (C) 5 (D) 20

13. Which of the following is not shown under the heading 'Share capital' in a balance sheet?
(A) Authorised capital (B) Reserve capital
(C) Issued capital (D) Subscribed capital
14. Before the company decides to redeem the debentures out of profit, the company has to transfer % of total face value of issued debentures to debenture redemption reserve account.
(A) 10 (B) 25 (C) 100 (D) 15
15. Which of the following analyses shows stakeholders based classification?
(A) External analysis (B) Horizontal analysis
(C) Short term analysis (D) Vertical analysis
16. The expenses of the current year of a company is 3,00,000 and if it is increased by 20% compared to the previous year, what would be the expenses of the previous year?
(A) ₹ 60,000 (B) ₹ 2,50,000
(C) ₹ 3,60,000 (D) None of these
17. Which of the following is not included in operating expense?
(A) Loss on sale of asset (B) Loss due to fire
(C) Interest paid (D) All of the above
18. Which of the following is not included to compute current ratio?
(A) Debtors (B) Stock
(C) Bills receivables (D) Furniture
19. Dividend or interest received on investment is
(A) Added to cash flow of operating activity
(B) Deducted from cash flow of financing activity
(C) Added to cash flow of investing activity
(D) Deducted from cash flow of investing activity
20. Increase in goodwill in the current year as compared to previous year is
(A) Sale of goodwill (B) Purchase of goodwill
(C) Written off goodwill (D) All of the above

SECTION :- B

✦ Answer in one sentence each. [10]

21. What is goodwill ?
22. What is reconstruction of a partnership firm ?
23. If partnership deed is silent, at what rate interest is payable per annum on unpaid amount payable to the retiring partner?
24. What is voluntary dissolution ?
25. Who has to bear dissolution expense, at the time of dissolution of a firm ?
26. Write the types of Debenture on the basis of security.
27. Write the objective of current ratio.
28. What is ratio ?
29. What is investing activities ?
30. To which activity increase / decrease of bank overdraft is recorded ?

SECTION :- C**◆ Answer Any 4 of the following questions from 31 to 36 in short. (Each question carries 3 marks) [12]**

31. Tan, Man and Dhan are the partners sharing profit-loss in equal proportion. Their total capital is of Rs. 4,50,000. Their proportion of capital is 1:32. Firm pays interest on capital at 9% p.a. Partner Dhan has received Rs. 73,500 including interest on capital. Determine the amount payable including interest on the capital of Tan and Man?
32. A, B, and C are the partners of a partnership firm. Their profit-loss sharing ratio is 5:4:3. All the partners have decided to change their profit-loss sharing ratio to 2:2:1. From this information find out gain ratio.
33. Pass journal entries for the following transactions of partnership firm in the case of firm's dissolution:
- Goodwill is not disclosed in the books. But 50,000 are realised during dissolution.
 - The value of Laptop is 40,000. One partner has taken it for 25,000.

(iii) Machine is disclosed in the books at the time of dissolution for Rs. 1,00,000.

Book value is realised.

34. Write short note: Realisation account.

35. On 1.08.2017, Nanavati Ltd. issued 8,000, 9% debentures of Rs. 100 each at par. These debentures are to be redeemed on 31.08.2022 at Rs. 120 per debenture. Pass necessary journal entries in the books of the company for the issue and redemption of debentures [Without narration].

36. As on 1st April 2014, Jamnagar Copper limited issued Rs. 12,000, 12.5% Convertible debentures of Rs. 400 each at par. As per the terms of issue of debentures, all the debentures will be converted into equity shares of Rs. 10 each at a premium of 50% after 5 years.

On 1 April, 2019, debentures were converted into equity shares as per the agreed terms. Pass necessary journal entries in the books of the Company (Without Narration).

SECTION :- D**◆ Answer Any 3 of the following questions in short.****[12]**

37. From the following information of a partnership firm, determine the value of goodwill on the basis of 3 year purchase of last five years weighted average profit:

Year	Profit
2012 – 13	40,000
2013 – 14	60,000
2014 – 15	75,000
2015 – 16	90,000
2016 – 17	1,20,000

38. determine the value of goodwill of prabha and prabhu's firm on the basis of capitalized super profit method. (1) capital employed : 9,00,000 (2) expected rate of return : 12% (3) last five years profit :

Year	Profit
2012 – 13	1,00,000
2013 – 14	1,40,000
2014 – 15	1,30,000
2015 – 16	1,50,000
2016 – 17	1,80,000

39. From the following information prepare comparative profit – loss statement :

Particulars	31.3.2017 (Rs)	31.3.2016 (Rs)
Sales revenue	15,00,000	9,00,000
Net purchase for resale	9,00,000	6,00,000
Change in stock	50,000	50,000
Other expenses (% of cost of sales)	10	12
Income – tax	30%	30%

40. From the following information , calculate gross profit ratio and net – profit ratio : (P2-5)

Particulars	(Rs)
Non – operating other expenses	35,000
Depreciation	48,000
Administrative	75,000
Sales	6,00,000
Tax rate	30%
Income of interest	45,000
Sales expenses	52,000
Cost of goods sold	3,25,000
Financial expenses	85,000

41. From the following information of Gandhidham Timber Company, prepare statement of cash flow from operating activities
 Profit before changes in working capital Rs. 4,95,000, increase in debtors Rs. 75,000, decrease in bills receivables Rs. 40,000, decrease in stock Rs. 30,000, increase in Prepaid expenses Rs. 25,000, outstanding expenses (Increase) Rs. 15,000, decrease in creditors Rs. 20,000.

SECTION :- E

◆ **Answer Any 3 of the following questions from 42 to 46n short. (Each question carries 4 marks) [24]**

42. A and B are partners sharing profit-loss in the ratio of 2:1. The balance sheet of their firm as on 31.3.2018 was as under:

Balance sheet

Liabilities	Amount (Rs)	Assets	Amount (Rs)
Capital :		Plant – machinery	80,000
A 80,000		Building	50,000
B <u>40,000</u>	1,20,000	Stock	17,000
Reserve fund	21,000	Debtors 50,000	
Creditors	75,000	(-) BDR - 4,000	46,000
Bills payable	10,000	Cash bank	33,000
	<u>2,26,000</u>		<u>2,26,000</u>

They admitted C as a new partner on 1.4.2018 on following condition's:

- (1) C will get $\frac{1}{4}$ th share in future profits which he gets from A and B in the ratio 1:2.
- (2) C will bring proportionate capital.
- (3) C will bring his share of goodwill in cash. Goodwill is valued at Rs. 1,80,000.
- (4) Fixed assets are to be depreciated at 10%.
- (5) All debtors are solvent.
- (6) Insurance premium of Rs. 3,000 is to be carried forward to the next year.

Prepare necessary accounts and balance sheet.

43. Perna and Piyush are partners in a firm sharing profit and loss in the ratio of their capital. Balance sheet of their firm was as under :

Balance sheet

Liabilities	Amount (Rs)	Assets	Amount (Rs)
Capital :		Building	90,000
Perna 50,000		Furniture	17,500
piyush <u>1,50,000</u>	2,00,000	Machinery	1,07,500
Reserve fund	30,000	Stock	17,500
Creditors	40,000	Debtors	30,000
Bills payable	1,500	Cash –bank	8,250
	<u>2,71,500</u>	Accured income	750
			<u>2,71,500</u>

They admitted Poyani as a new partner for $\frac{1}{5}$ share of profit on 31-3-2016 on following terms:

- (1) Poyani brought Rs.62,500 as capital and Rs. 24,000 as her share of goodwill in cash. 60% amount of goodwill is withdrawn by the old partners.
- (2) Market value of stock and machinery is Rs. 20,000 and Rs.1,20,000 respectively.
- (3) Provision for bad debt at 10% and 2% discount reserve on debtors is to be made.
- (4) Creditors are to be paid Rs.30,000
- (5) Value of building is to be increased by 15% and value of furniture is to be increased by 20%
- (6) Outstanding wages of Rs.460 is not recorded in the books.

From the above information prepare necessary accounts and new balance sheet of the firm.

44. E, F and G are partners sharing profit and loss in the ratio of 4:3:3. E retires on 31.03.2018. Balance sheet of the firm on that date was as under :

Balance Sheet

Liabilities	Amount (Rs)	Assets	Amount (Rs)
Capital :		Goodwill	1,000
E 8,000		Land – building	6,000
F 5,000		Freehold assets	3,000
G 2,000	15,000	Furniture	3,000
General reserve	2,000	Stock	6,600
Creditors	8,000	Debtors	7,000
Bills payable	2,000	Cash	400
	<u>27,000</u>		<u>27,000</u>

Following terms of retirement were decided in partnership agreement and among the partners:

- (1) Goodwill of the firm is valued at Rs. 7,000.
- (2) Value of Land-building Rs. 7,000 and furniture Rs. 2,000 is decided.
- (3) Stock is over valued by 10%.
- (4) Rs. 5,000 to be paid to E immediately and balance to be transferred to his loan account.
- (5) F and G will bring necessary cash in equal proportion in such manner that E is to be paid his dues fully and Rs. 2,000 remain as working capital (cash).

Prepare necessary accounts and balance sheet.

45. National Textiles Limited issued 12,00,000 equity shares of Rs. 10 each on which amount was payable as under:

On application Rs. 4 per share

On allotment Rs. 4 per share and on final call 2 per share.

Company received applications for 15,50,000 equity shares from public. Excess applications were rejected and amount paid on application was refunded.

Shah who was allotted 2000 shares, had not paid amount on final call, Company forfeited his shares and all the forfeited shares were reissued at 7.50 per share as fully paid up to Thaker.

Pass necessary journal entries in the books of the company to record above transactions [Without narration].

46. Bharat Foods Products Ltd. issued 80,000 equity shares to the public at Rs. 10 per share. Company called up the amount as under:

On application Rs. 4 per share,

On allotment Rs. 3 per share,

On final call Rs. 3 per share.

Applications were received from public for 1,20,000 shares, its allotment was made by company as under:

Full allotment was made to applicants of 32,000 shares.

Not a single share was allotted to the applicants of 24,000 shares.

48,000 shares were allotted to applicants of 64,000 shares. All amounts were received in time. Pass journal entries in the books of the company from above information [Without narration].

SECTION :- F

♦ **Answer Any 3 of the following questions from 47 to 48 directed. (Each question carries 11 marks) [22]**

47. From the trial balance and adjustments of partnership firm of Ansh and Vansh, prepare profit and loss A/c, capital accounts of partners and Balance-sheet :

Trial balance of partnership firm of Ansh and Vansh as on 31.3.2019.

Particulars	Dr. Bal (Rs)	Cr. Bal (Rs)
Capital Accounts :		
Ansh	-	1,50,000
Vansh	-	1,60,000
Stocks (31-3-2019)	54,600	-
Cash balance	560	-
Current A/c with bank	14,000	-
Fixed deposit of SBI	80,000	-
Debtors – creditors	36,800	24,000
Salary	37,000	-
Land – building	1,80,000	-
Machinery	40,000	-
Furniture	10,000	-
insurance premium	2000	-
Stationery and printing	1,200	-
Bad debts – Bad debts reserve	400	2000
Advertisement expenses	1200	-
Travelling expenses	800	-
Trading A/c		61,800
Loan of Vansh (1-10 – 2018)	-	60,000
Discount reserve	-	760
Total	4,58,560	4,58,560

Adjustments :

(1) Ansh withdrew goods of Rs. 4,000 for personal use. It is not recorded in the books.

(2) Goods of Rs. 8,000 purchased on credit at the end of the accounting year, which is not recorded in the books.

(3) Prepaid insurance is Rs. 400.

(4) From debtors Rs. 800 is not recoverable. Provide 5% bad debts reserve on debtor.

(5) Provide depreciation on machinery at 20% and on furniture at 5%.

48. Following balances are extracted from the books of Vardhman Ltd. Prepare balance sheet as per schedule-III of Companies Act, 2013 as at 31-3-2019 :

Trial balance as on 31-3-2019

Debit balance	Amount (Rs)	Credit balance	Amount (Rs)
Plant – machinery	8,00,000	Equity share	
Cash and cash		Capital	5,50,000
Equivalent	60,000	9 loan from bank	5,00,000
Stock	4,30,000	Proposed dividend	1,80,000
Debtors	5,60,000	Creditors	1,00,000
Interest accrued	30,000	Surplus as per Statement of Profit – loss	5,00,000
Trade marks	20,000	Provident fund	7,00,000
10 narmada bond	7,00,000	Bank overdraft	1,60,000
Loose tools	40,000	Outstanding Salary	60,000
Telephone deposit	30,000	10 debentures	2,30,000
Mutual fund units (temporary)	1,00,000	Provision for tax	20,000
Calls in arrears			
On shares equity	10,000		
Computers	1,80,000		
Computers software	40,000		
Total	30,00,000		30,00,000

"ALL THE BEST"





Federation of Academic Association

PAPER - 2

- STD. 12TH EM
- SUB. ACCOUNT
- MARK 100
- TIME 3 Hour.

SECTION :- A

◆ Questions from 1 to 20 are objective types questions. Choose the correct answer from the options given and write. [20]

1. The capital proportion of A, B and C is 3 : 2 : 1 respectively. The divisible profit is Rs. 66,000. What will be the amount of profit of C ?
(A) Rs. 11,000 (B) Rs. 22,000
(C) Rs. 33,000 (D) Rs. 66,000
2. Debit balance of profit and loss appropriation account means.....
(A) Gross Profit (B) Gross Loss
(C) Divisible Profit. (D) Divisible Loss
3. Good will is a financial value of.....
(A) Investment
(B) Prestige of business enterprise
(C) Fixed assets
(D) Competition
4. 'Goodwill' is which type of asset ?
(A) Tangible asset
(B) Intangible asset .
(C) Current asset
(D) Fictitious asset
5. Where is the provident fund shown in balance sheet at the time of the reconstruction of partnership firm?
(A) Credit side of revaluation account
(B) Liabilities of balance sheet after reconstruction
(C) Credit side of partner's capital account
(D) Debit side of partner's capital account :
6. Revaluation account is also known as.....
(A) Capital reserve account
(B) Profit-loss appropriation account
(C) Profit-loss adjustment account
(D) Profit-loss account
7. As per which accounting standard internally generated goodwill cannot be shown in the books ?
(A) Accounting standard 25
(B) Accounting Standard 26
(C) Accounting standard 27
(D) Accounting standard 16
8. When new partner brings his share of goodwill in cash,..... account is credited.
(A) Cash (B) Premium for goodwill
(C) Goodwill (D) his capital account
9. When only old profit-loss sharing ratio is given, gaining ratio of remaining partners will be..... ,
(A) 1:1 (B) Old ratio
(C) Capital ratio (D) Can not be calculated

10. Which of the following amount will be written at the credit side of realisation account, when there is balance of debtors Rs. 24,500 and bad debt reserve Rs. 4,500 in the balance sheet at the time of the dissolution of a firm ?
(A) Rs. 24,500 (B) Rs. 4,500
(C) Rs. 22,000 (D) Rs. 27,000
11. How many methods are there for dissolution of a partnership firm ?
(A) One (B) Three (C) Two (D) Four
12. If the company does not receive subscription for at leastof the public issue, then share issue would be cancelled.
(A) 50% (B) 75% (C) 90% (D) 100%
13. Which of the following is not shown under the heading 'Share Capital' in a balance sheet ?
(A) Authorised Capital (B) Issued Capital
(C) Reserve Capital - (D) Subscribed Capital
14. Which type of account "Premium on Redemption of debenture A/c" is ?
(A) Personal account (B) Real account
(C) Nominal account (D) None of above
15. The information regarding the use of assets gives the analysis of
(A) Profitability (B) Liquidity
(C) Solvency (D) Efficiency
16. Which of the following analysis shows stakeholder - based ; classification ?
(A) External analysis (B) Horizontal analysis
(C) Short-term analysis (D) Vertical analysis
17. To arrive at liquid assets which of the following is deducted from current assets ?
(A) Stock
(B) Cash and Cash equivalent
(C) Debtors
(D) Bills receivables
18. Which of the following is not included in operating expense ?
(A) Loss on sale of asset (B) Loss due to fire
(C) Interest paid (D) All of the above
19. Cash equivalent has.....
(A) higher liquidity (B) higher solvency
(C) higher profitability (D) all of the above
20. Which of the following is included in financial expense ?
(A) Factory expense
(B) Administrative expense
(C) Sales expense
(D) Interest expense

SECTION :- B**★ Answer the question from 21 to 30 in one sentence each. [10]**

21. What is goodwill ? :
22. What is reconstruction of a partnership firm ?
23. If partnership deed is silent, at what rate interest is payable per annum on unpaid amount payable to the retiring partner ?
24. What is voluntary dissolution ?
25. Who has to bear dissolution expense, at the time of dissolution of a firm ?
26. Write the types of Debenture on the basis of security.
27. Write the objective of current ratio.
28. What is ratio ?
29. What is investing activities ?
30. To which activity increase / decrease of bank overdraft is recorded ?

SECTION :-C**★ Answer the questions in short. (Any Four) [12]**

31. Nirav, Namrata and Nishad are partners sharing profit-loss in the proportion of 3: 2:4. Manager is to be paid 10% commission of profit but after the deduction of his such share. The share of profit of Namrata is Rs. 30,000. Determine the commission of manager.
32. Aakash, Prakash and Vikash are the partners in a firm sharing profits and losses in the ratio of 3: 3: 2. All partners have decided to change their profit and loss ratio of 1:1:1. Calculate gain made by the partners.
33. In which circumstances court can pass the order for dissolution of a firm ?
34. Pass journal entries for the following transactions of firm in the case of firm's dissolution :
 - (1) At the time of dissolution the book value of goodwill is Rs. 56,000. No amount is realised.
 - (2) The value of laptop is Rs. 35,000. One partner has taken it for Rs. 25,000.
 - (3) Income tax liability is now payable Rs.30,000, it is not recorded in the book.
35. On 1-6-2016 Sakshi Limited issued 10,000, 8% debentures of Rs.200 each at a premium of 5%. The debentures are redeemed on 31-5-2021 at Rs. 220 per debenture. Write necessary journal entries in the books of company. (Without narration)
36. As on 1-4-2016, Gajanand Limited issued 12,000, 12.5% convertible debentures of Rs. 400 each at

par. As per the terms of issue of debentures, all the debentures will be converted in to equity shares of Rs. 10 each at a premium of 50% after 5 years.

On 1-4-2021, debentures were converted into equity shares as per the agreed terms. Pass the necessary journal entries in the books of company. (Without narration)

SECTION :- D**★ Give answer to the following questions showing calculations wherever necessary. (Any Three) [12]**

37. From the following information of Ram and Shyam's firm, determine the value of goodwill on the basis of 3 years purchase of last five years weighted average profit :

Year	Profit (Rs.)
2012-13	40,000
2013-14	60,000
2014-15	75,000
2015-16	90,000
2016-17	1,20,000

38. Panna and Rita are the partners of a firm. They want to change the profit and loss sharing ratio from 3:2 to 1:1. They decided to determine the valuation of goodwill.

On the basis of the firm's profit and other information, determine the valuation of goodwill on the basis of three years purchase of super profit :

Assets — Rs. 12,00,000

Liabilities - Rs. 4,00,000 @ 7

Expected rate of return 10%.

Actual Profit :

Year	Profit (Rs.)
2018-19	1,30,000
2019-20	1,10,000
2020-21	1,20,000

39. Profit-loss statements of Gujarat Ltd. for the year ending on 31-3-2020 and 31-3-2021 are as follow. On the basis of them prepare comparative profit-loss statement.

Summarised profit-loss statement the year ending on 31-3-2020 and 31-3-2021 :

Particulars	Note no.	31-3-2021 (Rs.)	31-3-2020 (Rs.)
Sales revenue		16,00,000	14,00,000
Other income		3,00,000	2,50,000
expenses		9,60,000	7,20,000

Income tax rate is 30%.

40. From the following information of 'B' Company Ltd, Calculate debtors turnover and collection period in days. What will be answer, if collection period is calculated in terms of weeks and months ?(Assume 360 days of the year)

Particulars	(Rs.)	Particulars	(Rs.)
Total Sales	4,50,000	Credit Sales	3,65,000
Opening Debtors	70,000	Closing Debtors	50,000
Opening Bills Closing Bills		Closing bills	
Receivables	20,000	Receivable	6,000
Opening Creditors	45,000	Closing creditors	48,000

41. From the following transactions of Sweta Company Ltd. Calculate cash flow from operating activities

Particulars	(Rs.)
Profit before taxes	1,32,000
Goodwill written off	28,000
Patent amortized	17,000
Depreciation written of	29,000
Transfer to general reserve	23,000
Interest received	12,000
Dividend received	9,000
Interest paid	11,000
Dividend paid	25,000
Profit on sale of investments	13,000
Loss on sale of furniture	18,000

SECTION :- E

◆ **Following questions are essay type questions. Each question carries(Any ree) [24]**

42. Shiv and Parvati are partners in a firm sharing profit and loss in the ratio of 2 : 1. Their balance sheet as on 31-3-2021 was as under:

Balance Sheet

Liabilities	(Rs.)	Assets	(Rs.)
Capital Account :		Goodwill	18,000
Shiv 80,000		Land - Building	72,000
Parvati 60,000	1,40,000	Machinery	40,000
General reserve	18,000	Stock	36,000
Workmen compensation reserve	4,500	Debtors 24,000	
Investment fluctuation reserve	1,500	— Bad debt	
Creditors	28,000	Reserve 2,000	22,000
Bills payable	12,000	Investment	8,000
		Cash-Bank	2,000
		Advertisement campaign expenditure	6,000
	2,04,000		2,04,000

They admitted Nikita as a new partner from 1-4-2021 on the following conditions :

- (1) Nikita will bring Rs.1,00,000 as her capital and Rs. 24,000 as goodwill in cash.
- (2) Value of land and building is to be increased by Rs.17,000.
- (3) Value of machinery is to be decreased upto Rs.32,000.
- (4) Provision for bad debt is to kept at 10% on debtors,
- (5) Provision for outstanding electricity bill is to be made at Rs.1,100.
- (6) New profit sharing ratio of all three partners is to be kept at 2:1:2.

Prepare Revaluation Account, Partner's Capital Account, Cash-Bank Account and Balance Sheet after admission.

43. A and B are partners sharing profit-loss in the ratio of 2: 1 . The balance sheet of their firm as on 31-3-2021 was as under:

Balance Sheet			
Liabilities	(Rs.)	Assets	(Rs.)
Capital:		Plant- Machinery	80,000
A 80,000		Building	50,000
B <u>40,000</u>	1,20,000	Stock	17,000
Reserve Fund	21,000	Debtors	50,000
Creditors	75,000	— Bad debt reserve	<u>4,000</u>
		Cash-Bank	33,000
Bills Payable	10,000		
	<u>2,26,000</u>		<u>2,26,000</u>

They admitted C as a new Partner on 1-4-2021 on following conditions :

- (1) A sacrificed 1/12 th share and B Sacrificed 1/6 th Share from their profit share in favour of C :
 - (2) C will bring proportionate Capital.
 - (3) C will bring his share of goodwill in cash. Goodwill is valued at Rs. 1,80,000.
 - (4) Fixed assets are to be depreciated at 10%.
 - (5) All debtors are solvent.
 - (6) insurance Premium of Rs. 3,000 is to be carried forward to the next year .
- Prepare necessary account and balance sheet.
44. Dipen, Umang and Aakash are the partners sharing profit and loss in the ratio of 2 : 2: 1. Aakash retires on 31-3-2021. Balance sheet of the firm as on 31-3-2021 was as under:

Balance 'Sheet			
Liabilities	(Rs.)	Assets	(Rs.)
Capital Accounts :		Goodwill	10,000
Dipen 30,000		Machinery	20,000
Umang 20,000		Investments	10,000
Aakash <u>10,000</u>	60,000	Debtors	30,000
General Reserve	5,000	Stock	10,000
Investment fluctuation fund		Cash-Bank	5,000
Bad debt reserve	2,000		
Creditors	15,500		
	<u>85,000</u>		<u>85,000</u>

Following adjustments are agreed at the time of retirement :

- (1) Value of machinery is Rs.25, 000 and value of stock is Rs.5,000.
 - (2) Value of investments is Rs.8,000, which is taken by aakash at this price.
 - (3) An amount of Rs. 5000 included in creditors is no longer Payable.
 - (4) The provision for workmen compensation to be Credited at Rs.2,000.
 - (5) The provision for doubtful debts is to be kept at 10% on debtors
 - (6) Goodwill of the firm is valued at % 40,000.
- Prepare necessary accounts and balance sheet of the firm after Aakash's retirement.
45. Harsh Limited issued 18,00,000 equity shares of Rs.10 each. The company received applications for 20,00,000 shares. Shares Were allotted at meeting of board of directors. Excess shares applications were rejected and the application money thereon was refunded to applicants. Amount on shares was called-up as under :
- On application Rs. 3 per share
On allotment Rs. 2.50 per share .
On first call Rs. 2 per share.
On final call Rs. 2.50 per share .
- Hetal who was allotted 1,600 shres, could not pay first and final call money .where, Mital who was allotted 1,400 shares could not pay final call money. -Except this, all the amounts due form all the Shareholders were received on dine dane Hetal and mital paid calls in- arrears amounts at a later date.
- Pass necessary journal entries relating to above transactions in the books of the company. (Without narration)
46. Yogeshwar Limited issued 2,40,000 equity Share of Rs.10 each at a premium of Rs.70 per share Amount called up per share was as under :
- Rs. 38 on application (including Premium of Rs. 35)
Rs.28on allotment (including Premium of Rs. 25)
Rs. 14 on final call (including premium of Rs. 10)

All the sum due were duly received except money due on allotment and final call on 2,000 shares held by Kalpesh.:
 After carrying out necessary formalities, company for feited Kalpesh's share. These shares were reissued to
 Gaurav at 40% premium as fully paid up.
 Pass journal entries for above transactions in the books of company. (Without narration)

SECTION :- F

◆ **Answer the following questions. Each question carries 11 marks :**

[22]

47. With consideration of following trial balance and adjustments of Dharm and Karm, prepare final accounts for the year ending on 31-3-2021 of their firm. :

Trial Balance of Partnership firm of Dharm and Karm as on 31-3-2021 :

Name of Accounts	Debit balance (Rs.)	Credit balance (Rs.)
Capital and Drawings :		
Dharm	5,000	35,000
Karm	2,500	15,000
Patent and Trademark	2,700	-
Debtors and Creditors	31,000	25,000
Purchase and Sales	40,000	89,250
Machines (Office)	20,000	-
Opening Stock	6,000	-
Furniture	3,000	-
Purchase return and Sales return	7,500	5,000
Wages	4,600	-
Depreciation on furniture	300	-
Building	46,000	-
Office Expenses	4,700	-
Legal Charges	6,500	-
Bills	300	-
Bad debts and bad debts reserve	4,000	2,500
Discount	1,500	2,000
Stamp on hand and bad dets return	750	1,500
12% HDFC Loan (1-7-2020)	150	1,250
	-	10,000
	1,86,500	1,86,500

Adjustment :

- (1) Closing stock Rs. 10,000 out of which 50% has no market value,
- (2) Legal charges included of legal charges of building purchase Rs.4,000.
- (3) Provide 5% bad debts reserve on debtors.
- (4) Provide depreciation 10% on furniture and 5% on 'building.
- (5) 1/3 Share of patent and trademark is to be Written off.

48. Following is the Trial Balance of Sharada Ltd. as on 31-3-2021 :

Particulars	Debit (Rs.)	Credit (Rs.)
Inventories	1,10,000	-
Fixed assets - tangible	8,00,000	-
5,000 equity shares of Rs. 100 each	-	5,00,000
Sales	-	7,50,000
Other Income	-	20,000
Employee benefit expenses	1,30,000	-
Long term borrowings	-	3,50,000
Finance costs	17,500	-
Trade payables	-	1,00,000
Trade receivables	40,000	-
Cash and bank balance	60,000	-
Depreciation	22,500	-
Cost of goods sold	4,00,000	-
Non-current investments	1,40,000	-
	17,20,000	17,20,000

Additional Information :

- (i) Provision for tax Rs. 80,000. (ii) Prepare final accounts of the company as per schedule-III of Companies Act, 2013.

"ALL THE BEST"



Federation of Academic Association

PAPER - 3

- STD. 12TH EM
- SUB. ACCOUNT
- MARK 100
- TIME 3 Hour.

Section – A

♦ Questions from 1 to 20 are multiple choice type questions. Select and write the correct answer from the options. (Each question carries 1 mark) [20]

- What is the interest on drawings of partners for a partner?
(A) An expense (B) Liability
(C) An Income (D) Loss
- In which account and on which side the share of partners' share profit is recorded under the fluctuating capital 2 account method ?
(A) Debit to capital account
(B) Credit to capital account
(C) Debit to current account
(D) Credit to current account
- Goodwill is..... where Individual skill is important.
(A) more (B) less (C) zero (D) negative
- Expected profit =
(A) Capital employed x Expected rate of return
(B) Average profit x Expected rate of return
(C) Weighted average profit x Expected rate of return
(D) Assets x Expected rate of return
- Revaluation A/c is also known as.....
(A) Capital reserve account
(B) Profit-loss appropriation account
(C) Profit loss adjustment account
(D) Profit-loss account
- Where are the effects given when the value of liabilities decrease at the time of the reconstruction of a partnership firm ?
(A) Subtract from such liabilities and the revaluation account will be credited.
(B) Subtract from such liabilities and the revaluation account will be debited.
(C) Addition in such liabilities and the revaluation account will be credited,
(D) Addition In such liabilities and the revaluation account will be debited.
- Revaluation account is also known as.....
(A) profit loss account
(B) profit and loss adjustment account
(C) profit and loss appropriation account
(D) profit and loss suspense account
- Profit or loss of revaluation account is transferred to..... account..... in ratio
(A) old partners, equal
(B) all partners, new profit loss sharing ratio
(C) old partners, sacrificing ratio
(D) old partners, old ratio
- When only old profit-loss sharing ratio is given. gaining ratio of remaining partners will be
(A) 1:1 (B) old ratio
(C) capital ratio (D) can not be calculated
- To which account balance of general reserve is transferred at the time of the dissolution of a firm?
(A) Realization A/c (B) Cash A/c
(C) Profit-loss A/c (D) Capital A/c of partners
- Which of the following account is opened to incorporate the accounting effect of assets and liabilities of the partnership firm at the time of dissolution ?
(A) Profit and loss account
(B) Profit and loss appropriation account
(C) Revaluation account
(D) Realisation account
- Which of the following is not shown under the heading "share capital in a balance sheet"?
(A) Authorised capital
(B) Issued capital
(C) Reserve capital
(D) Subscribed capital
- When all the forfeited shares are reissued then balance of share forfeited shares then proportionate amount of premium is.....
(A) share capital (B) profit-loss
(C) capital reserve (D) general reserve
- Debenture is..... for a company.
(A) capital (B) receivable
(C) liability (D) asset
- The analysis of the financial statements.....
(A) presents only results
(B) provides historical information
(C) make interpretation
(D) none of the above
- The expenses of the current year of a company is Rs.6,00,000; and if it is increased by 20% compared to the previous year, what would be the expenses of the previous year ?
(A) Rs.1,20,000 (B) Rs.5,00,000
(C) Rs.7,20,000 (D) None of these
- In which terms ratios are presented?
(A) Proportion (B) Percentage
(C) Time (D) All of these
- To arrive at liquid assets which of the following is deducted from current assets?
(A) Stock (B) Cash and bank balance
(C) Debtors (D) Bills receivables

19 . How many activities are there in cash-flow statement?

- (A) Five (B) Four (C) Three (D) Two

20. Collection of debtors and bills receivable is.....

- (A) cash inflow of operating activity
(B) cash outflow of operating activity
(C) cash inflow of financing activity
(D) cash inflow of investing activity

SECTION :- B

◆ Answer the following questions from 21 to 30 in one sentence each. (Each question carries 1 mark) [10]

21. Under which head goodwill is shown in balance sheet?
22. What is reconstruction of a partnership firm?
21. When and why the profit and loss adjustment account is prepared?
24. What is the dissolution of partnership firm?
25. Describe the methods of dissolution of a partnership firm.
26. Who is called debenture holder?
27. What is indicated by interest coverage ratio?
28. What is ratio?
29. What is cash flow?
30. Which transactions are always investing activities ?

SECTION :- C

◆ Answer Any 4 of the following questions from 31 to 36 in short. (Each question carries 3 marks) [12]

31. Jay and Ajay are the partners of a firm. Their capital ratio is 3:2. Jay is to be paid 8% commission on net

profit, after deduction of such commission. What amount will be received by Jay if profit for the year is Rs. 96,876?

32. Sanju, Raghu and Raju are partners of a partnership firm. Profit loss sharing ratio is 1:2:2 between them. All partners have decided to change profit-loss sharing ratio to 3:2:1. Calculate the sacrifice ratio of partners.
33. Pass journal entries for the following transactions of the firm in the case of firm's dissolution. [Narration not necessary]
(1) Goodwill is not disclosed in the book. But Rs. 60,000 realised during dissolution.
(2) The value of laptop is Rs. 45,000. One partner has taken it for Rs. 35,000.
(3) Sundry creditors Rs. 80,000, paid at 25% discount.
34. At the time of dissolution total assets of the firm are of Rs. 8,00,000. Out of that 40% are current assets. Where cash is included of Rs. 40,000. 120% of fixed assets are realised. 80% are realised from current assets. Show necessary calculations and write journal entries. [Narration not necessary]
35. On 1.1.2017 'Siddh Limited' issued 14,000, 8% debentures of 300 each at a premium of 5%. These debenturers are to be redeemed on 31.12.2023 at 330 per debenture. Write necessary journal entries in the books of the company [Without narration].
36. Distinguish between shares and debentures [3 points].

SECTION :- D

◆ Answer Any 3 of the questions in short.

[12]

37. From the following information of Manoj and Harish's firm, determine the value Goodwill by capitalised average profit method.

Year	Profit
2012-13	90,000
2013-14	1,00,000
2014-15	1,10,000
2015-16	1,30,000
2016-17	1,50,000

Additional information:

- (1) Assets of business 13,40,000
(2) Liabilities of business 3,40,000
(3) Normal rate of return of business is 10%.
38. Determine the value of goodwill of Prabha and Prabhu's firm on the basis of capitalised super profit method.
(1) Capital employed ₹ 9,00,000
(2) Expected rate of return 12%
(3) Last five years profit:

Year	Profit (Rs.)
2012-13	1,00,000
2013-14	1,40,000
2014-15	1,30,000
2015-16	1,50,000
2016-17	1,80,000

39. Profit and Loss statement for the year ending on 31-3-2016 and 31-3-2017 of M Company Ltd. are as follows.

Prepare comparative profit and loss statement.

Particulars	Note No.	31.3.2017	31.3.2016
Sales revenue	-	45,00,000	52,00,000
Other income	-	2,00,000	10,00,000
Net purchase	-	32,00,000	38,00,000
Other expenses (% of Sales)	-	22%	18%
Changes in Stock	-	(22,00,000)	(1,00,000)
Income-tax rate 30%	-		

40. From the following information of 'F.L.' Ltd, calculate debt equity ratio.

Particulars	Amt. (Rs)	Particulars	Amt. (Rs)
Equity share capital	10,00,000	Outstanding ext.	1,00,000
General reserve	6,00,000	Long term loan	2,00,000
Profit – loss A/c	4,00,000	Long term provisions	2,00,000

41. From the following information of "Ami" company, calculate cash flow from opening activities.

Particulars	31.3.2017 (Rs)	31.3.2016 (Rs)
Profit and loss A/c	89,000	64,000
General reserve	34,000	18,000
Taxation provision	22,000	23,000
Depreciation	28,000	16,000
Goodwill	15,000	19,000
Debtors	38,000	18,000
Creditors	45,000	22,000
Bills receivable	8,000	12,000
Bills payable	9,000	15,000

SECTION :- E

◆ Answer Any 3 of the following questions from 42 to 46 point wise. (Each question carries 8 marks) [24]

41. Aasha and Tina are partners in a firm sharing profit and loss in the ratio of 2:1. Their Balance Sheet as on 31/3/17 was as under:

Liabilities	Amt.(Rs)	Assets	Amt.(Rs)
Capital Accounts:		Goodwill	18,000
Aasha 80,000		Land and Building	72,000
Tina 60,000	1,40,000	Machinery	40,000
General Reserve	18,000	Stock	36,000
Workmen Compensation Reserve	4,500	Debtors 24,000	
Investment Fluctuation Fund	1,500	-Bad debt reserve 2,000	22,000
Creditors	28,000	Investment	8,000
Bills payable	12,000	Cash-bank	2,000
Advertisement Campaign Expenditure	6,000		
	2,04,000		2,04,000

They admitted Leena as a new partner from 1/4/17 on the following conditions:

(1) Leena will bring Rs.1,00,000 as her capital and Rs.24,000 as goodwill in cash.

(2) Value of land and building is to be increased by Rs.17,000.

(3) Value of machinery is to be decreased upto Rs.32,000.

(4) Provision for bad-debt is to be kept at 10% on debtors.

(5) Provision for outstanding electricity bill is to be made at Rs.1100.

(6) New profit sharing ratio of all three partners is to be kept at 2:1:2.

Prepare Revaluation account, partners' capital accounts, cash-bank account and Balance sheet after admission.

43. Parshvi and Aneri are the partners sharing profit and loss in the ratio 2:1. Balance sheet of their firm as on 3-2016 was as under:

Liabilities	Amt.(Rs)	Assets	Amt.(Rs)
Capital account:		Goodwill	21,000
Parshvi 91,000		Building	1,40,000
Aneri <u>84,000</u>	1,75,000	Furniture	28,000
Capital reserve	14,700	Stock	18,200
Workmen saving account	7,000	Debtors	16,800
Workmen profit sharing fund	8,400	Cash	56,000
10 % Loan from bank	35,000		
Creditors	39,900		
	<u>2,80,000</u>		<u>2,80,000</u>

On 1-4-2016 they admitted Henshi as a new partner on the following conditions:

- (1) New profit and loss sharing ratio is to be kept at 3:4:2.
 - (2) Henshi brings Rs. 40,000 as capital.
 - (3) Interest on bank loan is outstanding for one year.
 - (4) Personal expense of Parshvi paid by the firm is debited to the profit and loss account Rs.5600
 - (5) Reconstruction expense is paid by Aneri Rs. 8400.
 - (6) Goodwill is valued at Rs.90,000.
 - (7) Parshvi and Aneri will maintain their capital in the new firm in their new profit and loss sharing ratio by taking Henshi's capital as base. For this purpose necessary adjustments should be made in partners' current account.
- Prepare necessary accounts and balance sheet after admission.

44. Virat, Anu and Dhauney are partners in a firm sharing profit and loss in the ratio of their capitals:

Balance sheet of the firm as on 31/3/17.

Liabilities	Amt.(Rs)	Assets	Amt.(Rs)
Creditors	16,000	Goodwill	40,000
Workmen compensation reserve	12,000	Land-Building	2,00,000
Employee's profit sharing fund	30,000	Patents	60,000
Provident fund	45,000	Machinery	80,000
Capital A/c's		Debtors 35,000	
Virat 2,00,000		-Bad debt reserve <u>5,000</u>	30,000
Anu 20,000		Stock	53,000
Dhauney <u>80,000</u>	4,00,000	Bank	40,000
	<u>5,03,000</u>		<u>5,03,000</u>

Dhauney retires on the above date, Partners decided the following terms of retirement:

- (1) The new profit-loss sharing ratio of Virat and Anu is to be kept at 2: 3.
 - (2) Goodwill of the firm is to be valued at Rs.80,000.
 - (3) Paid Rs.60,000 for patents during current year which is for total 4 years.
 - (4) Machinery is to be depreciated by 10%.
 - (5) Bad-debt on debtors is to be written off Rs. 3,000.
 - (6) Rs.20,000 is to be paid to Dhauney.
 - (7) Market value of Stock is Rs. 54,000.
 - (8) New firm's total capital will be equal to total capital of old firm. The entire capital of the new firm is to be kept in new profit and loss sharing ratio of Virat and Anu. All necessary adjustments are to be made through bank.
- Prepare (1) Revaluation A/c (2) Capital A/cs of partners (3) Bank account (4) Balance sheet after retirement of Dhauney.

45. Dhruva Limited issued Rs.3,00,000 equity shares of Rs.10 each at a premium of Rs. 5 per share. Amount was called up as under:

On application Rs.4 per share.

On allotment Rs.7 per share (including premium)

On first call Rs.2 per share.

On final call Rs.2 per share.

Company received application for Rs.3,50,000 shares. Excess application were rejected and money paid thereon was refunded to applicants. All the sums due were received in full except first and final call on Rs.3,000 equity share held by Mira. Pass journal entries in books of company. (Narration not required).

46. Write journal entries in the books of company for forfeiture and reissue of forfeited shares from the following information :

- (1) Company forfeited 800 equity shares of Rs.10 each of a shareholder for non- payment of allotment money of Rs.4 per share and call money of Rs.3 per share. This shareholder had paid Rs.3 per share with application. Forfeited shares were reissued at 8 per share.

(2) R. K. Company limited forfeited 600 shares of Rs.10 each of Sunil. Sunil had paid application and allotment money at Rs. 5 per share, but had not paid Rs.3 per share and Rs.2 per share on first call and second call respectively. Out of the forfeited shares. 400 shares were reissued at Rs.6 per share to Mittal.

SECTION :- F

♦ **Answer the following questions from 47 to 48n short. (Each question carries 11marks)** **[22]**

47. Shubh and Labh are the partners of a partnership firm. From the Trial balance and adjustments prepare trading A/c, profit-loss A/c, profit-loss appropriation A/c, capital A/c and balance sheet.

Trial Balance of the firm as on 31.3.2018

Debit balance	Amount (Rs)	Credit balance	Amount (Rs)
Drawings :		Capital:	
Shubh	4,800	Shubh	24,000
Labh	3,200	Labh	16,000
Adjusted purchase	1,06,000	Sales	2,00,000
Stock of goods (31.03.18)	28,000	Payables	30,000
Receivables	48,000	Goods distributed as free samples	2,000
Wages-salary	10,000	Bank overdraft	14,000
Trading expense	16,000		
Building	50,000		
Furniture/fittings	10,000		
Office equipments	4,000		
Packing material stock	4,000		
Cash balance	2,000		
	<u>2,86,000</u>		<u>2,86,000</u>

Adjustments:

- (1) Provide interest @8% on capital and 12% on drawings. Shubh had withdrawn Rs. 400 at the end of each month and Labh had withdrawn on 1.10.2017.
 - (2) Credit sales Rs. 10,000 is not recorded and total of sales book of March is overcast by Rs. 2,000 by mistake.
 - (3) Write off additional bad debts of Rs. 2,000 and provide 5% bad debts reserve on debtors.
 - (4) Fittings of Rs. 4,000 became obsolete, which is not recorded in the books.
 - (5) Court has finalised claim of Rs. 4,000, for not meeting agreement to provide goods to a customer.
 - (6) Outstanding wages Rs. 2,000 is recorded to wages account but outstanding wages account is not recorded in trial balance.
48. Following balances are extracted from the books of Star Ltd. Prepare balance sheet as per Schedule - III of companies Act, 2013 as at 31.3.2018.

Balance Sheet as on 31.3.2018

Debit balance	Amount (Rs)	Credit balance	Amount (Rs)
Interest accrued	3,000	Trade payables	30,000
Plant and machinery	6,00,000	Long – term provisions	60,000
Cash on hand	37,000	Reserves and surplus	1,10,000
Trademark	20,000	Other current liabilities	25,000
Debtors	42,000	Short – term borrowings	24,000
10% Narmada bonds	70,000	Share capital	3,50,000
Loose tools	18,000	Short – term provisions	35,000
Telephone deposit	30,000	Long – term borrowings	1,20,000
Units of mutual fund (temporary)	10,000	Other long – term liabilities	76,000
	<u>8,30,000</u>		<u>8,30,000</u>

"ALL THE BEST"



- ✓ **Step :- 1**
Scan the QR code. And download the MY PAPER Application.
- ✓ **Step :- 2**
Sign up in My Paper Application
- ✓ **Step :- 3**
Go to Board Paper
- ✓ **Step :- 4**
Set your Medium & Std.
- ✓ **Step :- 5**
Then Click on Your subject.
- ✓ **Step :- 6**
Click on Q. Paper to get your Question paper PDF & Click on A. Key to get your Answer Key.

☛ You can see answer key on MY PAPER application in January month.

For Answer Keys Follow the Bellow Given Instructions



Step :- 1

Scan the QR code. And download the MY PAPER Application.

Step :- 2

Sign up in My Paper Application

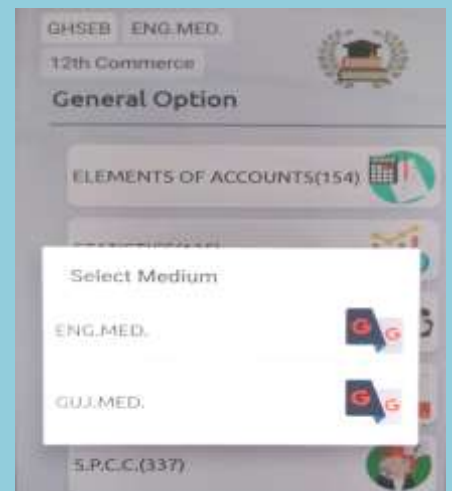
A screenshot of the 'My Paper' application login screen. It features a light blue header with a lightbulb icon. Below the header, there are input fields for 'Mobile Number' and 'Password', each with an eye icon for toggling visibility. A 'LOGIN' button is positioned below the password field. At the bottom, there are links for 'Don't have an account? Sign up' and 'Forgot Password?'.

Step :- 3

Go to Board Paper


Step :- 4

Set your Medium, Std. & Subject



Step :- 5

Click on Q. Paper to get your Question paper PDF & Click on A. Key to get your Answer Key.





Federation of Academic Association

PAPER - 1

- STD. 12TH EM
- SUB. STAT
- MARK 100
- TIME 3 Hour.

SECTION :- A

◆ Select and write the correct answer from the options.

[20]

1. Which index number is used to find the rate of inflation?

- (A) Cost of Living Index Number
- (B) Wholesale Price Index Number
- (C) Index Number of National Income
- (D) Index Number of Import-Export

2. Which consumption used in the calculation of laspeyre's index number?

- (A) Consumption of base year
- (B) Consumption of current year
- (C) Consumption of average
- (D) Consumption of any year

3. What does the numerator indicate in the formula for calculating correlation coefficient by Karl Pearson's method?

- (A) Product of variance of X and Y
- (B) Covariance of X and Y
- (C) Variance of X
- (D) Variance of Y

4. Which kind of the correlation exists if the following scatter diagram is of two variables X and Y ?



- (A) Perfect Positive correlation
- (B) Partial Positive correlation
- (C) Perfect Negative correlation
- (D) Paratial Negative correlation

5. What is coefficient of determination in the study of regression for two variables?

- (A) Product of two standard deviations
- (B) Square of correlation coefficient
- (C) Square of covariance
- (D) Product of two variances

6. For which value if the correlation coefficient (r), the regression coefficient becomes zero?

- (A) 1
- (B) -1
- (C) $\frac{1}{2}$
- (D) 0

7. Which variation is shown in "decrease in the agricultural production due to Floods"?

- (A) Random (B) Trend (C) Seasonal (D) Cyclical

8. Which variation is shown in decrease in the production of a company due to strike?

- (A) Graphical Method
- (B) Method of least squares
- (C) Method of moving average
- (D) Method of partial average

9. What is the total number of sample points in the sample space formed by throwing three six-faced balansced dice simultaneously?

- (A) 6^2 (B) 3^6 (C) 6×3 (D) 6^3

10. What is the value of P ($A \cap A'$) for events A and A'?

- (A) 1 (B) 0 (C) 0.5 (D) between 0 and 1

11. The binomial distribution has mean 5 and variance $\frac{10}{7}$. What will be the type of this distribution?

- (A) Positively skewed (B) Negatively skewed
- (C) Symmetric
- (D) Nothing can be said about the distribution

12. Which variable of the following will be an illustration of discrete variable?

- (A) Height of student (B) Weight of a student
- (C) Blood pressure of a student
- (D) Birth year of a student

13. Which variable of the following will be an illustration of continuous variable?

- (A) Number of accidents occuring at any place
- (B) Number of rainy days during a year
- (C) Maximum temperature during a day
- (D) Number of children in a family

14. What is the area under the normal curve to the left hand side of perpendicular line at X = ?

- (A) 0 (B) -0.5 (C) 1 (D) 0.5

15. Which of the following is the approximate value of mean deviation for normal variable?

- (A) $\frac{4}{5}\sigma$ (B) $\frac{4}{5}\mu$ (C) $\frac{2}{3}\sigma$ (D) $\frac{2}{3}\mu$

16. In normal distribution, usually what percentage of the observations are included in the limits $\mu \pm ?$

- (A) 34.13 % (B) 95.45 % (C) 68.26 % (D) 50 %

17. What is the value of $\lim_{x \rightarrow 3} 3x - 1$?

- (A) 9 (B) 10 (C) $\frac{4}{3}$ (D) 8

18. What is the modulus form of 0.3 neighbourhood of 3?

- (A) $|x - 0.3| < 3$ (B) $|x - 3| < 0.3$
 (C) $|x + 3| < 0.3$ (D) $|x - 3| > 0.3$

19. If u and v are two functions of x then what is the formula of derivative of their product?

- (A) $u \frac{du}{dx} + v \frac{dv}{dx}$ (B) $u \frac{du}{dx} - v \frac{dv}{dx}$
 (C) $\frac{du}{dx} \times \frac{dv}{dx}$ (D) $u \frac{dv}{dx} + v \frac{du}{dx}$

20. If u and v are functions of x then what is the formula for derivative of $\frac{v}{u}$?

- (A) $\frac{v \frac{du}{dx} - u \frac{dv}{dx}}{v^2}$ (B) $\frac{v \frac{du}{dx} + u \frac{dv}{dx}}{v^2}$ (C) $\frac{v \frac{dv}{dx} - u \frac{du}{dx}}{u^2}$ (D) $\frac{v \frac{dv}{dx} + u \frac{du}{dx}}{u^2}$

SECTION :- B

◆ Answer the following questions from 21 to 30 in one sentence each. (Each question carries 1 mark) [10]

21. Name the important basic tests of index numbers,
22. What is the main limitation of scatter diagram method?
23. Give the name of a method to obtain the best fitted regression Line.
24. What is time series?
25. State the formula for the probability of occurrence of at least one event out of three events A, B and C.
26. Define Bernoulli trials
27. Give the values of the constants used in probability density function of normal variable.
28. What percentage of area is covered under the normal curve within the range $\mu - 2\sigma$ to $\mu + 2\sigma$?
29. Define the δ neighbourhood of a .
30. Find $\frac{dy}{dx}$ if $y = 6x^3 + \frac{7}{2}x^2 + \frac{6}{5}x - 8$.

SECTION :- C

◆ Answer Any 7 of the following questions from 31 to 39 in short. (Each question carries 2 marks) [14]

31. The cost of living index numbers and average monthly wage from the year 2010 to 2013 are given as follows. Find the real wage for each year.

Year	2010	2011	2012	2013
Average monthly wage (Rs.)	35,000	40,000	42,000	50,000
Cost of living index number	120	150	130	160

32. Why is Fisher's index number called an ideal number?
33. If the regression line Y on X is $\hat{y} = 11.5 + 0.65x$ and $\bar{y} = 18$ find \bar{x} ?
34. State the merits of the method of moving average to measure trend.

35. Find the value of r if $\text{Cov}(x, y) = 120$, $s_x = 12$, $s_y = 15$
36. Find parameters of the binomial distribution where mean = 4 and variance = 2.
37. Find $\lim_{x \rightarrow -1} \frac{x^2 - 1}{x + 1}$, $x \in \mathbb{R} - \{-1\}$ by preparing table.
38. Find the value of $\lim_{x \rightarrow 2} \frac{x^5 - 32}{x - 2}$.
39. If $N(k_1, 0.5) = (19.5, k_2)$ then find the value of k_1 and k_2

SECTION :- D

◆ Answer Any 8 of the following questions from 40 to 51 in short. (Each question carries 3 marks) [24]

40. Compute the general index number using the following data and interpret it:

Items	A	B	C	D	E	F
Weight	15	23	15	25	10	12
Index No.	220	225	190	215	198	220

41. The following information is obtained by a survey conducted by a town planning committee of a state:

City	A	B	C	D	E
Population (lakh)	8	18	14	45	57
Rate of growth (per thousand)	5	15	10	20	13

44. The following information is obtained to study the relationship between average rainfall (in cm) and the yield of maize (in quintal per hectare) in different taluka of Gujarat:

Particulars	Rainfall (cm) x	Yield of Maize (Quintal per hectare) y
Mean	80	200
Variance	64	225
Correlation Coefficient = 0.80		

Estimate the yield of maize when the rainfall is 70 cm.

44. The following results are obtained for a bivariate data.

Particulars	x	Y
No. of observations	8	
Mean	100	100
The sum of squares of deviations taken from mean	130	145
The sum of product of deviations taken from mean	115	

Obtain the regression line of Y on X .

45. Obtain the linear equation for trend for a time series with $n = 6$, $\sum y = 501$, $\sum ty = 1762$.
46. The probability that a teenager coming to a restaurant for dinner orders pizza is 0.63. The probability of ordering cold drink is 0.54. The probability that the teenager orders at least one out of pizza and cold drink is 0.88. Find the probability that

- the teenager coming for dinner on a certain day orders only one of the two items from pizza and cold drink
47. If $5P(A) = 3P(B) = 2P(A \cup B) = \frac{3}{2}$ for the events A and B then find $P(A' \cup B')$.
48. Two six faces balanced dice are thrown simultaneously. If the sum of numbers on both the dice is more than 7 then find the probability that both the dice show same numbers.
49. There are one dozen mangoes in a box of which 3 mangoes are rotten. 3 mangoes are randomly selected from the box with replacement. If X denotes the number of rotten mangoes in the selected mangoes, obtain the probability distribution of X and hence find the expected value of the rotten mangoes in the selected mangoes.
50. State the properties of Bernoulli trials. (Any two)
51. Find $f'(0)$ if $f(x) = x^2 - 4x^3 + 3x^2 + x + 1$.

Section – E

◆ Answer Any 3 of the following questions from 52 to 55

point wise. (Each question carries 4 marks) [12]

52. In a city, daily sale of petrol at a petrol pump follows normal distribution and its mean and standard deviation are 33,000 litre and 3,000 litre respectively.
- (1) Obtain the percentage of a days of a month during which the daily sale of petrol is less than 30,000 litre
- (2) During the month of May, how many days are expected so that the sale of petrol is between 32,000 litre to 35,000 litre?
53. For a group of 1000 persons, the average height is 165 cms and variance is 100 (cms)^2 . The distribution of height of these persons follows normal distribution. From this information, determine the third decile and the 60th percentile interpret it.
54. Find the value of $\lim_{x \rightarrow 2} \frac{\sqrt{x+7}-3}{x-2}$
55. The demand function of a watch is $P = 6000 - 2x$. Find the demand which maximizes the revenue and also find the corresponding price.

SECTION :- F

◆ Answer Any 4 of the following questions from 56 to 60 as directed. (Each question carries 5 marks)[20]

56. Find the Laspeyre's, Paasche's and Fisher's index numbers for the year 2015 with the base year 2014 using the following information.

Items	unit	Price (Rs.)		Quantity (Consumption)	
		Year 2014	Year 2015	Year 2014	Year 2015
A	20kg	80	120	5kg	7kg
B	Kg	20	24	2400gm	4000gm
C	Quintal	2000	2800	10kg	15kg
D	Dozen	40	70	30pieces	36pieces

57. An Engineer Association wants to know the relation between the production (thousand units) and the unit productions cost of different factories. The information collected from six factories regarding these production and unit production cost is given below :

Production (thousand units)	15	20	35	24	18	31
Cost per unit of production (Rs.)	95	90	75	80	87	70

Find the correlation co-efficient between production and cost per unit of production.

58. An entrance test required to study abroad is conducted online. The marks obtained in Reasoning Ability and English Speaking in this online test (having negative marking system for wrong answer) by 5 students selected in a sample are given below:

Student	A	B	C	D	E
Marks in Reasoning Ability	5	5	5	5	5
Marks in English Speaking	2	-2	-2	0	2

Find the rank correlation coefficient between Reasoning Ability and ability in Speaking English.

59. Obtain the regression line of the demand on the price using the following information collected for the price of a commodity. Estimate the demand of the commodity if price is Rs. 40.

Price (Rs.)	38	36	37	37	36	38	39
Demand (hundred units)	12	18	15	12	17	13	13

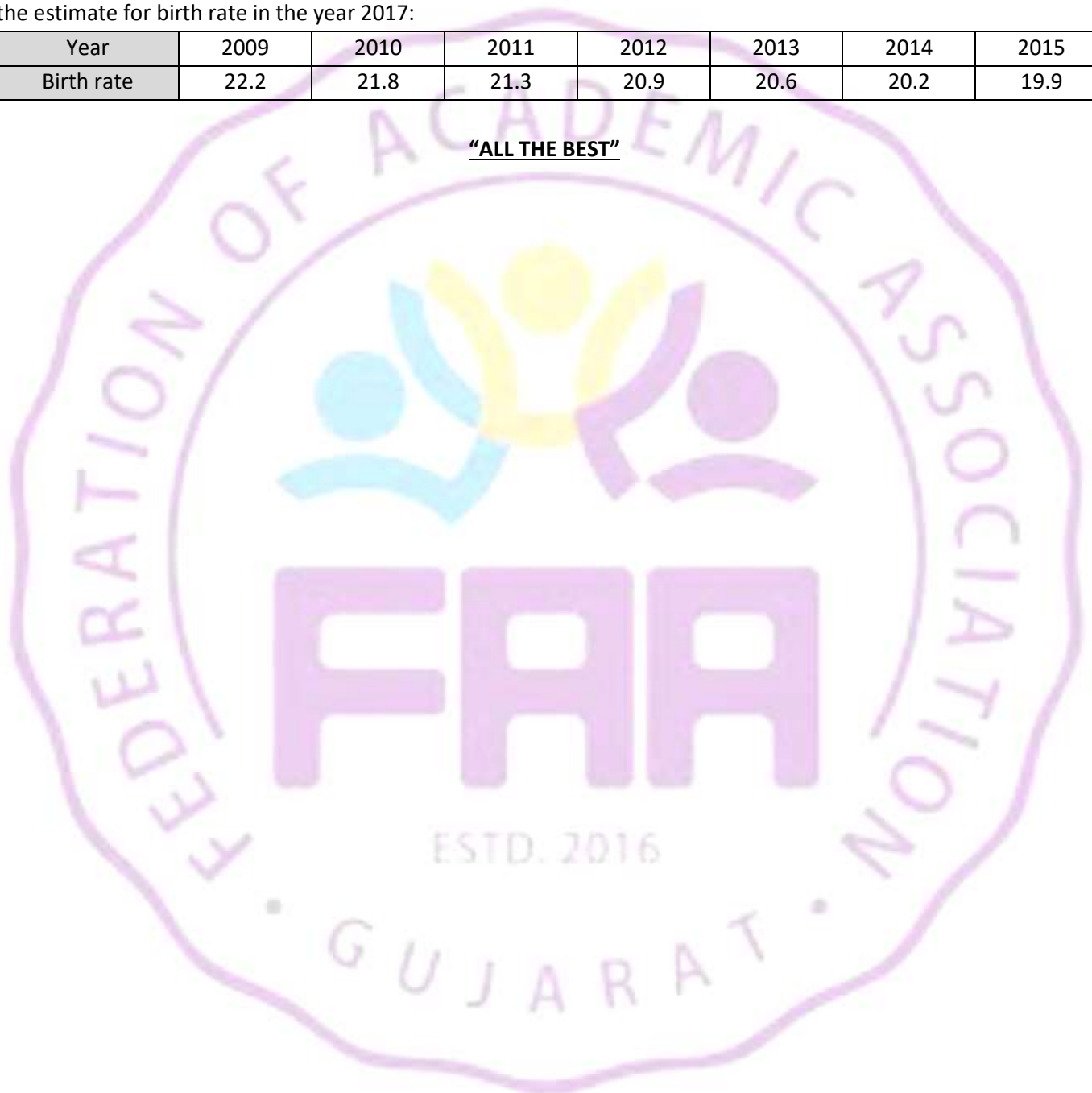
60. Find the trend using four monthly moving average for the following data showing monthly sales (in lakh Rs.) of a shop:

Month	March	April	May	June	July	Aug	Sept.	Oct	Nov.	Dec.
Sales (lakh Rs)	5	3	7	6	4	8	9	10	8	9

61. The birth rates of a state in different years are give in the following table. Fit a linear trend for these data. Also find the estimate for birth rate in the year 2017:

Year	2009	2010	2011	2012	2013	2014	2015
Birth rate	22.2	21.8	21.3	20.9	20.6	20.2	19.9

"ALL THE BEST"





Federation of Academic Association

PAPER - 2

- STD. 12TH EM
- SUB. STAT
- MARK 100
- TIME 3 Hour.

SECTION :- A

◆ Questions from 1 to 20 are multiple choice type questions. Select and write the correct answer from the option. [20]

- Which prices are considered in the construction of the cost of living index number?
(A) Market Price (B) Wholesale price
(C) Average price (D) Retail price
- If the purchasing power of money is 0.75 in the year 2016 with respect to the base year 2015 then what will be the price index number for the year 2016?
(A) 750 (B) 175 (C) 133.33 (D) 275
- Which kind of correlation will you get between the Number of its sold and its revenue at constant price?
(A) Perfect Positive (B) Partial Positive
(C) Perfect Negative (D) Partial Negative
- Which kind of the correlation exists if the following scatter diagram is of two variables X and Y ?



- (A) Perfect Positive correlation
(B) Partial Positive correlation
(C) Perfect Negative correlation
(D) Partial Negative correlation
- What is error e in estimation in case of line of regression of Y on X?
(A) $y - \hat{y}$ (B) $\hat{x} - \hat{y}$ (C) $x - \hat{x}$ (D) $\hat{y} - \hat{x}$
 - What is the value of b_{yx} if the regression line is $2x + 3y - 50 = 0$?
(A) $\frac{3}{2}$ (B) $-\frac{3}{2}$ (C) $-\frac{2}{3}$ (D) 2
 - Which of the following variations are due to cyclical component?
(A) Rise in demand during winter
(B) Decrease in the share prices due to recession in share market
(C) Decrease in the agricultural produce due to excessive rains
(D) Continuously decreasing death rate
 - Which method of finding trend is best to eliminate the effect of repetitive short-term variations ?
(A) Graphic Method

- (B) Method of least squares
(C) Kari Pearson" method
(D) Method of moving average

- Which event is given by a special subnet \emptyset of the sample space U?
(A) Certain event (B) Complementary event of
(C) Union of events U and \emptyset (D) Impossible event
- What is the probability of having 5 Thursdays in the month of February in a year which is not a leap year
(A) 0 (B) $\frac{1}{7}$ (C) $\frac{2}{7}$ (D) $\frac{3}{7}$
- State the relation between mean and variance of binomial distribution.
(A) $ny < npq$ (B) $np \leq npq$
(C) $np > npq$ (D) $np \geq npq$
- For a positively skewed binomial distribution with mean ? 10, which of the following values might be the value of mean?
(A) 5 (B) 3 (C) 9 (D) 7
- For what value of x, the value of p (x) of binomial distribution with parameters $n=4$ and $p=\frac{1}{2}$ becomes maximum ?
(A) 0 (B) 2 (C) 3 (D) 4
- What is the area under the normal curve to the right hand side of perpendicular line at $X = \mu$?
(A) 0 (B) 0.5 (C) 1 (D) -0.5
- Which of the following is approximate value of mean deviation for normal variable?
(A) $\frac{4}{5}\sigma$ (B) $\frac{4}{5}\mu$ (C) $\frac{2}{3}\sigma$ (D) $\frac{2}{3}\mu$
- For a normal variable X with mean μ and standard deviation σ , which of the following is standard normal variable Z for it?
(A) $Z = \frac{X-\sigma}{\mu}$ (B) $Z = \frac{\sigma-X}{\mu}$ (C) $Z = \frac{\mu-X}{\sigma}$ (D) $Z = \frac{X-\mu}{\sigma}$
- What is the modulus form of N (5,0.02) ?
(A) $|x + 5| < 0.02$ (B) $|x - 0.02| < 5$
(C) $|x - 5| > 0.02$ (D) $|x - 5| < 0.02$
- What is the value of $\lim_{x \rightarrow 1} \frac{x^2+1}{x+1}$?
(A) -5 (B) 5 (C) 4 (D) -4
- What is the formula for elasticity of demand?
(A) $-\frac{p}{x} \cdot \frac{dx}{dp}$ (B) $\frac{p}{x} \cdot \frac{dx}{dp}$ (C) $\frac{p}{x} \cdot \frac{dp}{dx}$ (D) $-\frac{p}{x} \cdot \frac{dp}{dx}$

20. If the function $f(x)$ is increasing at $x = a$ then which is the correct option from the following"

- (A) $f'(a) < 0$ (B) $f'(a) > 0$
(C) $f'(a) = 0$ (D) $f''(a) > 0$

SECTION :- B

◆ Answer the following questions from 21 to 30 in one sentence each. (Each question carries 1 mark) (10)

21. Which is the appropriate average for the construction of index number?
22. What is the main limitation of scatter diagram method ?
23. State the Linear Regression model.
24. What is a time series?
25. Define Random Experiment
26. State the relation between the probability of success and failure in Bernoulli trials.
27. "Standard score is independent of unit of measurement Is this statement true or false?
28. Define probability density function for normal variable.
29. if $\lim_{x \rightarrow -1} 4x + k = 6$ then find the value of k .
30. What is marginal revenue?

SECTION :- C

◆ Answer Any 7 of the following questions from 31 to 39 in short. (Each question carries 2 marks) [14]

31. The cost of living index numbers and average monthly wage from the year 2010 to 2013 are given as follows. Find the real wage for each year.

Year	2010	2011	2012	2013
Average monthly wage (Rs.)	35,000	40,000	42,000	50,000
Cost of living index number	120	150	130	160

32. Why is Fisher's index number called an ideal number?
33. if the regression line Y on X is $\hat{y} = 11.5 + 0.65x$ and $\bar{y} = 18$ find $\bar{x} = ?$
34. State the merits of the method of moving average to measure trend.
35. State the assumptions of mathematical definition of probability
36. Find parameters of the binomial distribution where mean = 4 and variance = 2.
37. Find $\lim_{x \rightarrow -1} \frac{x^2 - 1}{x + 1}$, $x \in R - \{-1\}$ by preparing table.
38. Find the value of $\lim_{x \rightarrow 2} \left[\frac{1}{x-2} - \frac{2}{x^2 - 2x} \right]$.
39. Obtain derivative of $f(x) = \sqrt{x}$ with the help of definition.

SECTION :- D

◆ Answer Any & of the following questions from 40 to 51 in short. (Each question carries 3 marks) [24]

40. Find the index number for the year 2016 with base year 2011 by weighted average method from the following data of price and weights of five different items.

Items	Weight	Price (Rs.)	
		Year 2011	Year 2016
A	40	160	200
B	25	400	600
C	5	50	70
D	20	10	18
E	10	2	3

41. State the merits and limitation of fixed base method.
42. Find the correlation coefficient from the following information of rainfall (X) (in cm) and yield (Y) (tons per hectare) for the last 10 years of a district.
 $n = 10$, $\text{cov}(x, y) = 30$, S.D. of $x = 5$ and variance of $Y = 144$
43. Six pairs of father-son are selected in a sample of an experiment to know the relation between the heights of fathers in cm (X) and the heights of their adult sons in cm (Y). The following results are obtained from it.
 $\sum x = 1020$, $\sum y = 990$, $\sum (x - 170)^2 = 60$, $\sum (y - 165)^2 = 105$
 $\sum (x - 170)(y - 165) = 45$
Obtain the regression line of the heights of sons (Y) on the heights of fathers (X). Also verify the reliability of the regression model.
44. The following information is obtained to study the relationship between average rainfall (in cm) and the yield maize (in quintal per hectare) in different talukaa of Gujarat

Particulars	Rainfall (cm) x	Yield of Maize (Quintal per Hectare) y
Mean	82	180
Variance	64	225
Correlation coefficient = 0.82		

- Estimate the yield of maize when the rainfall is 60 cm.
45. Obtain the linear equation for trend for a time series with $n = 6$, $\sum y = 501$, $\sum ty = 1762$.
46. The sample space for a random experiment of selecting number is $U = \{1, 2, 1, \dots, 120\}$ and all the outcomes the sample space equiprobable. Find the probability that the number selected is
(a) a multiple of 3
(b) a multiple of 4
(c) a multiple of both 3 and 4.
47. The probability that a person from a group reads newspaper X is 0.55, the probability that he reads newspaper Y is 0.69 and the probability that he reads both the newspaper X and Y is 0.27 Find the

probability that a person selected at random from this group.

- (1) reads at least one of the newspapers X and Y
- (2) does not read any of the newspapers X and Y
- (3) reads only one of the newspapers X and Y.

48. If $P(A) = \frac{2}{3}$, $P(B) = \frac{3}{5}$ and $P(B/A) = \frac{3}{4}$ for two events in the sample space of a random experiment then find $p(A/B)$.

49. The probability distribution of a random variable X is defined as follows

$$p(x) = \frac{K}{(x+1)!}, x = 1, 2, 3; K = \text{constant}$$

Hence find (i) constant K (ii) $P(1 < X < 4)$

50. What is discrete probability distribution? State its properties.

51. Find $f''(0)$ if $f(x) = x^4 - 4x^3 + 3x^2 + x + 1$.

SECTION :- E

◆ Answer Any 3 of the following questions from 52 to 55 pointwise. (Each question carries 4 marks) [12]

52. The average monthly expense of students residing in university hotel is Rs.2000 and its standard deviation

is ₹ 500. If monthly expense of a student follows normal distribution then

- (1) Find percentage of students having expense between Rs.750 and Rs.1250.
- (2) Find the percentage of students having expense less than Rs.2400.

53. The maximum temperature of a city during summer follows normal distribution. On a particular day, the probability that the maximum temperature of the city is more than 31° Celsius is 0.3085, whereas the probability that during some other day, the maximum temperature is less than 27° is 0.0668. Find mean and standard deviation of the maximum temperature of the city.

54. Find the value of $\lim_{x \rightarrow 0} \frac{\sqrt{3+x} - \sqrt{3}}{x}$.

55. The daily cost of production for x tons of a commodity is $10x^2 - 1000x + 50000$. How many units should be produced for the minimum cost? Also find the minimum cost.

SECTION :- F

◆ Answer Any 4 of the following questions from 56 to 60 as directed. (Each question carries 5 marks) [20]

56. Find the Paasche's and Fisher's index numbers for the year 2015 with the base year 2014 using the data given below.

Items		A	B	C	D	E
Year 2014	Price(Rs.)	100	100	150	180	250
	Total expenditure	400	500	600	1080	1000
Year 2015	Price(Rs.)	120	120	160	200	300
	Total expenditure	720	600	800	1000	1200

57. The details of monthly sale of mobile phones (in thousand units) and its profit (in lakh Rs.) for the last six months for a company making mobile phones are given below.

No. of mobile phones sold (thousand units) x	3	8	12	5	7	5
Profit (lakh Rs.) y	6	10	15	10	9	8

Find the correlation coefficient between 'number of mobile phones sold and its 'profit',

58. To know the relation between understanding of students in the subject of Economics and their dancing skill, a sample of eight students is taken and a test is conducted for them. The marks obtained are given below. Find the rank correlation coefficient between the marks obtained in two subjects.

Marks in Economics	60	30	10	20	30	50	30	40
Marks in dancing skill	80	20	60	40	12	28	20	15

59. The information regarding the experience (in years) of eight workers on a machine and their performance ratings based on the nondefective units they manufactured in every 100 units is as follows.

Experience of worker (years)	5	12	15	8	20	18	22	25
Performance rating	80	82	85	81	90	90	95	97

Obtain the regression line of the performance rating on the experience and estimate the performance rating if a worker has an experience of 17 years.

60. The following data are available for the number of passengers who travelled in the last 5 years by the aircrafts of an airline company. Estimate the trend for the year 2016 by fitting linear trend.

Year	2011	2012	2013	2014	2015
No. of passengers (thousands)	45	47	44	40	38

61. The average monthly closing prices of shares of a company in the year 2016 are given in the following table. Find the trend using four monthly moving averages.

Month	January	February	March	April	May	June	July	August	Sept.	Oct.	Nov.	Dec.
Share price(Rs.)	253	231	350	261	262	266	263	261	281	278	278	272

"ALL THE BEST"



Federation of Academic Association

PAPER - 3

- STD. 12TH EM
- SUB. STAT
- MARK 100
- TIME 3 Hour.

SECTION :- A

◆ Answer the following questions by selecting the correct option from the given options : [Questions 1 to 20 -1 mark each] [20]

- The price of an item increased by 4.5 times in the current year as compared to the base year. What will be the price index number ?
(a) 45 (b) 450 (c) 550 (d) 350
- Which method is useful to compare the long term variations in the values of the variable ?
(a) Chain base method (b) Laspeyre's method
(c) Fixed base method (d) Paasche's method
- What is the value of r , if all the points plotted in a scatter diagram lie on a single line only?
(a) 0 (b) 1 or -1 (c) 0.5 (d) -0.5
- What does the numerator indicate in the formula for calculating the correlation coefficient by Karl Pearson's method ?
(a) Product of variance of X and Y
(b) Covariance of X and Y
(c) Variance of X (d) Variance of Y
- Which statistician used term 'regression' for the first time?
(a) Karl Pearson (b) Sir Francis Galton
(c) Spearman (d) Fisher
- If $u = \frac{x-15}{10}$ and $v = \frac{y-50}{2}$ and $b_{yx} = 7.5$, what is the value of b_{vu} ?
(a) 7.5 (b) 1.5 (c) 37.5 (d) 150
- Due to new technology if there is abnormal changes in the demand of an item, then what is that component of time series called ?
(a) Long - term component (b) Cyclical component
(c) Seasonal component (d) Irregular component
- Which component of the time series is impossible to predict ?
(a) Random component (b) Trend
(c) Seasonal component (d) Cyclical component
- What is the total number of sample points in the sample space formed by throwing three six-faced balanced dice simultaneously ?
(a) 6^2 (b) 3^6 (c) 6×3 (d) 6^3
- What is the value of $P(A \cap A')$ for events A and A' ?
(a) 1 (b) 0 (c) 0.5 (d) between 0 and 1

11. What are the parameters of Binomial Probability distribution ?

- (a) n and q (b) n and p (c) p and q (d) n , P and q

12. For a symmetrical binomial distribution with $n = 10$, which of the following values might be the value of mean ?

- (a) 5 (b) 3 (c) 9 (d) 7

13. A random variable X assumes the values -2, 0 and 2 only with respective probabilities $\frac{1}{5}$, $\frac{3}{5}$ and k . If $0 < k < 1$, what will be the value of k ?

- (a) $\frac{1}{5}$ (b) $\frac{4}{5}$ (c) $\frac{2}{5}$ (d) $\frac{3}{5}$

14. If the distribution of normal variable is shown $N(20, 4)$ then which of the following intervals includes 99.73 % of observations ?

- (a) (18, 22) (b) (16, 24) (c) (14, 26) (d) (12, 28)

15. What is the total area under normal curve among the following ?

- (a) -1 (b) 0 (c) 1 (d) 0.5

16. What is the value of 'e' in the probability density function of a normal distribution ?

- (a) 2.7831 (b) 2.7381 (c) 2.7138 (d) 2.7183

17. How is x tends to 2 expressed ?

- (a) $x = 2$ (b) $x \neq 2$ (c) $x \rightarrow 2$ (d) x is close to 2

18. What is the modulus form of $N(5, 0.02)$?

- (a) $|x + 5| < 0.02$ (b) $|x - 0.02| < 5$
(c) $|x - 5| > 0.02$ (d) $|x - 5| < 0.02$

19. What is the derivative of $f(x) = \frac{4}{x^2}$?

- (a) $\frac{4}{2x}$ (b) $-\frac{8}{x^3}$ (c) $\frac{8}{x^3}$ (d) 0

20. What is the necessary condition for profit function to be maximum ?

- (a) $\frac{dp}{dx} < 0$ (b) $\frac{dp}{dx} > 0$ (c) $\frac{dp}{dx} = 0$ (d) $\frac{d^2p}{dx^2} = 0$

SECTION :- B

◆ Answer the following questions in one sentence each : [Questions 21 to 30 -1 mark each] [10]

- Which index number is used to find the rate of inflation and to find the rate of dearness allowance ?
- What is Scatter Diagram ? What is the main limitation of it ?
- State the Linear Regression model.

24. Which method of finding trend is best to eliminate the effect of repetitive short-term variations ?
25. Define Random experiment and Favourable outcomes.
26. Define Bernoulli trials.
27. Give the values of the constants used in probability density function of normal variable.
28. "Standard score is independent of unit of measurement." Is this statement true or false?
29. Express 0.001 neighbourhood of -5 in modulus form.
30. Find $f'(x)$, if $f(x) = 9x^2 - 8x + 6$

SECTION :- C

◆ Answer the following questions as asked : [Any seven from questions 31 to 39 – 2 marks each] [14]

31. The percentage increase in the price relatives of three items are 315, 328 and 390 respectively. If the importance of these items has ratio 5 : 7 : 8, find the general price index number.
32. Find the value of r from the following data :

Particulars	X	Y
No. of observations	25	
Mean	40	50
The sum of squares of deviations taken from mean	120	160
The sum of product of deviations taken from mean	100	

33. If the regression line of Y on X is $\hat{y} = 11 + 3x$ and $S_x : S_y = 3 : 10$, find the coefficient of determination.
34. Explain the importance of time series in short.
35. Find the probability of getting R in the first place and M in the last place when all the letters of the word RANDOM are arranged in all possible ways.
36. State the formula to find mean and variance of discrete variable.
37. Define the δ neighbourhood of a and the punctured δ neighbourhood.
38. Find the value of $\lim_{x \rightarrow -2} \frac{x^7 + 128}{x + 2}$.
39. If $f(x) = 4x^3 + 2x^2 + 7x + 9$, then for which value of x , $f''(x) = 52$?

SECTION :- D

◆ Answer the following questions as asked : [Any eight from questions 40 to 51-3 marks each] [24]

40. The price of wheat increased by 70 % and price of rice increased by 40 % in the year 2022 with respect to the year 2019. The price of bajri decreased by 25 %.
- The price of oil increased by 40 % and the price of ghee decreased by 5 %. If the importance of oil is

three times and of rice is double that of ghee and the importance of each of wheat and bajri is double that of rice, find price index number of the group of these five items and interpret it.

41. Find the fixed base index numbers from the chain base index numbers given below :

Year	2018	2019	2020	2021	2022
Index Number	120	90	140	125	105

42. The information of health index x and life expectancy y is obtained for 10 people. These data are ranked to find the rank correlation coefficient and the sum of squares of the ranks was found to be 42.5. It was also observed that health index 70 was repeated three times and life expectancy 45 was repeated twice in the data. Find the rank correlation coefficient using this information.
43. (1) If the regression line is $\hat{y} = \frac{x}{2} + 5$ and $S_y : S_x = 5 : 8$, find the coefficient of determination.
 (2) If the regression line of Y on X is $4x + 5y - 65 = 0$ find the value of regression coefficient b .
44. Obtain the regression line of Y on X from the following data and estimate Y for $X = 30$:
 $n = 10$, $\sum x = 250$, $\sum y = 300$, $\sum xy = 7900$, $\sum x^2 = 6500$
45. Obtain the linear equation for trend for a time series with $n = 7$, $\sum y = 145.2$, $\sum ty = 673.3$.
46. 4 couples (husband - wife) attend a party. Two persons are randomly selected from these 8 persons. Find the probability that the selected persons are (1) husband and wife. (2) one man and one woman, (3) one man and one woman who are not husband and wife.
47. The sample space for a random experiment of selecting numbers is $U = \{1, 2, 3, \dots, 120\}$ and all the outcomes in the sample space are equiprobable. Find the probability that the number selected is (1) a multiple of 3, (2) a multiple of 4 and (3) a multiple of both 3 and 4.
48. If $5P(A) = 3P(B) = 2P(A \cup B) = \frac{3}{2}$ for two events A and B, then find $P(A' \cup B')$
49. There are one dozen mangoes in a box of which 3 mangoes are rotten. 3 mangoes are randomly selected from the box without replacement. If X denotes the number of rotten mangoes in the selected mangoes, obtain the probability distribution of X and hence find expected value and variance of the rotten mangoes in the selected mangoes.

50. The probability distribution of the monthly demand of laptop in a store is as follows :

Demand of laptop	1	2	3	4	5	6
Probability	0.10	0.15	0.20	0.25	0.18	0.12

Determine the expected monthly demand of laptop and find variance of the demand.

51. A factory produces x units and its production capacity is 60,000 units per day.

Its daily total production cost is

$$C = 250000 + 0.08x + \frac{200000000}{10}.$$

How many units should be produced for minimum production cost ?

SECTION :- E

- ◆ Answer the following questions as asked : [Any three from questions 52 to 55 - 4 marks each] [12]

52. The monthly bill amount of regular customers of a provision store follows normal distribution. If 7.78 % customers have monthly bill amount less than Rs. 3590 and 94.52 % customers have bill amount less than Rs. 5100, then determine the parameters of the normal distribution.

53. A normal variable X has mean 400 and variance 900. Find the fourth decile and 90th percentile for this distribution.

54. Find the value of $\lim_{h \rightarrow 0} \frac{(x+h)^5 - x^5}{h}$

55. Find the maximum and minimum values of $y = x^3 - 2x^2 - 4x - 1$

SECTION :- F

- ◆ Answer the following questions as asked : (Any four from questions 56 to 61 -5 marks each) [20]

56. The following data are given about the index numbers and weights for the items of living of industrial workers in a city in the year 2022 :

Group	Food	Fuel and Electricity	Housing	Clothing	Miscellaneous expense
Price Index of 2022 (Base year 2020)	255	174	234	153	274
Weight	42	8	12	18	20

Find the cost of living index number for industrial workers. If the average monthly salary paid to these workers in the year 2020 was Rs. 6,000, what should be the monthly salary in the current year 2022 to maintain the same standard of living ?

57. From the following information of a sample of ten students of a school regarding their marks in two subjects Accountancy and Statistics :

Marks in Accountancy	60	80	50	80	95	40	70	40	35	90
Marks in Statistics	50	75	60	85	90	40	65	30	45	70

Find the coefficient of correlation between the marks of two subjects.

58. Six dancers A. B. C. D, E and F in a dance competition were judged by two dance Gurus. The rank assigned to the dancers are as follows :

Rank	1	2	3	4	5	6
By Guru 1	B	F	A	C	D	E
By Guru 2	F	A	C	B	E	D

Find the rank correlation coefficient between the judgement of the two Gurus.

59. The following data gives the experience of machine operators and their performance ratings :

Operator	1	2	3	4	5	6	7	8
Experience (years) x	12	5	10	3	18	4	12	16
Performance rating y	83	75	80	78	89	68	88	87

Calculate the regression line of performance ratings on the experience and estimate the performance rating of an operator having 7 years of experience.

60. The information about death rate of a state in different years is given in the following table :

Year	2015	2016	2017	2018	2019	2020	2021
Death rate	7.6	6.9	7.1	7.3	7.2	6.9	6.9

Fit a linear equation to find trend and hence estimate the death rate for the year 2023.

61. The wholesale price index numbers for different quarters (Q) of a year are obtained as follows :

Year	2020				2021				2022			
Quarters	Q ₁	Q ₂	Q ₃	Q ₄	Q ₁	Q ₂	Q ₃	Q ₄	Q ₁	Q ₂	Q ₃	Q ₄
Index number	110	110	125	135	145	152	155	168	131	124	132	153

Find the trend by four quarterly moving averages.

All The Best



✓ **Step :- 1**

Scan the QR code. And download the MY PAPER Application.

✓ **Step :- 2**

Sign up in My Paper Application

✓ **Step :- 3**

Go to Board Paper

✓ **Step :- 4**

Set your Medium & Std.

✓ **Step :- 5**

Then Click on Your subject.

✓ **Step :- 6**

Click on Q. Paper to get your Question paper PDF & Click on A. Key to get your Answer Key.

☛ You can see answer key on MY PAPER application in January month.

For Answer Keys Follow the Bellow Given Instructions



Step :- 1

Scan the QR code. And download the MY PAPER Application.

Step :- 2

Sign up in My Paper Application

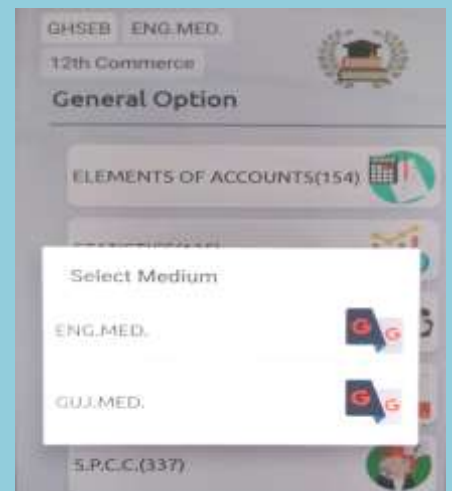
A screenshot of the 'My Paper' application login screen. It features a light blue header with a lightbulb icon. Below the header, there are input fields for 'Mobile Number' and 'Password', each with an eye icon for toggling visibility. A 'LOGIN' button is positioned below the password field. At the bottom, there are links for 'Don't have an account? Sign up' and 'Forgot Password?'.

Step :- 3

Go to Board Paper


Step :- 4

Set your Medium, Std. & Subject



Step :- 5

Click on Q. Paper to get your Question paper PDF & Click on A. Key to get your Answer Key.





Federation of Academic Association

PAPER - 1

- STD. 12TH EM
- SUB. ECO
- MARK 100
- TIME 3 Hour.

SECTION : A

✦ Choose correct answer from the given options. [20]

1. Which of the following statements is true for internet in the present times?
(A) It is a tool for studying.
(B) Fulfills the role of a teacher in the process of studying.
(C) Is a close substitute for schools.
(D) Is only a tool for entertainment for youth.
2. From the below mentioned, which type is not included in graphs?
(A) Histogram (B) Frequency curve
(C) Frequency Polygon (D) Pictogram
3. What was India's ranking in the world according to the Human Development Index in 2014?
(A) 127 (B) 128
(C) 129 (D) 130
4. Generally which countries are related with the concept of economic growth?
(A) Developed (B) Developing
(C) Backward countries (D) Third world countries
5. What is the type of inflation when the government controls inflation via rules or laws?
(A) Suppressed (B) Open
(C) Galloping (D) Hidden
6. In which year, RBI was nationalised ?
(A) 1949 (B) 1967
(C) 1935 (D) 1955
7. Who operates Pradhan Mantri Jan Dhan Yojana?
(A) Central Government (B) SBI
(C) Post Office (D) RBI
8. What was the amount of Per Capita Monthly Expenditure Estimated by the Tendulkar committee as a determinant of poverty line for the year 2011-12?
(A) 816 (B) 916
(C) 1000 (D) 2000
9. What is the percentage of malnourished people in India in 2014-16?
(A) 23.7 (B) 15.2
(C) 11.2 (D) 20.5
10. A person is capable, willing and ready to work at current wage rate but not getting work is said to be
(A) Unemployed (B) Poor
(C) Surplus (D) Worker
11. Which type of production technique increase unemployment ?
(A) Labour intensive (B) Capital intensive
(C) Agriculture oriented (D) Education oriented

12. Which state in India has the highest female population per 1000 males ?
(A) Gujarat (B) Maharashtra
(C) Kerala (D) Uttar Pradesh

13. Give the order of India in the most populated country.
(A) Second (B) Third
(C) First (D) Fourth

14. Which institute does agricultural research?
(A) ICAR (B) CIBRC
(C) Rural banks (D) RBI

15. What happens owing to trade ?
(A) The mobility of factors of production declines.
(B) The number of industries declines.
(C) Production process slows down
(D) Diversification in production occurs.

16. A balance of payments has how many accounts ?
(A) 1 (B) 2
(C) 3 (D) 4

17. When was the implementation of special economic zones ?
(A) 1947 (B) 1991
(C) 2000 (D) 2011

18. What was the proportion of employment in industries in 2011-12 ?
(A) 10% (B) 24.3%
(C) 27% (D) 49%

19. Identify the type of effect that is caused by migration due to pull factors.
(A) Negative (B) Positive
(C) Zero (D) Relative

20. Which age group of children are eligible for compulsory and free education according to the Indian constitution ?
(A) 4-14 yrs (B) 5-15 yrs
(C) 6-14 yrs (D) 7-15 yrs

SECTION : B

✦ Write the answer of the following questions.[10]

21. What is meant by a diagram?
22. Which economist presented the Physical Quality of Life Index?
23. Define bank rate.
24. Give the full form of CORE in the context of banking.
25. Which method is used to measure relative poverty?
26. Which age group is called the productive age group ?
27. Give full form of NABARD.
28. What is meant nature of international trade ?
29. How many special economic zones are in India?
30. What is meant by development based migration.

SECTION : C

✦ Write the answer of any 12 Questions from given questions. [Each carries 2 Marks] [24]

31. How is computer technology useful in the process of learning?
32. State the types of diagrams.
33. State the characteristics of economic development.
34. List the indicators of economic development.
35. State the characteristics of inflation.
36. State the types of money.
37. Define repo rate and reverse repo rate.
38. Explain the functions of RBI as “Bankers bank” and as “lender of the last resort”?
39. Write a short note on Prime Minister Rojgar Yojana.
40. Explain disguised unemployment with examples.
41. Explain cyclical unemployment with examples.
42. Explain underemployment with examples.
43. Explain exchange rate in short.
44. How do industries help to modernise agriculture ?
45. Give the meaning of urbanisation.
46. Give the meaning of internal and international trade.

SECTION : D

✦ Write the answer of any 7 questions from given questions. [Each carries 3 Marks] [21]

47. State the aspects to be considered while drawing a diagram or a graph.
48. Give the difference between economic development and economic growth.
49. Explain the meaning of HDI and its constituents (components).
50. Discuss health related indicators of poverty.

51. “Defective education system is responsible for unemployment.” Explain.
52. Difference between internal and international trade
53. State the factors influencing the balance of payments.
54. Write a short note on Special Economic Zone (SEZ)
55. State the causes of low death-rate.
56. ‘Agricultural research is the backbone of India.’- Explain.

SECTION : E

✦ Write the answer of any 5 questions from given questions. [Each carries 5 Marks] [25]

57. Define the barter system and state its limitations.
58. What is Poverty? Explain its indicators.
59. Explain in detail the methods to control population.
60. Discuss the reasons for lower agricultural productivity.
61. Explain the measures to solve problems of Urbanisation.
62. Explain the causes of migration.
63. Show a time dependent line diagram for the below information and analyse it.

Year	1950-51	1970-71	1990-91	2000-01	2011-12
Contribution of Agriculture sector to National Income of India (in %)	53	42	30	22	14

“ALL THE BEST”



Federation of Academic Association

PAPER - 2

- STD. 12TH EM
- SUB. ECO
- MARK 100
- TIME 3 Hour.

SECTION : A

✦ Choose correct answer from the given options. [20]

1. For which type of distribution a graph is drawn?
(A) Continuous
(B) Discrete/Discontinuous
(C) Skewed
(D) Ideal
2. Who/Which type of organization presents data CDs pertaining to economic information?
(A) Private publishers
(B) Schools
(C) Laboratories, research centres, government etc.
(D) Individuals
3. Which concept is qualitative?
(A) National Income growth rate
(B) Per capita Income growth rate
(C) Economic growth
(D) Economic development
4. Economic development is of economic growth.
(A) A reason
(B) A result
(C) An instrument
(D) A remediable
5. Which type of problem is inflation?
(A) Monetary
(B) Social
(C) Psychological
(D) Political
6. What is the meaning of the word 'bank' in Sanskrit language?
(A) Money supply
(B) Stock of money
(C) Investment
(D) Commerce
7. What is life expectancy years in India in the year 2014?
(A) 75
(B) 55
(C) 85
(D) 68
8. Who presented four measuring rods of measuring types of unemployment ?
(A) Raj Krishna
(B) Mahalanobis
(C) Keynes
(D) Rodan
9. With reference to which compulsory unemployment concept is discussed?
(A) Active
(B) Inactive
(C) Children
(D) Senior citizens
10. Which state has the lowest poverty in the year 2013 in India?
(A) Gujarat
(B) Rajasthan
(C) Goa
(D) Bihar
11. Which one of the following is qualitative tool of monetary monetary policy ?
(A) Repo Rate
(B) RBI
(C) Bank Rate
(D) Indiscriminatory Interest Rate
12. How much was the female population per 1000 male population in India in 2011 ?

- (A) 930
(B) 950
(C) 940
(D) 970
13. State the ratio of death rate of India in 2011.
(A) 7.1
(B) 5.1
(C) 21.8
(D) 10.8
14. When was NABARD constructed ?
(A) 1947
(B) 1969
(C) 1975
(D) 1982
15. Which significant change has occurred in India's foreign trade after 2005 ?
(A) The size of trade has increased and India's rank in world trade has risen.
(B) The size of trade has increased but India's rank in world trade has fallen.
(C) India's balance of payments has continuously recorded a deficit.
(D) The share of traditional exports in trade has increased.
16. The systematic account of import export for tangible-intangible goods of a country is known as ____
(A) Balance of trade
(B) exchange
(C) balance of payments
(D) trade size
17. How much investment is needed in large scale industries ?
(A) 2 crores
(B) 5 crores
(C) More than 10 crores
(D) 100 crores
18. What is a type of Industries based on Khakhara, Papad and Incense sticks?
(A) Agricultural
(B) Cottage
(C) Large
(D) Medium
19. Approximately, what was the percentage of population living in cities in 2011 ?
(A) 20%
(B) 32%
(C) 35%
(D) 25%
20. In which year was ONGC set up ?
(A) In 1947
(B) In 1951
(C) In 1955
(D) In 1959

SECTION : B

✦ Write the answer of the following questions. [10]

21. What is a data CD?
22. Which factors are included in HDI?
23. Define Bank.
24. What is Cash Reserve Ratio?
25. Which kind of expenditure is included by the Tendulkar Committee for the poverty line?
26. Give the meaning of "Drain of brain".
27. Which corporation was made to Store agriculture product ?
28. What is meant by exchange rate ?

29. What are Public Corporations?
30. What is meant by urbanisation?

SECTION : C

✦ Write the answer of any 12 Questions from given questions. [Each carries 2 Marks] [24]

31. What is meant by a diagram and for what purpose it is drawn?
32. Which aspects should be considered while drawing a pie-diagram?
33. State the limitations of National Income as an indicator.
34. Between growth and development, which one is difficult to measure ? Why ?
35. State the limitations of the barter system.
36. State the causes of inflation.
37. Define the meaning of bank rate.
38. Give the classification of scheduled banks in India.
39. Explain the modern approach of poverty.
40. "Labour intensive technique is more applicable for India." - Explain.
41. When and with what objective Prime Minister Irrigation scheme was started ?
42. Write a short note on NREGA or MGNREGA
43. Difference between balance of trade and balance of payments.
44. Give any two points of difference between domestic trade and international trade.
45. What is a small scale industry ?
46. Explain the definition of city according to the 2001 census.

SECTION : D

✦ Write the answer of any 7 questions from given questions. [Each carries 3 Marks] [21]

47. State the caution in using computers and the internet.
48. At present, India is growing or developing or both. Give an answer by stating reasons.
49. Explain the social reasons of poverty.
50. Explain the concept of disguised unemployment.
51. = Short note: Crop rotation
52. Explain in detail the economic factors responsible for the high birth rate in India.
53. Reasons for foreign trade
54. Discuss any five factors affecting the nature of International trade.
55. State the importance of Small Scale industries in India.
56. Write down the limitations of economic growth.

SECTION : E

✦ Write the answer of any 5 questions from given questions. [Each carries 5 Marks] [25]

57. Give the meaning of money and explain its functions.
58. Discuss the measures to reduce poverty in India.
59. Discuss in detail the gender-ratio (number of females per 1000 males).
60. Explain any five points of importance of the agricultural sector in India's economic development.
61. Give the meaning of migration. Discuss the negative effects of migration.
62. Explain in detail, about India's educational scenario.
63. Analyse the given numerical information using a simple bar diagram.

Year	1931	1961	1991	2001	2011
No. of females per 1000 males (Gujarat)	945	940	936	921	948

"ALL THE BEST"



Federation of Academic Association

PAPER - 3

- STD. 12TH EM
- SUB. ECO
- MARK 100
- TIME 3 Hour.

SECTION : A

◆ Choose correct answer from the given options. [20]

1. For which type of distribution a diagram is drawn?
(A) Continuous
(B) Discrete/Discontinuous
(C) Skewed
(D) Ideal
2. Which of the following diagrams are drawn for similar data?
(A) Simple bar diagram and clustered bar diagram
(B) Bar diagram and pie diagram
(C) Clustered bar diagram and time-series graph
(D) Pie diagram and time-series graph
3. Development is a multi dimensional process. Who has given this statement?
(A) Todaro (B) Kindleberger
(C) Marshall (D) Machlup
4. What is the value of Human Development Index?
(A) 0 (B) 1 (C) between 0 & 1 (D) 100
5. Who gave the definition "What is accepted universally in exchange of goods or services is money"?
(A) Marshall (B) Keynes (C) Pigou (D) Robertson
6. Short term lending in theoretical sense is for what period?
(A) Up to 1 year (B) 1 to 3 years
(C) 1 to 5 years (D) 5 to 15 years
7. How many minimum daily calories per person per day is decided by Indian Council of Medical Research for rural area?
(A) 2400 (B) 2300 (C) 2200 (D) 2100
8. According to all estimate for the year 2011-12, which of the following state falls in the category of 30-40% poverty?
(A) Punjab (B) Jammu & Kashmir
(C) Karnataka (D) Odisha
9. Compulsory nature of unemployment is seen in which context of labour supply?
(A) Active (B) Passive (C) Children (D) Elders
10. Which type of unemployment arise due to lack of effective demand?
(A) Frictional (B) Seasonal (C) Cyclical (D) Disguised
11. What is the estimated population of India between 2011 - 2025 ?
(A) 155 crores (B) 130 crores
(C) 139.98 crores (D) 180 crores
12. In which year was planning started in India ?
(A) 1901 (B) 1951
(C) 190 (D) 2000

13. How much was the contribution of agriculture in national income of 2011-12 ?
(A) 53.1% (B) 42.3% (C) 13.9% (D) 59.9%
14. In today's time which factor of production is the most mobile in international trade ?
(A) Capital (B) Labour
(C) Entrepreneurship (D) Land
15. Which countries can be included in the list of India's traditional trade partners ?
(A) England and Russia (B) Japan and China
(C) Countries of central Asia (D) Australia
16. How much was the contribution of industries in 2013-14 on national income of India ?
(A) 16.6% (B) 27% (C) 40% (D) 60%
17. What is public sector ?
(A) Sector run by people (B) Sector run by government
(C) Sector run on co-operation (D) International sector
18. By 2050, how much of the world population will be in cities?
(A) $\frac{1}{2}$ (B) $\frac{1}{4}$ (C) $\frac{2}{3}$ (D) $\frac{3}{4}$
19. What was the extent of literacy in India in 2011 ?
(A) 50% (B) 60% (C) 70% (D) 74.04%
20. What is the rate at which RBI borrows funds for very short term from the commercial banks is called?
(A) Repo rate (B) Bank rate
(C) Reverse repo rate (D) Open market rate

SECTION : B

◆ Write the answer of the following questions. [Each carries 1 Mark] [10]

21. What is meant by a pie diagram?
22. Why is per capita as an indicator more effective than national income as an indicator ?
23. Give the meaning of monetary policy.
24. Explain the concept of Relative Poverty.
25. Which depression is called the world's great depression ?
26. Give name of methods to collect land revenue under British rule.
27. Australia is known as which type of nation in the world ?
28. What is meant by development based migration?
29. Give the meaning of a central bank.
30. What is meant by international trade ?

SECTION : C

✦ Write the answer of any 12 Questions from given questions. [Each carries 2 Marks] [24]

31. Write a note on data CD.
32. What is meant by a graph and for what purpose it is drawn?
33. What are the various indicators of Economic development?
34. What is life expectancy at birth?
35. Discuss the function of money as a medium of exchange.
36. Discuss the function of money as a store of value.
37. How did the word 'bank' originate?
38. Give an idea of the accounts of a commercial bank.
39. Explain the income concept of poverty.
40. Explain meaning of full unemployment.
41. Explain frictional unemployment with examples.
42. "The problem of unemployment is because of low savings and investment in India." Explain in brief.
43. Give an understanding of balance of trade.
44. Explain the term 'size of international trade'.
45. Give examples of joint stock companies.
46. State the different ways in which urbanisation takes place.

SECTION : D

✦ Write the answer of any 7 questions from given questions. [Each carries 3 Marks] [21]

47. Explain population explosion.
48. Give the difference between diagrams and graphs.
49. What is Physical Quality of Life? What are the aspects included in it?

50. Explain per capita income as an indicator of economic development.
51. Explain employment oriented programmes for poverty eradication.
52. Explain the measures given by Raj Krishna to understand the nature of unemployment.
53. What is Green Revolution?
54. Elucidate the differences between balance of trade and balance of payments.
55. Write a note on exchange rate.
56. Explain any three matters (points) about importance of industry.

SECTION : E

✦ Write the answer of any 5 questions from given questions. [Each carries 5 Marks] [25]

57. Define inflation and explain the causes of inflation.
58. Discuss the nature and causes of poverty.
59. Discuss in detail the causes for high birth-rate.
60. State measures to improve productivity in agriculture.
61. Discuss the positive effects of migration.
62. Explain the effects of urbanisation.
63. Following details show a ratio of male-female in the net population. Analyse it using a clustered diagram

Year	Male Population (in crores)	Female Population (in crores)
1951	18.55	17.56
1991	43.92	40.71
2011	62.37	58.65

Source : Census of India 2011

"ALL THE BEST"



- ✓ **Step :- 1**
Scan the QR code. And download the MY PAPER Application.
- ✓ **Step :- 2**
Sign up in My Paper Application
- ✓ **Step :- 3**
Go to Board Paper
- ✓ **Step :- 4**
Set your Medium & Std.
- ✓ **Step :- 5**
Then Click on Your subject.
- ✓ **Step :- 6**
Click on Q. Paper to get your Question paper PDF & Click on A. Key to get your Answer Key.

☛ You can see answer key on MY PAPER application in January month.

For Answer Keys Follow the Bellow Given Instructions



Step :- 1

Scan the QR code. And download the MY PAPER Application.

Step :- 2

Sign up in My Paper Application

A screenshot of the 'My Paper' application login screen. It features a light blue header with a lightbulb icon. Below the header, there are input fields for 'Mobile Number' and 'Password', each with an eye icon for toggling visibility. A 'LOGIN' button is positioned below the password field. At the bottom, there are links for 'Don't have an account? Sign up' and 'Forgot Password?'.

Step :- 3

Go to Board Paper

Step :- 4

Set your Medium, Std. & Subject

A screenshot of the selection screen in the 'My Paper' application. It shows a list of options for 'ENG.MED.', '12th Commerce', and 'General Option'. Below this, there is a section for 'ELEMENTS OF ACCOUNTS(154)' with a calendar icon. A dropdown menu is open, showing 'Select Medium' with options for 'ENG.MED.' and 'GUJ.MED.'.

Step :- 5

Click on Q. Paper to get your Question paper PDF & Click on A. Key to get your Answer Key.

A screenshot of the selection screen in the 'My Paper' application. It shows a list of options for 'ENG.MED.', '12th Commerce', and 'ORG. OF COMM.(046)'. Below this, there is a section for '2023' with a calendar icon. A dropdown menu is open, showing 'Select Year' with options for '2023' and '2022'. Below the year selection, there are buttons for 'Q.Paper' and 'A.Key'.



Federation of Academic Association

PAPER - 1

- STD. 12TH EM
- SUB. OC
- MARK 100
- TIME 3 Hour.

SECTION : A

★ Choose correct answer from the given options. [Each carries 1 Mark] [20]

1. Art of getting work done from others is known as
(A) Planning (B) Directing
(C) Management (D) Co-ordinating
2. Who said that "You save your employees, your employees will save yours' everything"?
(A) C.K. Prahlad (B) Prof. Urvik
(C) F.W. Taylor (D) Peter F Drucker
3. What is the pre-condition for successful planning?
(A) Long term (B) Short term
(C) Organisation (D) Flexibility
4. The Network framed naturally by human relations is called?
(A) Informal Organisation (B) Linear Organisation
(C) Formal Organisation (D) Matrix Organisation
5. A person who is at bottom level and receives orders is called?
(A) Subordinate (B) Superior
(C) Project Manager (D) Officer
6. Which type of function of management is Staffing?
(A) Productive (B) Objective oriented
(C) Managerial (D) Administrative
7. is the second step after Recruitment.
(A) To give promotion (B) Selection
(C) Training (D) Transfer
8. In directing process, by giving achieved. objectives are
(A) Motivation (B) Supervision
(C) Training (D) Guidance
9. In which form is Informal Communication carried out?
(A) Oral (B) Written
(C) Written and Oral (D) Formal
10. Which function of management is known as the father of Controlling?
(A) Organization (B) Directing
(C) Planning (D) Staffing
11. With what is Financial Management related?
(A) Finance Function (B) Finance Market
(C) Capital Market (D) Stock Exchange
12. By which other name is the Objective of Wealth Maximisation known?
(A) Social Welfare (B) Capital Investment
(C) Net Present Value (D) Trading on Equity
13. Who issues treasury bills on behalf of Indian Government?
(A) State Bank of India (B) Reserve Bank of India
(C) Central Bank of India (D) Financial Institutions
14. In which year Depository Act came into existence?
(A) 1991 (B) 1992 (C) 1995 (D) 1996

15. What is Market Mix in Marketing Management?

- (A) Product, Production, Physical Distribution and Price
- (B) Product, Transportation, Market and Customer
- (C) Product, Competitors, Government and Others
- (D) Product, Price, Promotion and Physical Distribution

16. What can happen because of excessive advertisement expenses?

- (A) It raises price of the product.
- (B) The product becomes more attractive.
- (C) It improves quality of the product.
- (D) The product is available everywhere.

17. How many members exist in the District Level Forum?

- (A) Total 3 (B) Atleast 3 (C) Atleast 4 (D) Total 2

18. When was the Consumer Protection Act passed?

- (A) 1956 (B) 1932 (C) 1986 (D) 2015

19. In which year Standardized Weights and Measures Act came into existence?

- (A) 1951 (B) 1955 (C) 1976 (D) 1986

20. Which of the following option is the benefit of Privatization?

- (A) Misuse of power by the top bureaucrats
- (B) Unequal distribution of income and wealth
- (C) Production of quality goods and services
- (D) Exploitation of consumers

SECTION : B

★ Write the answer of the following questions. [Each carries 1 Mark] [10]

21. What is the other name of Middle Level of Management?
22. When is the Principle of 'Look and Leap' adopted?
23. What is Matrix Organisation?
24. Which organisation is called Army Organisation? Why?
25. State the names of various types of tests conducted for selection process.
26. What do you mean by profit-sharing?
27. In which form shareholders? dividend can be paid to the
28. Which is the first depository of India?
29. What is Branding?
30. In which courts can Public Interest Litigation be filed?

SECTION : C

★ Write the answer of any 13 Questions from given questions. [Each carries 2 Marks] [26]

31. What are the main elements of marketing management ?
32. What is the Rule of Thumb?

33. What is policy?
34. What is waiting list?
35. "Staffing is like the different limbs of the organisation." Explain the statement.
36. State the intellectual qualities of a good leader
37. How is control an internal process?
38. List the stages of controlling process.
39. What is production cycle?
40. State the objectives of SEBI.
41. State any four characteristics of a good salesperson.
42. Explain the selling concept of the market process.
43. Why are goods stored?
44. Write a note on principle of trusteeship and consumer protection.
45. Explain in brief about Public Interest Litigation.
46. Give the meaning of business environment and list out the factors affecting business environment.
47. Give the meaning of liberalization.

SECTION : D

- ✦ Write the answer of any 8 questions from given questions. [Each carries 3 Marks] [24]
48. State the importance of co-ordination.
 49. Define management and explain its characteristics.
 50. Explain- into which six activities Henry Fayol has divided the activities of industrial enterprises.
 51. Explain any four elements or components of planning.
 52. Explain steps for the process of organisation.

53. What is delegation of authority? Draw a diagram showing its elements.
54. "An efficient staff is an invaluable asset." Explain the statement.
55. Explain the corrective measures in the control process phase.
56. Explain the difference between gross working capital and net working capital.
57. Write a short note on National Securities Depository Limited (NSDL).
58. State three points of difference between marketing and sales.
59. What steps are taken by the Indian government as a part of liberalization ?

SECTION : E

- ✦ Write the answer of any 4 questions from given questions. [Each carries 5 Marks] [20]
60. Write names of various Levels of Management with their figures and functions.
 61. Explain the types of planning.
 62. State the internal and external sources of recruitment. Discuss about external sources
 63. Define Motivation and explain its features.
 64. Define Communication. Explain its characteristics.
 65. Explain the 3 tier dispute settlement system according to the consumer protection act.

ALL THE BEST



Federation of Academic Association

PAPER - 2

- STD. 12TH EM
- SUB. OC
- MARK 100
- TIME 3 Hour.

SECTION : A

♦ Choose correct answer from the given options. [Each carries 1 Mark] [20]

1. Which decisions are taken by top level of management?
(A) Short term (B) Medium term
(C) Policy related (D) Buying-selling
2. Who was the promoter of Neo Classical thought?
(A) Frederick Taylor (B) Hanry Fayol
(C) Herzberg (D) Elton Mayo
3. Which plan is to be prepared for achievement of specific objectives?
(A) Strategic plan (B) Standing plan
(C) Operational plan (D) Single-use plan
4. Future managers can be prepared by adopting which of the following?
(A) Division of labour (B) Decentralization
(C) Centralization (D) Demonetization
5. In which of the following organisation, function is given more importance than department?
(A) Linear (B) Functional (C) Informal (D) Matrix
6. What is the main function of Human Resource Management?
(A) Increase the sales (B) Quality Control
(C) Staffing (D) Production
7. What are employees for the business unit?
(A) Capital (B) Liability
(C) Power (D) Invaluable assets.
8. Which of these is related to financial incentives?
(A) Promotion
(B) Appreciation
(C) Job security
(D) Appreciation of work and reward
9. In which form is informal communication carried out?
(A) Oral (B) Written (C) Written and oral (D) Formal
10. Which is not the function of controlling ?
(A) Progress of activities
(B) Comparison with set standards
(C) Determining objectives
(D) Getting information about deviations
11. Excess of current assets over current liabilities means....
(A) Gross working capital
(B) Equilibrium working capital.
(C) Negative working capital.
(D) Positive working capital.
12. Decisions of investment means.....
(A) Capital cost (B) Capital budgeting
(C) Capital structure (D) Re-investment of profit

13. Market for sale of new issued securities mean.....
(A) Stock Exchange (B) Primary market
(C) Secondary Market (D) Speculation market

14. Which statement is false with reference to commercial bills?
(A) Government Security
(B) Origin out of Business Translation
(C) Discounted by Commercial Banks
(D) Negotiable Instrument

15. Who is at centre to the market concept?
(A) Customer (B) Product (C) Production (D) Profit

16. What is market mix in marketing management?
(A) Product, Production, Distribution and Price
(B) Product, Transport, Market and Price
(C) Product, Competitors, Government and Others
(D) Product, Price, Growth and Distribution

17. In which type of commission does the central government appoint the members?
(A) District Level (B) State level
(C) National Level (D) International level

18. Who has introduced the principles of Trusteeship?
(A) Jawaharlal Nehru (B) Subhash Chandra Bose
(C) Indira Gandhi (D) Gandhiji

19. With which consumer protection organizational set up, Ahmedabad is connected?
(A) Consumer Education and Research Centre
(B) Consumer Guidance Society of India
(C) Consumer Unity and Trust Society
(D) Consumer Co-ordination Council

20. At present, which act is prevalent for foreign exchange in India?
(A) FERA (B) FECA (C) FESA (D) FEMA

SECTION : B

♦ Write the answer of the following questions. [Each carries 1 Mark] [10]

21. Which fields are developed through management?
22. In which field is Planning is found?
23. What is called delegation of authority?
24. What is centralization?
25. Give the full form of : I.I.M.
26. What effect does distrust and fear have on communication?
27. By which name, screen based trading of Bombay Stock Exchange is known ?
28. Which is the first depository of India?
29. What is zero level distribution system?

30. If the complainant is not satisfied by the judgement of District Level Forum, then to whom should he appeal for reconsideration and within what period ?

SECTION : C

✦ Write the answer of any 13 Questions from given questions. [Each carries 2 Marks] [26]

31. Who are included in the Top Level Management ?
32. What is Scientific Management?
33. Planning is expensive process. Why?
34. "Training is expensive but absence is more expensive" - Explain the statement.
35. What is development?
36. What is the need for self-realization? Write any one example of it.
37. "Planning and controlling are two sides of the same coin." - Explain.
38. What are the external factors that threaten the existence of the business?
39. State four factors affecting fixed capital.
40. Stock exchange is a mirror indicating economic condition of the country - How ?
41. State the mediums (types) of distribution.
42. Define market research.
43. Explain product concept.
44. Discuss about the three tier system for dispute resolution.
45. How are customers physically and mentally exploited?
46. Give full form of WTO and GATT.
47. When can per capita income increase?

SECTION : D

✦ Write the answer of any 8 questions from given questions. [Each carries 3 Marks] [24]

48. State the importance of human resource management.
49. State any six functions of financial management.
50. Discuss about Peter F. Drucker's contribution in management field.
51. Explain the characteristics of Organisation.
52. Write a note on matrix organisation.
53. Explain operational and contingency plan?
54. Write a note on staffing as a part of Human Resource Management.
55. Explain any of the six important points of controlling.
56. Explain the characteristics of ideal capital structure.
57. State the characteristics of money market.
58. Discuss three factors affecting price.
59. Explain the importance of Business environment.

SECTION : E

✦ Write the answer of any 4 questions from given questions. [Each carries 5 Marks] [20]

60. Write any five points of difference between different levels of management.
61. Explain the planning process?
62. Explain the characteristics of staffing.
63. Explain financial and non-financial incentives.
64. Explain barriers to effective communication..
65. Explain the rights of consumer protection by giving meaning.

ALL THE BEST



Federation of Academic Association

PAPER - 3

- STD. 12TH EM
- SUB. OC
- MARK 100
- TIME 3 Hour.

SECTION : A

♦Choose correct answer from the given options. [20]

1. What does management association frame for its own profession?
(A) Inconsistency (B) Improper
(C) Code of conduct (D) Decisions
2. Why need arises to make changes in principles of management?
(A) Change in assets (B) Change in capital
(C) Change in technology (D) Change in managers
3. Planning function means
(A) Routine function (B) Fixed function
(C) Function of choice (D) Difficult function
4. When more than one person is working towards the achievement of common goal, the structure so formed is called.....
(A) Planning (B) Organisation
(C) Control (D) Directing
5. What is possible from the following due to departmentalization of work?
(A) Specialisation (B) Planning
(C) Co-ordination (D) Directing
6. Employees are..... for business.
(A) Equal to capital (B) Responsibility
(C) Strength (D) Invaluable assets
7. Which test decides the ability of the candidate?
(A) IQ test (B) Aptitude test
(C) Psychological test (D) Trade test
8. What does direction include other than order, instruction and guidance?
(A) Suggestion (B) Control
(C) Supervision (D) Training
9. Which of the among is needed for the existence of leadership?
(A) Supervisors (B) Planners
(C) Subordinates (D) Managers
10. Which function of the management process sees that the work is performed according to planning?
(A) Organization (B) Training
(C) Directing (D) Controlling
11. By which other name is the objective of wealth maximisation known?
(A) Social Welfare (B) Capital investment
(C) Net present value (D) Trading on equity
12. Capital structure having proper ratio of equity and debts means
(A) Optimum capital structure
(B) Simple capital structure
(C) Working capital structure

- (D) Equilibrium capital structure
13. Who regulates organised money market?
(A) SEBI (B) State Bank of India
(C) Reserve Bank of India (D) Financial Institutions
14. Whose approval is to be obtained by stock exchange under securities contracts(Regulation) Act, 1956?
(A) Central Government (B) SEBI
(C) Reserve Bank of India (D) Finance Minister
15. What is the main objective of branding?
(A) Making the product more durable.
(B) Manufacturing the product according to law.
(C) Advertising the product.
(D) Differentiating company's product from the competitors.
16. Because of promotion techniques.....
(A) The customer get inspired to buy the product quickly.
(B) The customer doesn't try to understand the product.
(C) The middlemen stops selling the products to the customer.
(D) The retailers stop purchasing goods from the middlemen.
17. When was the Consumer Protection Act passed?
(A) 1956 (B) 1932 (C) 1986 (D) 2015
18. Out of the following, which has not been included in the Consumer Protection Act 1986, as consumers' right?
(A) Protection (B) Basic Needs
(C) Awareness (D) Choice
19. How many members exist in the District Level Forum?
(A) Total 3 (B) At least 3
(C) At least 5 (D) Total 5
20. In which year did Trade Mark Act came into existence?
(A) 1951 (B) 1955 (C) 1999 (D) 1986

SECTION : B

♦Write the answer of the following questions. [10]

21. Which level of management has the supreme authority to manage the business?
22. When is the principle of 'Look and Leap' adopted?
23. What is Matrix Organisation ?
24. What is accountability?
25. Which is the base of the selection process?
26. What do you mean by profit-sharing?
27. Which financial instruments are traded in money market ?

28. When did Depository Act come into force ?
 29. Give the meaning of market research.
 30. Give full form: VOICE

SECTION : C

✦ Write the answer of any 1 Questions from given questions. [Each carries 2 Marks] [26]

31. How does management benefit the society?
 32. What is unity of command?
 33. What do you mean by determination of objectives?
 34. State the difference between recruitment and selection.
 35. Staffing is not merely an employee welfare activity, Why?
 36. What is co-partnership ?
 37. Give the meaning of controlling.
 38. 'Controlling is a dynamic process' - Explain
 39. "Working capital means circulating capital in business." - Explain.
 40. What is Unorganised money market ?
 41. What is marketing mix? What does it include?
 42. State any two characteristics of branding.
 43. List out the functions of labelling.
 44. What are the ways in which manufactures can exploit the consumers to increase their sales of goods and services?
 45. Explain about consumer exploitation.
 46. Why is continuous study of business environment required ?
 47. Which political factors are affecting business environment ?

SECTION : D

✦ Write the answer of any 8 questions from given questions. [Each carries 3 Marks] [24]

48. Discuss the importance of management.
 49. Explain: Management as a profession.
 50. Write a short note on modern thoughts.
 51. Explain any four limitations of planning.
 52. Describe characteristics of Informal Organisation.
 53. Explain Functional Organisation with its formation.
 54. State the difference between Training and Development.
 55. Explain the objectives of financial management.
 56. 'Controlling is not a negative function.' - Justify the statement.
 57. What is Treasury Bill?
 58. Explain the role of public relation.
 59. Give the meaning of economic factors affecting business environment and explain them in detail.

SECTION : E

✦ Write the answer of any 4 questions from given questions. [Each carries 5 Marks] [20]

60. Define production management and explain its functions.
 61. What is planning? Explain its characteristics.
 62. Explain the selection procedure.
 63. Define Direction and explain its characteristics.
 64. Explain the Maslow's hierarchy of needs with diagram
 65. What types of relief and compensation are available to the consumer according to consumer protection?

ALL THE BEST



- ✓ **Step :- 1**
Scan the QR code. And download the MY PAPER Application.
- ✓ **Step :- 2**
Sign up in My Paper Application
- ✓ **Step :- 3**
Go to Board Paper
- ✓ **Step :- 4**
Set your Medium & Std.
- ✓ **Step :- 5**
Then Click on Your subject.
- ✓ **Step :- 6**
Click on Q. Paper to get your Question paper PDF & Click on A. Key to get your Answer Key.

☛ You can see answer key on MY PAPER application in January month.

For Answer Keys Follow the Bellow Given Instructions



Step :- 1

Scan the QR code. And download the MY PAPER Application.

Step :- 2

Sign up in My Paper Application

A screenshot of the 'My Paper' application login screen. It features a light blue header with a lightbulb icon. Below the header, there are input fields for 'Mobile Number' and 'Password', each with an eye icon for toggling visibility. A 'LOGIN' button is positioned below the password field. At the bottom, there are links for 'Don't have an account? Sign up' and 'Forgot Password?'.

Step :- 3

Go to Board Paper

Step :- 4

Set your Medium, Std. & Subject

A screenshot of the selection screen in the 'My Paper' application. It shows a list of options for 'General Option' including 'GHSEB', 'ENG.MED.', '12th Commerce', and 'ELEMENTS OF ACCOUNTS(154)'. A dropdown menu is open, showing 'Select Medium' with options 'ENG.MED.' and 'GUJ.MED.'. Below this, there are options for '5.P.C.C.(337)'.A screenshot of the selection screen in the 'My Paper' application. It shows a list of options for '12th Commerce' and 'ORG. OF COMM.(046)'. Below this, there are options for '2023' and '2022'. For each year, there are buttons for 'Q.Paper' and 'A.Key'.

Step :- 5

Click on Q. Paper to get your Question paper PDF & Click on A. Key to get your Answer Key.



Federation of Academic Association

PAPER - 1

- STD. 12TH EM
- SUB. SPCC
- MARK 100
- TIME 3 Hour.

Section - A

◆ Choose The Right Answer From The Given

Options. [20]

1. To whom is the bank responsible?
A. Country B. RBI
C. President D. Prime Minister.
2. To whom is written in the municipality's letter regarding the irregularities of cleaning of the [public roads]?
A. Municipal commissioner B. Mayor
C. President D. Member
3. Demotion is kind of step.
A. Pleasant B. Unpleasant
C. Good D. None.
4. When a person buys an insurance policy, what is the outcome between the insurer and insured called?
A. Insurance service B. Monetary security
C. Registration D. Contract.
5. The bank offers for e -banking ?
A. PIN B. Code
C. CIN D. None.
6. Teaching, training etc is an examples of the purpose of which type of presentation?
A. Instructor B. Informative
C. Awareness D. Decisive.
7. How many days from the date of receipt of the installment, does the share holder pay the amount to the bank ?
A. 7 B. 14 C. 21 D. 30.
8. Within how many days, share forfeited if the members do not pay the installment amount despite of sending the warning letter?
A. 10 B. 12 C. 14 D. 20.
9. is prepared after receiving share application?
A. of allotment B. Application
C. Certificate D. None of these.
10. Due to share transfer gets income.
A. Person B. Company
C. Government D. None of these.
11. In the share transfer, if there is an application of objection
A. No problem arises.
B. Transfer is done subsequently.
C. Objection is ignored.
D. Company will not approve transfer.
12. The dividend rate on debenture is.....?
A. Fixed B. Indefinite
C. Stable D. Neutral.

13. What is paid in the form of a fixed return to debenture holder?

- A. Dividend B. Bonus
C. Profit D. Interest.

14. Which clause of Memorandum of Association is to be signed to be considered as Member?

- A. Capital Clause B. Objective Clause
C. Subscription Clause D. Liability Clause.

15. Whose duty is to set up for Audit Committee?

- A. BOD B. SHRC
C. SEBI D. Share holder.

16. Where are the provisions related to appointment of the Director?

- A. Prospectus B. Articles
C. Memorandum D. None of these.

17. The person who is selected by the members to conduct the meeting is known as?

- A. Chairman B. KMP
C. Secretary D. Director

18. The issue that are put forward for discussion in the meeting of a company are known as.....

- A. Resolution B. Proposal
C. Notice D. Agenda.

19. To whom does the official liquidator express his opinion?

- A. To administrator B. To tribunal
C. To member D. To creditor.

20. If the company continues its business for how many months despite the decline in membership, are the knowledgeable members personally liable for all future debts?

- A. 3 months B. 6 months
C. 9 months D. 4 months

Section : B

◆ Answer The Questions In One Sentence. [10]

21. What is the principle of insurance service in general?
22. What do you mean by Email?
23. What is the ideal dimension for Power Point Presentation?
24. What do you mean by Share Lien?
25. Give the full form of CDSL.
26. What do you mean by Trust deed?
27. What do you mean by member as per company act - 2013 ?
28. When can an alternate director be appointed?
29. What do you mean by Mover?
30. How is a company created and dissolved?

Section : C**◆ Answer The Questions In Short. (2 Marks each)****(ANY 7)****[14]**

31. State that which complaint letters are written to the bank.
32. From where is financial aid received by Corporations or Departments providing public utility services?
33. State the reasons for Promotion.
34. State that which details are included in list of call on share.
35. State the circumstances of share surrender.
36. Explain in short about Mortgage debenture.
37. State the provisions complied with regarding company as become member.
38. State the disqualifications of Managing Director.
39. State the details included in the notice of meeting?
40. Explain advertisement of resolution in the process of voluntary winding up.

Section : D**◆ Answer The Following Questions In Brief. [3 Marks****Each] (ANY 5)****[15]**

41. State the duties of secretary regarding Share Call.
42. State the provision regarding transfer of share in case of single person company.
43. Write difference between the Share and Debenture.
44. "Person may be a Member but not a Share Holder." - Explain the Statement.
45. State the provision regarding vacation of office of director.
46. State the details included in the Minutes Book?
47. State the circumstances for which court will not order for the dissolution of company.

Section : E**◆ Answer The Following Questions In Detail.****[4 Marks Each] (ANY 4)****[16]**

48. Write an Email on behalf of Gujarat State Board of school Textbook, Gandhinagar informing the authors of the concern subject regarding the meeting to prepare new text books.
49. Explain the procedure of share allotment.
50. Explain the procedure of Transmission of share.
51. Explain in detail about Methods of becoming Member.
52. State the responsibilities of Managing Director.
53. State the objectives of special resolution.

Section : F**◆ Answer Any 5 of the following questions from 54 to 60 as directed. (Each question carries 5 marks) [25]**

54. Write letter of complaint regarding rude behavior of the bank employee.
55. Draft a complaint letter regarding irregularities of water supply.
56. Write a letter regarding difficulties being faced due to encroachment of carts and hawkers on public roads of the city.
57. Write a circular letter recommending to begin campaign to save water/electricity a national wealth.
58. Write a letter informing to remain present in written test.
59. Write a letter of claim against Fire Insurance Policy.
60. Write a committee report on celebration of teacher's day in your school.

All The Best



Federation of Academic Association

PAPER - 2

- STD. 12TH EM
- SUB. SPCC
- MARK 100
- TIME 3 Hour.

SECTION :- A

★ Answer the following questions by selecting the correct option from the gives options: [Questions 1 to 20-1 mark each] [20]

1. How is the amount written in bank correspondence?
(a) In figure (b) In words
(c) In figure and words (d) In Roman letters
2. With which organisation is correspondence carried out to get adequate water supply in big cities?
(a) With State Government
(b) With Municipal Corporation
(c) With Municipality (d) With Gram Panchayat
3. In internal correspondence, which letter is written in either a formal or informal method?
(a) Letter of Demotion (b) Circular
(c) Memo (d) Letter of Promotion
4. What is the risk in General Insurance?
(a) Certain (b) Uncertain (c) Negligible (d) Extreme
5. Which type of communication process is video conferencing?
(a) One way (b) Two way
(c) Three way (d) Multiple way
6. What among the following is not required for bringing desired results?
(a) Money (b) Time
(c) Articulation and pronunciation (d) Apparatus
7. What date equity dividend depend on?
(a) On sale of the company
(b) On profit of the company
(c) On turnover of the company
(d) On incomes of the company
8. A letter of renunciation is divided into how many parts?
(a) Two (b) Three (c) Four (d) Five
9. The procedure for share application is divided into how many parts?
(a) Three (b) Four (c) Five (d) Six
10. What is the important characteristic of a company from the following?
(a) Free dividend policy
(b) Free transferability of shares
(c) Limited liability of members
(d) Easy establishment
11. In transmission of shares...
(a) stamp duty is to be paid.
(b) stamp duty is not necessary.
(c) stamp duty will be exempted by Government.
(d) stamp duty is to be affixed afterwards.

12. Who appoint the debenture trustee?

- (a) The company itself
- (b) The Assembly of Directors
- (c) General Assembly
- (d) The Assembly of Debenture holders

13. At what rate is interest paid on debentures?

- (a) 6% (b) 9% (c) 12% (d) At a fixed rate

14. Shares the are given as consideration to the service provider to the company...

- (a) do not acquiring membership.
- (b) are offered post of the manager.
- (c) acquire membership.
- (d) acquire partial membership.

15. In how many days should the company registrar be informed after the appointment of Managing Director?

- (a) Within 30 days (b) Within 60 days
(c) Within 90 days (d) Within 120 days

16. How many identification numbers can be acquired by a director?

- (a) 4 (b) 3 (c) 2 (d) 1

17. Before how many days the notice is to be given, prior to the meeting?

- (a) 20 days (b) 31 days (c) 25 days (d) 21 days

18. The notebook containing the decisions and the proceeding in the meeting, written pointwise is known as.....

- (a) quorum (b) notification
(c) notice (d) minutes book

19. If statutory meeting is not called on a specified date, then after.....days, shareholders and other contributors may apply for winding up.

- (a) 7 (b) 10 (c) 15 (d) 14

20. Who is authorized to apply for winding up of a company with a special resolution?

- (a) Creditors (b) Contributors
(c) Directors (d) Members

SECTION :- B

★ Answer the following questions in one sentence each: [Questions 21 to 30-1 mark each] [10]

21. What are the basic characteristics of insurance services?
22. What is the full form of RTGS and ECS?
23. In what form can an oral presentation be made?
24. What are right shares? To whom does the company give such type of shares?
25. Where can a demat account be opened? Why is this account opened?

26. According to Sir Francis Parmer, what is Debenture?
27. Where are the names of approved shares entered?
28. Who manages the company in modern time?
29. Who is known as proxy? What does he do?
30. When does a company decide to close business?

SECTION :- C

◆ **Answer the following questions in short :Any seven from questions 31 to 40-2 marks each] [14]**

31. What kind of financial institution is a bank? What is the main objective of bank?
32. For which issues do business firms normally need to communicate in government department?
33. What is demotion? Which changes occur in the salary and authority of the employee due to demotion?
34. Mention about Interim dividend.
35. State the effects of share forfeiture. (Any four)
36. Mention any two rights of the debenture trustee.
37. Can a partnership firm and registered trust become a member? Why?
38. Who is an independent director? How is it selected?
39. Which details are included in notice of the meeting?
40. Write down the names of modes of liquidation.

SECTION :- D

◆ **Answer the following questions in brief: [Any five from questions 41 to 47-3 marks each] [15]**

41. What is call on shares? State the stages in the process of making calls on shares.
42. Write the procedures of Transmission of Shares.
43. Explain the difference between Shares and Debentures. (Any three points)
44. "A person may be a member in the company but may not be a shareholder." Explain.
45. How can the Managing Director be remunerated? Write its provisions.
46. Discuss the types of Directors Meeting
47. Differentiate between voluntary liquidation by members and voluntary liquidation by creditors. (Any three points)

SECTION :- E

◆ **Answer the following questions to the point: [Any four from questions 48 to 53-4 marks each] [16]**

48. Write about E-banking and also give information about ECS and RTGS.
49. Explain the procedure of share allotment.
50. State the circumstances for share transmission.
51. Define membership and give its meaning Which elements are essential to be a member?
52. Mention the civil as well as criminal liabilities of directors.
53. State the meaning of chairman and write qualifications of chairman.

SECTION :- F

◆ **Answer the following questions as required:[Any five from questions 54 to 60-5 marks each] [25]**

54. Pratik/Pratiksha has lost the ATM card. Draft a letter on his/her behalf to the bank informing the loss of ATM card and asking the procedure to obtain a new card.
55. Write a letter to the BSNL office. Ahmedabad on behalf of Manek Jewellers. Ahmedabad requesting to send details of telephone bills, especially outstation calls (STD calls).
56. Draft a letter to Dwaraka based Yuva Vikas, a service oriented organisation requesting for arrangement of a career guidance programme in your school.
57. In consideration of the special achievement of an employee Jainam Mehta, he has been promoted. Draft a letter informing him of the promotion.
58. Draft a letter in the form of notice regarding the violation of discipline by an employee by not wearing an identity card around his neck during office hours.
59. N. G. Shah has taken fire insurance from New India Insurance Company for his home. A fire broke out due to short circuit in the home. Write his letter to insurance company claiming for the loss as a result of fire accident.
60. What points should be considered for preparing a slide show as a part of Power Point Presentation?

"ALL THE BEST"



Federation of Academic Association

PAPER - 3

- STD. 12TH EM
- SUB. SPCC
- MARK 100
- TIME 3 Hour.

Section - A

◆ Choose The Right Answer From The Given Options.

[20]

1. Letter written to obtain locker facility is called?
A. Request letter B. Complaint letter
C. Order letter D. Appreciation.
2. With which organization is correspondence is carried out to get the adequate water supply in big cities?
A. Municipality B. Municipal corporation
C. Grampanchayt D. all of these.
3. Which letter does an employee write to senior officer regarding his rights or the solution of his problem?
A. Circular B. Memo
C. Notice D. Instruction.
4. Which type of an insurance policy allows claim of insured amount to the nominee/assignee?
A. Whole-life B. Term insurance
C. General D. Third party.
5. What is the full form of RTGS?
A. Real Time Grade Settlement
B. Real Time Gross Settlement.
C. Reserve Time Gross Settlement
D. Reserve Trade Gross Settlement.
6. What among the following is not required for bringing desired result?
A. Money
B. Time
C. Articulation & Pronunciation
D. Apparatus
7. Which acts are required to be followed by a company, for issue of shares and other securities in India?
A. securities contract regulations act-1956
B. Company act -2013
C. SEBI ACT-1992
D. All of these.
8. Which allotment of share is void from the very beginning?
A. Irregular B. Illegal
C. Before public issue D. Pvt. Placement.
9. What is returning of share certificate to the company by share holder called?
A. Buy back of shares B. Share surrender
C. Split of share D. All of these.
10. In transmission of shares.....
A. Stamp duty is to be affixed.
B. Stamp duty is not necessary.
C. Stamp duty is to be affixed after words.
D. Stamp duty will paid by company.

11. In the demat account of shareholder

- A. company may make changes.
- B. company may make change partial.
- C. Company can not make change.
- D. company may make change after.

12. Who appoint the trustee of debenture?

- A. company B. Director
C. General Assembly D. Debenture holder.

13. Who represent the mass of debenture holders?

- A. Directors B. Chairman
C. Debenture holder D. Debenture Trustees.

14. Which document is issued by the company to collect capital?

- A. Memorandum B. Articles
C. Prospectus D. Share Certificate.

15. How many identification number can be acquired by a director?

- A. 4 B. 3 C. 2 D. 1

16. How many independent directors can company have?

- A. 1/4 B. 2/3 C. 3/4 D. 1/3

17. How many meetings of Board of Directors should be called by the company in a year?

- A. 5 B. 4 C. 3 D. 2

18. The notification by which information of the meeting is communicated to the members is known as.....

- A. Agenda B. Notice C. Minutes D. Quorum.

19. Who authorized to apply for winding up of company with special resolution?

- A. Creditors B. Contributor
C. Directors D. Members.

20. Within how many years does a company have to start business after getting incorporated?

- A. 1 B. 2 C. 3 D. 4

Section : B

◆ Answer The Questions In One Sentence. [10]

21. What do you mean by Premium?

22. Give the full form of Email.

23. How many types of presentation from the point of view of objectives?

24. What do you mean by Prospectus?

25. When is the receipt for instrument dispatched?

26. Who is known as debenture trustees?

27. What do you mean by sweat equity share?

28. What do you mean by Board of Director?

29. What do you mean by Secunder?

30. Why is an investigation committee appointed?

Section : C

♦ **Answer The Questions In Short. (2 Marks each)**
(ANY 7) [14]

31. Due to which modern facility have bank become speedier and customer oriented?
32. By which name local organizations are known?
33. State the circumstances for demotion.
34. State the two parts of Letter of Renunciation.
35. Explain in short about share lien.
36. Explain in short about FCD.
37. Define membership and give its meaning.
38. How is an independent director selected?
39. When can a restriction be imposed on voting?
40. Explain statutory meeting and report of company.

Section : D

♦ **Answer The Following Questions In Brief.**
[3 Marks Each] (ANY 5) [15]

41. Write difference between irregular and illegal share allotment.
42. State the importance of share transfer.
43. Explain the procedure of transfer of debenture.
44. Explain the difference between Member and Share Holder.
45. Explain the liability of directors towards the third party.
46. Which matters are taken into consideration in Annual General Meeting ?

47. State the just and equitable reasons for compulsory winding up of company.

Section : E

♦ **Answer The Following Questions In Detail.**
[4 Marks Each] (ANY 4) [16]

48. State the duties of the secretary regarding share allotment.
49. Write an email regarding purchase of cycles.
50. Write difference between Transfer of share and Transmission of share.
51. Explain in detail about Termination of Membership.
52. State the duties of directors.
53. State the duties of secretary about notice of meeting.

Section : F

♦ **Answer Any 5 of the following questions from 54 to 60 as directed. (Each question carries 5 marks) [25]**

54. Write letter to get the educational loan.
55. Draft a request letter to the telephone company to obtain a parallel connection on the same telephone.
56. Write a complaint letter regarding irregularities in cleaning public roads.
57. Write a letter regarding appointment of an employee.
58. Write a letter informing about Promotion.
59. Write a letter of inquiry about revival of lapsed Life Insurance Policy (LIP).
60. Write an individual report regarding visit of bank.

ALL THE BEST

FAAA

ESTD. 2016

GUJARAT



- ✓ **Step :- 1**
Scan the QR code. And download the MY PAPER Application.
- ✓ **Step :- 2**
Sign up in My Paper Application
- ✓ **Step :- 3**
Go to Board Paper
- ✓ **Step :- 4**
Set your Medium & Std.
- ✓ **Step :- 5**
Then Click on Your subject.
- ✓ **Step :- 6**
Click on Q. Paper to get your Question paper PDF & Click on A. Key to get your Answer Key.

☛ You can see answer key on MY PAPER application in January month.

For Answer Keys Follow the Bellow Given Instructions



Step :- 1

Scan the QR code. And download the MY PAPER Application.

Step :- 2

Sign up in My Paper Application


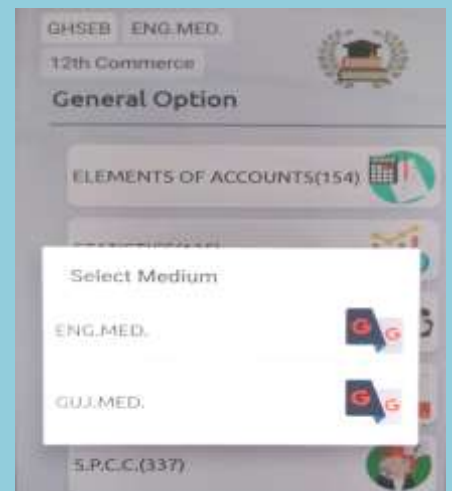
A screenshot of the 'My Paper' application login screen. It features a light blue header with a lightbulb icon. Below the header, there are input fields for 'Mobile Number' and 'Password', each with an eye icon for toggling visibility. A 'LOGIN' button is positioned below the password field. At the bottom, there are links for 'Don't have an account? Sign up' and 'Forgot Password?'.

Step :- 3

Go to Board Paper

Step :- 4

Set your Medium, Std. & Subject



Step :- 5

Click on Q. Paper to get your Question paper PDF & Click on A. Key to get your Answer Key.



Federation of Academic Association

PAPER - 1

- STD. 12TH EM
- SUB. ENGLISH
- MARK 100
- TIME 3 Hour.

Section : A

◆ Read The Following Passage And Select The
Appropriate Answers. [Unit based] [5]

1. He summoned all his strength, got up, and staggered in the direction of the sound. The Rams jo Ironworks, which are now closed down, were, not so long ago, a large plant, with smelter, rolling mill, and forge. In the summertime long lines of heavily loaded barges and scows slid down the canal, which led to a large inland lake. and in the wintertime the roads near the mill were black from all the coal dust which sifted down from the big charcoal crates. During one of the long dark evenings just before Christmas, the master smith and his helper sat in the dark forge near the furnace waiting for the pig iron, which had been put in the fire, to be ready to put on the anvil. Every now and then one of them got up to stir the glowing mass with a long iron bar, returning in a few moments, dripping with perspiration, though, as was the custom, he wore nothing but a long shirt and a pair of wooden shoes All the time there were many sounds to be heard in the forge. The big bellows groaned and the burning coal cracked. The fire boy shovelled charcoal into the maw of the furnace with a great deal of clatter. Outside roared the waterfall, and a sharp north wind whipped the rain against the brick-tiled roof. It was probably on account of all this noise that the blacksmith did not notice that a man had opened the gate and entered the forge, until he stood close up to the furnace.

- (1) Where did the peddler reach after dreary hours from the forest?
- (A) on the bank of the large inland lake
 - (B) dripping with perspiration near big bellows
 - (C) at the back of the large iron plant with smelter
 - (D) after opening gate of the iron mill he entered the forge
- (2) Why were the roads black in the winter time?
- (A) due to large iron rust coming out as waste from the iron mill
 - (B) due to the coal dust which sifted down from the big charcoal crates
 - (C) due to making of a new road from coal tar into the jungle
 - (D) none of the given
- (3) What type of different sounds were heard in the iron mill? Bring odd man out?
- (A) sound of heavily loaded barges and scows
 - (B) groaning of bellows and cracking of coals
 - (C) great deal of clatter due to shoveling charcoal into the maw by the fire boy
 - (D) roaring of water fall and rattling of rain against the brick tilted roof

(4) What did the master smith and his boy wear as the matter of custom?

- (A) long rain coat and long shoes
- (B) large T shirts and shorts
- (C) a long shirt and a pair of woolen shoes
- (D) a short shirt and loose pants

(5) Was the master smith aware of the entry of the peddler?

- (A) yes (B) no
- (C) not given (D) may be but neglecting

◆ Fill In The Blanks With Appropriate Option In The Brackets And Write The Answers Only. [4]

1. [challenged, regulate, polite, dreaded, concrete, powerless, cooperation, officials, unquestioned, might]

The (6)..... felt (7) Without Gandhi's (8)..... He helped them (9) the crowd. He was (10) and friendly. He was giving them (11)..... proof that their.....(12), hitherto (13) and.....(14), could be (15)..... by Indians.

◆ Answer The Following Questions In Six-Seven Sentences Each.[Unit Based] (ANY 3) [9]

16. How did the instructor 'build a swimmer' out of Douglas?
17. What explanations does the author offer for the children not wearing footwear ?
18. Why didn't Sophie want Jansle to know about her story with Danny?
19. Who was the English visitor to the studios? OR How did the author discover who the English visitor to the studios was?
20. What activities did M. Hamel make the class do on the last day?

Section : B

◆ Read The Following Verse And Answer The Questions.[Poem Based] [4]

And felt that old familiar ache, my childhood's fear,
but all I said was, see you soon, Amma,
all I did was smile and smile and smite.....

Questions.

- 21. What is meant by 'old familiar ache' ?
- 22. What is the poetic device used in the 1st line ?
- 23. What was the childhood fear of the poetess ?
- 24. Why does the poetess repeat the word 'smile' ?

◆ Choose The Correct Figure Of Speech From The Given Options. [4]

25. An endless fountain of immortal drink, pouring unto us from the heaven's brink.
- A. Tautology and Litotes
 - B. Metonymy and Tautology

- C. Litotes and Transferred Epithet
D. Metonymy and Simile

26. Or beauty rest in a beautiful mountain scene
A. Irony B. Tautology C. Climax D. Personification
27. I saw my mother beside me doze, open mouthed
A. Litotes B. Metaphor C. Simile D. Synecdoche
28. Belled, flowery, Tyrolese valley.
A. Personification B. Tautology
C. Litotes D. Internal Rhyme

◆ **Answer The Following Questions In About Four To Five Sentences Each. [Poem Based] (ANY 4) [8]**

29. Why does the poet Stephen Spender say that pictures and maps in the slum school are not meaningful ?
30. What is the 'sadness that the poet Pablo Neruda refers to in the poem ?
31. List the things of beauty mentioned in the poem 'A Thing of Beauty'.
32. What symbol from nature does the poet invoke to say that there can be life apparent stillness ?
33. Why are the young trees described as 'sprinting' ?
34. Which lines tell us about the insufferable pain that the poet feels at the thought of the plight of the rural poor?

◆ **Read the passage and answer the question. [5]**

- 1) "Are magic spells real?" This was a new phase, just this sentinth, a reality phase. When he told her spiders eat bugs, she turned to her mother and asked, "Do they really?" and when Clare told her God was in the sky and all around them, she turned to her father and insisted, with a sly yet eager smile, "Is He really?"
35. Who is asking the questions?
36. How was Clare related to the narrator?
37. Who has penned the story?
2) I walked over to a newsboy and glanced at the stack of papers at his feet. It was 'The World'; and 'The World' hasn't been published for years. The lead story said something about President Cleveland. I've found that front page since, in the Public Library files, and it was printed June 11, 1894.
38. Where was the newsboy?
39. Where did the narrator cross check the contents of the newspaper?

Section : C

◆ **Rectify The Errors. [4]**

- | 1. | Incorrect | correct |
|---|-----------|---------|
| 40. He know that his education was his. | | |
| 41. Father's chief concern. For these reason..... | | |
| 42. He had been sent on twenty-two to | | |
| 43. America to learn surgery or medicine | | |

◆ **Punctuate The Following Passage. [2]**

44 TO 47

Such a charitable and improvident man _____ and yet he had enemies _____ was it because he seemed so close and intimate with the Boss _____ or was it his general demeanour that resembled a sycophant's _____.

◆ **Rewrite The Sentences Using The Correct Meaning Of Given Phrases/Idioms. [4]**

48. She hadn't gone through all the stages of worldly experience that generally precede a position of

Importance and sophistication that she had found herself catapulted into.

[baffled by, fixed with, tossed into]

49. And she saw it all again, last Saturday - saw him ghost past the defenders.
[move very fast through, almost suddenly frighten, tightly clasp]
50. They made spontaneous demonstrations around the courthouse.
[artful marches, planned rallies, unplanned protests]
51. The wizard would demand in payment a number of pennies greater in amount but in the same breath direct the animal to a place where the extra pennies could be found.
[with the same mouth, at the same time, with the same air]

◆ **Convert The Following Into Indirect Speech. [4]**

52. Umber-to Eco wondered, "A lot of books have been written about the medieval past far before mine. I think the success of the book is a mystery. Nobody can predict it. I think if I had written 'The Name of the Rose' ten years earlier or ten years later, it wouldn't have been the same. Why it worked at that time is a mystery."

➤ **Do as directed : [6]**

53. Ruskin Bond had developed a deep love for India. (Change the voice)
(a) A deep love had developed for India.
(b) A deep love had been developing for India.
(c) A deep love had been developed for India by Ruskin Bond.
(d) A deep love had being developed by Ruskin Bond.
54. We have got too much of confusion,? (Add proper question tag)
(a) hadn't we? (b) haven't we?
(c) have we? (d) had we?
55. There was a scarcity of ice, Atheletes could not ski. (start with owing to)
(a) Owing to skiing there was scarcity of ice.
(b) Owing to ski, Atheletes were scarce.
(c) Owing to scarcity of ice, Atheletes could ski easily.
(d) Owing to scarcity of ice, Atheletes could not ski.
56. The dream looked stricter than his life (change the degree)
(a) The dream looked so strict as his life.
(b) The dream looked stricter than all lives.
(c) The dream did not look as strict as his life.
(d) His life did not look so strict as the dream.
57. Sayani went to her friend to meet her. (use 'his')
(a) Sayani went to his friend to meet her.
(b) Sayani went to his friend to meet him.
(c) Savan went to his friend to meet him.
(d) Savan went to meet his friend to meet her.
58. The author wanted to start but winter stopped him. (use 'though')
(a) The author wanted to start though winter stopped him.
(b) Though the winter stopped the author, he wanted to start.
(c) Though the author wanted to start, the winter stopped him.

(d) Though the author started, the winter stopped him.

Section : D

◆ **Read The Following Passage And Answer The Questions Given Below It: [Unseen Passage] [5]**

तद्विद्धि प्रणिपातेन परिप्रश्नेन सेवया ।

उपदेक्ष्यन्ति ते ज्ञानं ज्ञानिनस्तत्त्वदर्शिनः ॥

(Meaning: Know it from wisemen, touch their feet, serve them and ask questions with pure heart i.e. with no slyness. They know the ultimate divine. They will preach you the philosophy.)

59. According to the verse, how should one approach a wise man for knowledge?

60. What must be absent in a seeker's questions?

All of these aspects contribute in making the Gita a book for all humankind. Henry David Thoreau wrote, "In the morning I bathe my intellect in the stupendous and cosmogenic philosophy of the Bhagavad Gita in comparison with which our modern world and its literature seem puny and trivial." Aldous Huxley, the famous English philosopher said, the Gita is "One of the clearest and comprehensive summaries of perennial philosophy ever revealed; hence its enduring value is subject not only to India but to all humanity." Wilhelm von Humboldt pronounced the Gita as: "The most beautiful, perhaps the only true philosophical song existing in any known tongue." Albert Einstein, the world-renowned scientist, said, "When I read the Bhagavad Gita and reflect about how God created this universe, everything else seems so superfluous." Mahatma Gandhi also said, "When doubts haunt me, when disappointments stare me in the face, I turn to the Bhagavad-Gita and find a verse to comfort me." Dr APJ Abdul Kalam, our former President said, "The Gita is a permanent source of inspiration for all human beings. The study of the Gita solves all my problems."

61. Make a list of famous people mentioned in the passage who admired the Gita.

62. When did Gandhiji turn to Gita?

63. What did Dr. A.P.J. Abdul Kalam believe about Gita?

OR

◆ **Read the Poem and answer the ques.[Unseen Poem]**

1. The rush of the wind, a door on the slam

The boom of the thunder, the crash of the waves

The din of a river that races and raves,

The Crack of a rifle, the clank of a pail,

The strident tattoo of a swift slapping sail,

From any old sound that the silence destroys

Arises a gamut of soul-stirring joys I like noise.

59. Pick out the natural elements mentioned in the stanza.

60. When does a door make noise?

61. What kind of sound does the poet like?

62. To which discipline is the word "gamut" connected with?

63. Give the suitable title to the poem.

◆ **Answer As Requested. [Advertisement] [5]**

64. You are the Director of Gujarat Environmental Council. Design a suitable poster to be used in newspaper and magazine to encourage and preserve the precious reserve of water.

◆ **[Data Analysis/ Prepare Notes] [5]**

65. Study the following data and interpret it in six to seven sentences.

Player	Half Centuries	Runs	Man of the Match
Sachin	7	583	4
Kalis	10	540	5
Uthappa	8	530	3
Dravis	4	410	2

OR

Read the following passage and prepare notes for same.

You must work also for the unity of the world. We have come to a stage where our nationality is the human race and the whole world is our home. We must therefore try to do our utmost to remove the disabilities from which other people are suffering. This is why | said that racial bigotry, political exploitation, colonial domination and economic exploitation must be removed as speedily as possible, the causes, which produce conflicts, are to be removed. | hope that in all your trainings it is not with obscurantist eyes but with fresh eyes, with modern eyes, thinking that nothing is to be accepted by us unless we are able to see that it commands itself to the spirit of our reason. Your training here, | hope has given you not merely scientific power and technical knowledge but also a scientific temper which look at the facts in a disciplined way. You are able to do it as worthy sons of our country and worthy citizens of this world.

◆ **Answer As Requested. [e-mail] [5]**

66. To the Municipal Commissioner complaining about the negligence of proper supervision and maintenance of the public park in your area.

Section : E

◆ **Answer As Requested. [Report/Article] [5]**

67. A huge fire broke out in a slum in your city, as a reporter with a daily you were asked to cover it.

Write a report for the newspaper. **OR**

Write a newspaper article on 'Child labour'.

◆ **Draft An Application. [7]**

68. You are Sneh Dave and you have come to know through reliable sources that there is a vacancy in a travel agents firm. Write an application giving details of your qualification.

◆ **Answer As Requested. [Essay/Speech] [8]**

69. Write an essay in about 200 words on any one of the following.

1. Excuses : Taken for Granted

[Points: usc of excuses- different excuses by students- excuses and reality - try to imply excuse free thinking]

2. Your Favourite T.V. Serial

[Points : name of the serial- variety of characters - their attachment and way of living - humour messages] **OR**

You are required to speak on the topic Corruption : Its Causes and Remedies during the school Assembly Period. Write a speech on the same

"All The Best"



Federation of Academic Association

PAPER - 2

- STD. 12TH EM
- SUB. ENGLISH
- MARK 100
- TIME 3 Hour.

SECTION :- A

★ Read the following passage and select the appropriate answers : [5]

In everything Gandhi did, moreover, he tried to mould a new free Indian who could stand on his own feet and thus make India free. Early in the Champaran action, Charles Freer Andrews, the English pacifist who had become a devoted follower of the Mahatma, came to bid Gandhi farewell before going on a tour of duty to the Fiji Islands. Gandhi's lawyer friends thought it would be a good idea for Andrews to stay in Champaran and help them. Andrews was willing if Gandhi agreed. But Gandhi was vehemently opposed. He said, "You think that in this unequal fight it would be helpful if we have an Englishman on our side. This shows the weakness of your heart. The cause is just and you must rely upon yourselves to win the battle. You should not seek a prop in Mr Andrews because he happens to be an Englishman".

"He had read our minds correctly," Rajendra Prasad comments, "and we had no reply ... Gandhi in this way taught us a lesson in self-reliance". Self-reliance, Indian independence and help to sharecroppers were all bound together.

Questions :

1. In his efforts to make India free, Gandhiji tried to
A. do everything.
B. shape a new free Indian.
C. make each individual independent.
D. None of these three
2. Gandhiji's lawyer friends wanted Andrews
A. to stay in Champaran and help them.
B. to bid Gandhi farewell.
C. to go to the Fiji Islands.
D. Oppose Gandhiji.
3. Gandhiji did not want Andrews to stay back and help them because
A. he us an Englishman.
B. Gandhiji believed that they should not seek support from other than Indian.
C. Mr Andrews was not a reliable man.
D. Both 'A and 'B'

4. Andrews came to bid farewell to Gandhiji because

- A. he wanted to go back to his own country.
- B. he wanted to go to Champaran.
- C. he was going on a tour of duty to the Fiji Islands.
- D. he wanted to leave Gandhiji for ever.

5. The word in the passage which means 'strongly is :

- A. 'mould'.
- B. 'vehemently'.
- C. 'self-reliance'.
- D. 'sharecroppers

★ Fill in the blanks with appropriate options from the brackets: [5]

(Write the answers only)

(years. Motorcycle, newspaper, travelling, kneeling, side, carpet, each, apprentice, tinkering)
He was6..... on the floor in the next room
.....7..... with a part of his8..... over some
.....9..... spread on the10..... He was three
....11..... of school, an12..... mechanic,
....13..... to his work14.... day to the far15
of the city.

★ Answer the following questions in about six to seven sentences each : (Any three) [9]

16. How was Gandhi able to influence lawyers ? Give instances.
17. How did the peddler feel after robbing the crofter ? What course did he adopt and how did he react to the new situation ?
18. "I had an aversion to the water when I was in it ?" says Douglas. When did he start having this aversion and how?
19. Give a brief account of the life and activities of the Bangladeshi squatters like Saheb - e - Alam settled in Seemapuri.
20. What arguments did the young girl give in favour of the stranger's stay there ?

SECTION :- B

★ Read the verse and answer the questions : [4]

Driving from my parents home to Cochin last
Friday morning, I saw my mother, beside me,
doze, open mouthed, her face ashen like that
of a corpse and realised with pain
that she was as old as she looked but soon
put that thought away, and looked out at Young
Trees Sprinting, the merry children spilling

Out of their homes, ...'

Questions :

21. Where was the poetess driving to ? Who was sitting beside her ?
22. Why was the face of the poetess's mother looked like that of a corpse ?
23. What did the poetess realise ? How did she feel ?
24. What did she notice in the world outside ?

✦ **Choose the Correct figures of Speech from the options given below :** [4]

25. Bright topaz denizens of world of green.

- A. Simile B. Metaphor
C. Synecdoche D. Apostrophe

26. Of signs with N turned wrong and S turned wrong.

- A. Antithesis B. Oxymoron
C. Repetition D. Anastrophe

27... her face ashen like that of a corpse.

- A. Metaphor B. Exaggeration
C. Simile D. Personification

28. An endless fountain of immortal drink.

- A. Synecdoche B. Alliteration
C. Metaphor D. Internal Rhyme

✦ **Answer the following questions in about four to five Sentences each : (Any four)** [8]

29. How has the poet contrasted the scene inside the car with the activities going on outside ?
30. What is suggested by the image 'massive weight of Uncle's wedding band' ?
31. What spreads the 'pall of despondence' over our dark spirits ? How is it removed ?
32. What difficulty does Aunt Jennifer face while making her tigers and why ?
33. What kind of pain and ache that the poet feels ?
34. How might a huge silence interrupt the Sadness of men ?

✦ **Read the following passage and answer the questions given below .** [2]

"You say the man escaped ?" the General asked faintly. He had been operated upon a week before, an emergency Operation to which Sadao had been Called in the night. For twelve hours Sadao had not been sure the General would live. The gall bladder was much involved. Then the old man had begun to breathe deeply again and to demand food. Sadao had not been able to ask about the assassins.

So far as he knew they had never come. The servants had returned and Yumi had Cleaned the guest room thoroughly and had burned sulphur in it to get the white man's smell out of it. Nobody said anything. Only the gardener was cross

because he had got behind with his chrysanthemums.

Questions :

35. What had made the General's condition critical ?
36. What had Yumi done ? Why ?

✦ **Read the following passage and answer the questions given below :** [3]

The little girl (not so little any more; the bumps her feet made under the covers were halfway down the bed. their big double bed that they let her be in for naps and when she was sick) had at last arranged herself, and from the way her fat face deep in the pillow shone in the sunlight sifting through the drawn shades, it did not seem fantastic that some magic would occur, and she would take her nap like an infant of two. Her brother, Bobby, was two, and already asleep with his bottle. Jack asked. "Who shall the story be about today ?"

"Roger Jo squeezed her eyes shut and smiled to be thinking she was thinking. Her eyes opened, her mother's blue. "Skunk." she said firmly.

A new animal; they must talk about skunks at nursery school. Having a fresh hero momentarily stirred Jack to creative enthusiasm. "All right." he said. "Once upon a time, in the deep dark woods, there was a tiny little creature by the name of Roger Skunk. And he smelled very bad."

"Yes." Jo said.

Questions :

37. Why was the double bed made ?
38. Whose story Jo wanted to hear ?
39. Who was ready to tell the story ?

SECTION :- C

✦ **Rectify the Errors :** [4]

	Errors	Corrections
40. My introductory to the Y.M.C.A.
41. swimming pool revival unpleasant
42. memories yet stirred childish fears
43. but in a little while I gathering confidence.

✦ **Punctuate the passage appropriately :** [2]

.....44..... Please don't think that I have such a fine home that you cannot show yourself there

.....45..... He said46..... "Elizabeth is dead as you may already have heard47.....

✦ **Rewrite the sentences using the correct meanings of the given Phrases /Idioms : [4]**

48. Don't go so fast, you will get to your school in plenty of time. (very late, too early, early enough)
49. On hearing her voice through the sound equipment, she was struck dumb. (surprised, furious, excited)
50. He wanted a chance to sneak away as inconspicuously as possible. (leave stealthily, leave alarmingly, leave hurriedly)
51. We are enroute to your office, please wait a little longer. (close to, on the way, searching for)

52. Convert the into Indirect Speech : [4]

The chap that threw me in was saying,
"But I was only fooling."
Someone said, "The kid nearly died.
Be all right now.
Let's carry him to the locker room."

✦ **Do as directed : [6]**

53. I have nothing else to do. (Make it Interrogative.)
- A. Have I nothing else to do ?
B. Have I anything else to do ?
C. Have I something else to do ?
D. Have I everything else to do ?
54. Why not organise yourself into a cooperative ? (Make it Assertive.)
- A. You do not organise yourself into a cooperative.
B. You should not organise yourself into a cooperative.
C. You should organise yourself into a cooperative.
D. You can organise yourself into a cooperative.
55. His greatest ambition was to ship out good iron to the market. (Change the Degree.)
- A. To ship out good iron to the market was his greater ambition.
B. To ship out good iron to the market was his as great ambition.
C. To ship out good iron to the market was his greater ambition than anyone else's
D. To ship out good iron to the market was his as great ambition as anybody else.
56. For weeks he never left Gandhiji's side. (Turn into Affirmative.)
- A. For weeks he always left Gandhiji's side.
B. For weeks he always stood by Gandhiji's side.
C. For weeks he followed Gandhiji's side.
D. For weeks he ever left Gandhiji's side.
57. It is a supremely serviceable medium of communication. (Add a Question tag.)
- A. It is a supremely serviceable medium of communication. don't it ?

- B. It is a supremely serviceable medium of communication, doesn't it ?
- C. It is a supremely serviceable medium of communication, isn't it ?
- D. It is a supremely serviceable medium of communication, hasn't it ?

58. Rajendra Prasad has recorded the upshot of their consultations. (Change the Voice.)

- A. The upshot of their consultations is recorded by Rajendra Prasad.
- B. The upshot of their consultations was recorded by Rajendra Prasad.
- C. The upshot of their consultations will be recorded by Rajendra Prasad.
- D. The upshot of their consultations has been recorded by Rajendra Prasad.

SECTION :- D

✦ **Read the following passage and answer the questions given below : [5]**

Soaked in the ethos of universal welfare, the Bhagavad Gita stands as a remarkable gift of Indian culture! What sets this book apart is its ability to impart profound wisdom succinctly. She enriches our minds with boundless waves of joy, tranquility, and love. Through its simple and clear exposition, the book renders access of the profound insights of Vedant to the ordinary populace. It is "वासुदेवः सर्वम् इति ॥"

वासं करोति इति वासुदेवः । Means one who dwells in everything is Vasudev! Though the world presents itself in diverse forms, the underlying essence remains one the Divine; and though the Almighty is one, He manifests Himself in different forms. Just as shapes and colours of balloons may be different, the air filled in it is the same. The Supreme Soul dwells in everybody.

1. What makes the Bhagavad Gita a remarkable gift of Indian culture?
2. What does the phrase "वासुदेवः सर्वम् इति" signify in the Bhagavad Gita?

Question-answer is the best way in knowledge tradition. Eligibility of the knowledge seeker is expected. It's emphasized here that one acquires knowledge by serving the guru wisely, winning his grace and then seeking answers. This is how Arjun submits himself to Lord Krishna demonstrating surrender:

यच्छ्रेयः स्यान्निश्चितं ब्रूहि तन्मे ।

शिष्यस्तेऽहं शाधि मां त्वां प्रपन्नम् ॥

(Meaning: my Lord, tell me what is specific for my spiritual welfare, for I am your disciple. I have submitted myself to you. Please, direct me.) This has been amazing Indian guru-shishya (master-disciple) tradition. This is the relationship where we witness the endeavour to procure knowledge with selfless, undoubtable and pure heart. That is why guru has been described as the ultimate divine himself. गुरुः साक्षात् परब्रह्म ।

History bears witness that revered figures have attained knowledge at guru's feet. Shri Ram acquired knowledge in proximity of Vishwamitra and Shree Krishna in proximity of guru Sandipani. Rushi Matang was guru of Shabari and Saint Raidas was guru of Mirabai. In the Guru-Shishya tradition, students approach their gurus with curiosity and humility, eager to gain knowledge. The guru provides knowledge to those who whole-heartedly surrender themselves in the pursuit of knowledge. Therefore, showing respect to the teacher and practicing their teachings in life is considered a form of service.

3. How does Arjun demonstrate surrender in the Bhagavad Gita?
4. Why is the guru regarded as divine in Indian tradition?
5. What role does the Guru-Shishya tradition play in knowledge acquisition?

OR

◆ **Read the following poem and answer the questions given below :**

Piping down the valleys wild,
Piping songs of pleasant glee !
On a cloud I saw a child.
And he laughing said to me :
'Pipe a song about a Lamb!'
So I piped with merry cheer.
'Drop thy pipe, thy happy pipe;
Sing the songs of happy cheer:
So I sang the same again.
While he wept with joy to hear.
'Piper, sit thee down, and write
In a book that all may read.'
So he vanish'd from my sight,
And I pluck'd a hollow-reed,
And I made a rural pen,
And I stain'd the water clear.
And I wrote my happy songs
Every child may joy to hear. - William Blake

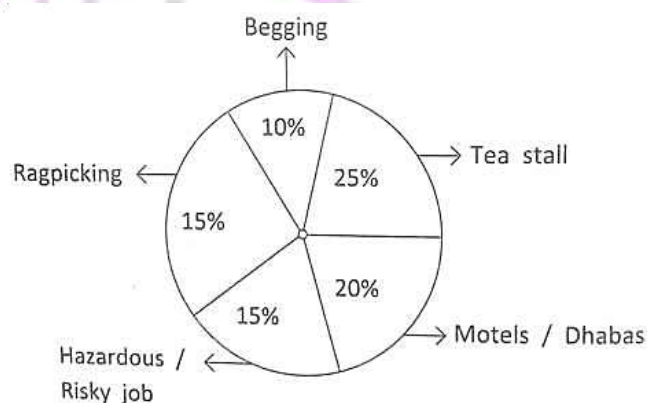
Questions :

59. What is the child symbolised as in this poem?
60. What was the effect of the song played on a pipe on the child for the first time ?

61. What did the child instruct the piper to do when the piper was playing on the pipe the second time?
62. What did the child finally ask the piper to do? What was the reason ?
63. Suggest a suitable title for the poem.
64. You are opening a Yoga Coaching Center. Draft an advertisement for its promotion.

65. Study the following advertisement and interpret it in six to seven sentences : [5]

65. Child labour is a blot on our society Following is the chart of 1000 children below 14 years age engaged in different activities. Interpret the chart, in about 6 to 7 sentences.



OR

65. Prepare notes for the following passage :

It is rare to find someone with a good technical and communication skills. You can get far ahead of your colleagues if you combine the two early in your career.

People will judge, evaluate, promote or block you based on your communication skills. Since habits form by repeating both good and bad forms of communication, learn to observe great communicators and adopt their styles and traits – in written and verbal forms. The art of listening and learning from each and every interaction, is another secret recipe.

Develop the subconscious habit of listening to yourself as you speak and know when to pause. Learning what not to Say is probably more important than learning what to say. AS your career develops, you will realize that the wise speak less. Speak when you have value to add, else refrain. Poorly constructed e - mails with grammatical errors are acceptable between friends, but they should be seriously avoided with communicating formally with your seniors. Avoid any communication in an emotional state when you might say things you will regret later. One unnecessary word uttered at the wrong time or place can ruin a relationship, career or even your life. Such is the power of words. If such a

thing happens, you should immediately apologise, else it may haunt you for life.

66. Write an email to Traffic Commissioner Police to put up junction signal lights at the crossroads in your newly developed area of New Ranip. [5]

SECTION :- E

67. Write a report on 'Cleanliness Drive' held in your school for the local newspaper. Mention all the details. [5]

OR

67. Write an article on governments 'Swachhata Abhiyan'.

68. Monita Vaidya of 32, Rangsmruti Apts., Punit Marg, Maninagar, Ahmedabad – 380 008 applies for the job of Sales Executive. Write an application to the Personnel Manager, Crossroads, Ellisbridge, Ahmedabad - 380 006 on her behalf.

69. Write an essay in about 250 words on any one of the following topics : [8]

(A) Environmental Protection

(introduction - environmental problems - need of hour - menace to be fought - actions to be taken - awareness to be brought - conclusion)

(B) Frequent General Elections - A National Wastage

(elections, inevitability in Democracy - hinders smooth functioning of democracy - wastage of money and manpower - harms economic health - stability factor - conclusion)

OR

69. Our country is prone to disasters like floods, drought, cyclones, earthquakes. Etc.

Some disaster management should be planned, introduced and implemented intensively.

Prepare a speech in about 250 words relating to this issue.

All The Best





Federation of Academic Association

PAPER - 3

- STD. 12TH EM
- SUB. ENGLISH
- MARK 100
- TIME 3 Hour.

Section : A

◆ Read The Following Passage And Select The Appropriate Answers. [Unit based] [5]

1. One dark evening as he was trudging along the road he caught sight of a little gray cottage by the roadside, and he knocked on the door to ask shelter for the night. Nor was he refused. Instead of the sour faces which ordinarily met him, the owner, who was an old man without wife or child, was happy to get someone to talk to in his loneliness. Immediately he put the porridge pot on the fire and gave him supper, then he carved off such a big slice from his tobacco roll that it was enough both for the stranger's pipe and his own. Finally he got out an old pack of cards and played 'mjolis' with his guest until bed time. The old man was just as generous with his confidences as with his porridge and tobacco. The guest was informed at once that in his days of prosperity his host had been a crofter at Ramsjo Ironworks and had worked on the land. Now that he was no longer able to do day labour, it was his cow which supported him. Yes, that bossy was extraordinary. She could give milk for the creamery everyday, and last month he had received all of thirty kronor in payment. The stranger must have seemed incredulous, for the old man got up and went to the window, took down a leather pouch which hung on a nail in the very window frame, and picked out three wrinkled ten-kronor bills
- (1) Why did the peddler knock at the old man's door
(A) to ask for some food and water to survive
(B) to ask for some kronor to buy essentials from nearby market
(C) to ask for a stay for a night
(D) to talk to the old man and play cards with him
- (2) Was the old man like other sour faces which peddler came across during his roaming?
(A) yes (B) no (C) not given
(D) may be for some occasion only
- (3) What was the profession of the old man when the peddler met him ?
(A) crofter at the Ramsjo Ironworks
(B) crofter at his own farm
(C) a small farmer
(D) a milkman at the big cattle farm
- (4) Following is the service that the old man gave to the peddler. Find the odd man out ____.
(A) He put porridge pot on the fire and serve him as supper

- (B) He gave some tobacco from a big slice taken from a tobacco roll to smoke for.
(C) He gave some money from the pouch that he hung on a nail of a window.
(D) He got out an old pack of cards and played 'mjolis' with his guest until bedtime.

(5) The stranger must have seemed incredulous, for the old man got up and went to the window...? what do you predict from the underlined part of the given statement

- (A) The peddler got pity on the condition of an old crofter.
(B) He was thinking of an opportunity of stealing from the old man's innocent revealing.
(C) He thought about an idea to give up selling rat traps and start a business like and old man.
(D) He thought of a work of an accountant in old man's farm

◆ Fill In The Blanks With Appropriate Option In The Brackets And Write The Answers Only. [5]

[undertaken, occupied, entreaty, evidence, assembled, refunds, agreed, expectation, planters, official]

The visit, (6)..... Casually On the (7)..... Of an unlettered peasant in the (8) that It would last a few days, (9)..... almost a year of Gandhi's life. The(10) inquiry (11) a Crushing mountain of (12) against the big (13)..... , and when they saw this they (14)....., in principle, to make (15)to the peasants.

◆ Answer The Following Questions In Six-Seven

Sentences Each.[Unit Based] (ANY 3) [9]

16. Name one example to show that Gemini Studios was influenced by the plays staged by MRA.
17. "All we have to fear is fear itself". How did the narrator overcome his fear of water?
18. How did Franz's feelings about M. Hamel and school change?
19. Which country did Danny Casey play for?
20. Would you agree that promises made to poor children are rarely kept ? Why do you think this happens in the incidents narrated in the text ?

Section : B

◆ Read The Following Verse And Answer The Questions.[Poem Based] [4]

On sour cream walls, donations.
Shakespeare's head,
Cloudless at dawn, civilized dome riding all cities
Belled, flowery, Tyrolese valley,
Open-handed map :
Awarding the world its world.

21. Explain the line - Awarding the world its world'
22. What is the poetic device used in the first line ?
23. Who has penned the above verse ?
24. What things have been donated to the classroom?

◆ Choose The Correct Figure Of Speech From The Given Options. [4]

25. And looked out at Young Trees springing
 - A. Hyperbole and Metaphor
 - B. Personification and Simile
 - C. Hyperbole and Personification
 - D. Litotes and Tautology
26. Offered for sale wild berries in wooden quarts or crook-necked golden squash with silver warts
 - A. Tautology and Personification
 - B. Simile and Metonymy
 - C. Alliteration and Internal Rhyme
 - D. Oxymoron and Personification
27. Far far from rivers, capes, and stars of words.
 - A. Internal Rhyme and Simile
 - B. Alliteration and Internal Rhyme
 - C. Paradox and Repetition
 - D. Transferred Epithet and Synecdoche
28. And such too is the grandeur of the dooms we have imagined for the mighty dead
 - A. Transferred Epithet and Simile
 - B. Metaphor and Litotes
 - C. Paradox and Metonymy
 - D. Irony and Paradox

◆ Answer The Following Questions In About Four To Five Sentences Each. [Poem Based] (ANY 4) [8]

29. What familiar ache and childhood fear did Kamala Das feel ?
30. What image does the poet use to describe the beautiful bounty of the Earth?
31. What does the poet want for the children of the slums ? How can their be made to change ?
32. What was the plea of the folk who had put up the roadside stand?
33. Do you think that the poet Pablo Neruda advocates total inactivity and death ?
34. What is the 'sadness that the poet Pablo Neruda refers to in the poem ?

◆ Read the passage and answer the question.[5]

'Go to the end of the lane and turn around three times and look down the magic well and there you will find three pennies. Hurry up.' So Roger Skunk

went to the end of the lane and turned around three times and there in the magic well were three pennies! So he took them back to the wizard and was very happy and ran out into the woods and all the other little animals gathered around him because he smelled so good.

35. What is the title of the story?

36. Why did Roger Skunk have to go to the magic well?

37. Why did the other animals play with Roger Skunk?

2. At the stamp and coin store I go to, I found out that Sam bought eight hundred dollars' worth of old-style currency. That ought to set him up in a nice little hay, feed and grain business; he always said that's what he really wished he could do, and he certainly can't go back to his old business not in Galesburg Illinois, in 1894. His old business? Why, Sam was my psychiatrist.
 38. Why had Sam bought the old currency?
 39. Who was Sam?

Section : C

◆ Rectify The Errors. [4]

- | 1. | Incorrect | correct |
|--|-----------|---------|
| 40. The interview are cowardly and evil | | |
| 41. It is an offence about one's person | | |
| 42. It is an assault which need to be punished.... | | |
| 43. I would never consent to been interviewed.... | | |

◆ Punctuate The Following Passage. [2]

___44___ Don't be so upset ___45___ even through this seems like total loss ___46___ remember, no one dies of hunger ___47___

◆ Rewrite The Sentences Using The Correct Meaning Of Given Phrases/Idioms. [4]

48. He sank down on the ground, thinking that his last moment had come. [he was going to be unconscious, it was time for him to die, he was going to sleep]
49. I will tell you how it happened that | decided to urge the departure of the british. [to advise the exit of, to help the movement of, to wish the difference of]
50. Jansie, linking arms with Sophie along the street; looked doubtful. [holding hands of, joining body parts of, putting arm around]
51. You should not seek a prop in Mr. Andrews because he happens to be an Englishman. [take advantage of, look for support of, obtain the signature of]

◆ Convert The Following Into Indirect Speech. [4]

52. The Maharaja said, "What if the hundredth tiger were also killed ?" The astrologer replied, "Then | will tear up all my books on astrology, set fire to them, and." "and..." "I shall cut off my tuft, crop my hair short and become an insurance agent."

◆ Do as Directed (MCQs) [6]

53. All night Gandhiji remained awake. (Choose the correct Negative sentence.)

- A. All night Gandhiji can't sleep.
- B. All night Gandhiji avoided to remain awake.
- C. All night Gandhiji did not sleep.
- D. All night Gandhiji remained asleep.

54. The place was quiet. (Choose the correct Interrogative sentence.)

- A. Wasn't the place quiet?
- B. Isn't the place quiet?
- C. Didn't the place become quiet?
- D. Do you think the place was quiet?

55. He only stared at the young girl in boundless amazement. (Choose the correct Exclamatory sentence.)

- A. What only In boundless amazement he stared at the young girl!
- B. Oh! In boundless amazement he stared at the young girl.
- C. How only in boundless amazement stared he at the young girl!
- D. How only in boundless amazement he stared at the young girl!

56. Gandhiji kept a long distance watch on the ashram. (Choose the correct Question Tag.)

- A. Gandhiji kept a long distance watch on the ashram, doesn't he?
- B. Gandhiji kept a long distance watch on the ashram, don't he?
- C. Gandhiji kept a long distance watch on the ashram, didn't he?
- D. Gandhiji kept a long distance watch on the ashram, does he?

57. I have nothing else to do. (Make it Interrogative.)

- A. Have I nothing else to do?
- B. Have I anything else to do?
- C. Have I something else to do?
- D. Have I everything else to do?

58. Why not organise yourself into a cooperative? (Make it Assertive.)

- A. You do not organise yourself into a cooperative.
- B. You should not organise yourself into a cooperative.
- C. You should organise yourself into a cooperative.
- D. You can organise yourself into a cooperative.

Section : D

◆ Read The Following Passage And Answer The Questions Given Below It: [Unseen Passage] [5]

The Shrimad Bhagvad Gita is a divine conversation between the Creator and a human being that unveils truths. In this dialogue, Arjun represents all humanity. Lord Krishna, as the Almighty, provides divine guidance through the Shrimad Bhagvad Gita. The divine dialogue, sung in the battlefield of Kurukshetra, guides humanity towards the ultimate goodness. The wisdom imparted in the Shrimad Bhagvad Gita isn't confined to any specific race, time, or country; its message is

universal and timeless. Its teachings serve as a benchmark for leading aimful, sublime, fearless, peaceful, creative, pious, and harmonious life. In this regard, the Gita is a universally applicable scripture. Scholars worldwide have praised her, recognizing her universality.

59. Who are described as creator and the representative of all humanity?

60. Why is the Gita a universally applicable scripture?

यदा यदा हि धर्मस्य ग्लानिर्भवति भारत ।

अभ्युत्थानमधर्मस्य तदात्मानं सृजाम्यहम् परित्राणाय
साधूनां विनाशाय च दुष्कृताम् ।

धर्मसंस्थापनार्थाय सम्भवामि युगे युगे

(Meaning: O Bharat, whenever there is a decline of Dharma, and uprising of Adharma, then I incarnate Myself, i.e. take a form before the people. For the protection of the good, people and also for the destruction of the wicked, for the establishment of Dharma, I incarnate myself in every era In the Puranas, there are descriptions of Vishnu's various avatars, including Matsy (in the form of a fish), Kurm (in the form of a tortoise), Varah (in the form of a boar), Narasimha (in the form of half lion and half human body), Vaman (dwarf), Parashuram, Ram, Krishna, Buddha, and Kalki. These divine incarnations serve to protect the righteous and restore dharma. From these ten avatars, we can infer that God offers suitable solutions by taking on a befitting form based on the prevailing issues. God consistently stands by those who perform noble deeds. When we engage wholeheartedly in virtuous actions, God assists us; and the divine power manifests himself in a new form to support the noble people.

61. When does any era witness incarnation of God?

62. Mention any two Avatars of Vishnu described here.

63. How can we get assistance from the God?

OR

◆ Read the Following Poem and answer the ques.[Unseen Poem] [5]

The body isn't real man,
Neither is the mind

For the mind waxes and wanes.

It is the spirit beyond that lives forever,
Mind and body-continually changing.

In fact, are names of changeful phenomena
Like rivers, whose water is a constant move,

Yet present the appearance of
Unbroken streams.

59. What remains forever?

60. What is the phenomena of life?

61. Find the antonyms of: Broke, Static.

62. F.O.S. for the line "For the mind waxes and wanes".

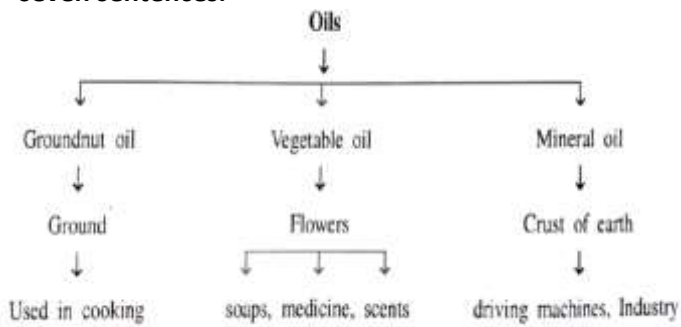
63. Give the suitable title to the poem.

◆ Answer As Requested. [Advertisement] [5]

64. You are associated with an NGO named 'KIDS' World'. Make a poster to be displayed at schools to make students do the kind deed of donating their toys for poor children.

◆ [Data Analysis/ Prepare Notes] [5]

65. Study the following data and interpret it in six to seven sentences.



OR

Study the following data and interpret it in six to seven sentences.

At the outset let us put this question to Nature around us. All the “books in running brooks and sermons in stones” preach with unmistakable accent the gospel of continuous, incessant work. Light bestows upon us the Power of sight. Light gives a Mainspring to all beings. Let us see what light is thrown on the question by light itself. Rama will take for illustration the ordinary light—the lamp. The underlying secret of a lamp’s lustre and Splendour is that it spares not its wick and oil. The wick and oil or the little self is being constantly consumed and glory is the natural consequence. There it is, the lamp Says, spare yourself and you will be immediately extinguished. If you seek ease and comfort for your bodies and waste your time in sensual pleasures and luxury, there is no hope for you. Inactivity, in other words, would bring death to you, and activity and activity alone is life. Look at the stagnant pond and the running stream.

The crystal water of the rustling river is ever fresh, clear, drinkable and attractive. But on the other hand see how disgusting, odorous, filthy, dirty, stinking and stenching is the water of the stagnant pond. If you wish to succeed, follow the line of action, the constant motion of a river. There is no hope for a

"All The Best"

man who would waste his wick and oil by preserving it from consumption. Follow the policy of a river, ever Progressing, ever assimilating, ever adapting itself to the environments and ever Performing work, ever performing work is the first principle of success

- Swami Rama Tirtha

◆ Answer As Requested. [E-Mail] [5]

66. Write an Email to the your Broadband Service provider complaining about problems faced by you.

Section : E

◆ Answer As Requested. [Report/Article] [5]

67. Write a Report on a street play put up by your school on the topic ‘Save the girl child.’

OR

Write a newspaper article on ‘Tourism - Important for the economy’.

◆ Draft An Application. [7]

68. Anjali Dave, 63-Shriji Plaza, Central Point, Bharuch, responds to an Advertisement in ‘The Times of India’ dated August 16,20 ____ . Write an Application for the same.

[Wanted resourceful and result-oriented software engineers. Apply within 10 days to the Director, Sona Software Systems, 60, GIDC, Valsad.]

◆ Answer As Requested. [Essay/Speech] [8]

69. Write an essay in about 200 words on any one of the following.

1. Unity In Diversity

[Points: India - a democratic nation- its diversity - different customs and traditions - Similarities - brings unity]

2. India - A Democratic Nation

[Points : definition - popularity - how it functions - self reliance - its negative side]

OR

You have been asked to talk on the subject ‘Humanity above all nations’ is the need of the hour in these troubled times of terrorism and violence.



- ✓ **Step :- 1**
Scan the QR code. And download the MY PAPER Application.
- ✓ **Step :- 2**
Sign up in My Paper Application
- ✓ **Step :- 3**
Go to Board Paper
- ✓ **Step :- 4**
Set your Medium & Std.
- ✓ **Step :- 5**
Then Click on Your subject.
- ✓ **Step :- 6**
Click on Q. Paper to get your Question paper PDF & Click on A. Key to get your Answer Key.

☛ You can see answer key on MY PAPER application in January month.

For Answer Keys Follow the Bellow Given Instructions



Step :- 1

Scan the QR code. And download the MY PAPER Application.

Step :- 2

Sign up in My Paper Application

A screenshot of the 'My Paper' application login screen. It features a light blue header with a lightbulb icon. Below the header, there are input fields for 'Mobile Number' and 'Password', each with an eye icon for toggling visibility. A 'LOGIN' button is positioned below the password field. At the bottom, there are links for 'Don't have an account? Sign up' and 'Forgot Password?'.

Step :- 3

Go to Board Paper

Step :- 4

Set your Medium, Std. & Subject

A screenshot of the 'Board Paper' selection screen. It shows a list of subjects: 'GHSEB ENG.MED.', '12th Commerce', 'General Option', 'ELEMENTS OF ACCOUNTS(154)', '5.P.C.C.(337)', and '5.P.C.C.(337)'. A 'Select Medium' dropdown menu is open, showing options for 'ENG.MED.' and 'GUJ.MED.'.

Step :- 5

Click on Q. Paper to get your Question paper PDF & Click on A. Key to get your Answer Key.

A screenshot of the 'Question Paper and Answer Key' selection screen. It shows a list of subjects: 'ENG.MED.', '12th Commerce', 'ORG. OF COMM.(046)'. Below the list, there are two rows for the year '2023' and '2022'. Each row has a 'Q.Paper' button and an 'A.Key' button.



Federation of Academic Association

PAPER - 1

- STD. 12TH EM
- SUB. GUJ.
- MARK 100
- TIME 3 Hour.

વિભાગ : A

♦ પદ્ય - નીચેના દરેક પ્રશ્નના ઉત્તર માટે આપેલા વિકલ્પોમાંથી યોગ્ય વિકલ્પ પસંદ કરી ઉત્તર લખો: [5]

- સમય અને પુરુષ બંનેમાં કોણ બળવાન છે?
 - પુરુષ
 - સમય
 - સમય અને પુરુષ બંને
 - આપેલ પૈકી એક પણ નહિ
- પરણ્ય ભર્યું છે એનું પેટ રે લોલ, મેં રેજમાડ્યો મારો વીર ... પંક્તિમાં કયો ધર્મ વ્યક્ત થયો છે?
 - પત્નીધર્મ-બાંધવધર્મ
 - દેશધર્મ - રાજધર્મ
 - બંધુધર્મ- માનવધર્મ
 - રાષ્ટ્રધર્મ - માનવધર્મ
- વડલાના હૈયામાં શું સમાયેલ છે?
 - ફળ-ફૂલ અને પાંદડાં
 - લોકોના આશિષ
 - પંખીઓના મીઠા ટહુકા
 - ઘટાદાર છાંયડો
- “હેંકારી જા” કાવ્યમાં શબ્દરેખા કોની ભૂખ હતી?
 - રામદર્શન
 - પ્રભુદર્શન
 - જલદર્શન
 - શિવદર્શન
- રસ્તાઓ પૃથ્વીની આસપાસ શી રીતે વીટળાયેલા છે?
 - ઉત્તર ધ્રુવ અને દક્ષિણ ધ્રુવ
 - આભ અને પૃથ્વીની ક્ષિતિજ
 - અક્ષાંશ અને રેખાંશ
 - પૂર્વ-પશ્ચિમ અને ઉત્તર-દક્ષિણ

♦ પદ્ય - નીચે આપેલા જોડકાને સાચી રીતે જોડી કરીથી લખો. [4]

અ	બ
6. વડલો ને પંખીડાં	A. ગીત
7. વતનનો તલસાટ	B. ઊર્મિકાવ્ય
8. મેળો આપો તો	C. સોનેટ
9. બેટા, મને પાછી જવા દે	D. પદ
	E. લોકગીત

♦ પદ્ય - નીચેના પ્રશ્નોના એક - બે વાક્યમાં ઉત્તર લખો. [3]

- કવિ ઈશ્વરને કેવી રીતે પધારવાનું કહે છે ?
- ગુરુમુખી હોય તેમણે કેવી રીતે વર્તન કરવું ?
- લક્ષ્મીજીનો વસવાટ ક્યાં છે ?

♦ પદ્ય - નીચેના પ્રશ્નોના ટૂંકમાં ઉત્તર લખો. (કોઈ પણ 2) [4]

- કવિને સ્વપ્નમાં શું નજરે ચઢે છે ?
- પંખીઓ વડને શો જવાબ આપે છે ?
- કવિના પ્રાણ શાથી (ઉતાવળા) અધીર બન્યા ચી ? શા માટે ?

♦ પદ્ય - નીચેના પ્રશ્નોના સવિસ્તાર ઉત્તર લખો. (કોઈ પણ 1) [4]

- રસ્તાની આગવી વિશિષ્ટતા કાવ્યના આધારે તારવો.
- “વડલો ને પંખીડા” કાવ્યનું વક્તવ્ય સ્પષ્ટ કરો.

વિભાગ : B

♦ ગદ્ય - નીચેના દરેક પ્રશ્નના ઉત્તર માટે આપેલા વિકલ્પોમાંથી યોગ્ય વિકલ્પ પસંદ કરી ઉત્તર લખો : [4]

- “જ્યાં સુધી હું છું ત્યાં સુધી કોઈ આંખાનું પાંદડુંએ નહીં તોડી શકે.” આ વાક્ય કોણ બોલે છે અને કોને કહે છે?
 - રાજપૂત - પૂંજા મેજર
 - મેજર - ભવાનભાઈ
 - ભવાનભાઈ - પૂંજા મેજર
 - પંજા મેજર-ગામના મુખી
- નિશ્ચયના મહેલમાં વસે મારો વ્હાલમો ઉદાહરણ દયારામના કવનમાં કઈ પ્રકૃતિ પ્રતિપાદન કરે છે?
 - સાત્વિક અને તામસી
 - રાજસી અને સાત્વિક
 - તામસી અને રાજસી
 - તામસી અને સાત્વિક
- અખાને મતે બાદશાહની ટંકશાળ એટલે ...
 - અનુભવ અને દીર્ઘદ્રષ્ટિ
 - પ્રામાણિકતા અને લોભલાલચ
 - પ્રામાણિકતાને ચોકસાઈ
 - ચોકસાઈ અને મોહમાયા
- ‘જળનગરી વેનિસ’ પાઠના અનુવાદક કોણ છે?
 - લાભુબહેન મહેતા
 - મૃદુલાબહેન મહેતા
 - ઈશ્વર પેટલીકર
 - ચંદ્રવદન મહેતા

♦ નીચે આપેલા જોડકાને સાચી રીતે જોડી કરીથી લખો. [4]

અ	બ
22. સુખનો કાળ બાળપણનો	A. આસ્વાદલેખ
23. અઘરો દિવસ	B. સ્મરણકથા
24. સત્યવીર સંક્રિસ	C. લઘુકથા
25. બે લઘુકથાઓ	D. નવલિકા
	E. ચરિત્રનિબંધ

♦ ગદ્ય - નીચેના પ્રશ્નોના એક - બે વાક્યમાં ઉત્તર લખો. [4]

- નારાયણ હેમચંદ્ર કઈ કઈ ભાષાના જાણકાર હતાં ?
- બિસ્મિલ્લાખાંના જીવન પર સૌથી વધારે અસર કોની હતી ?
- બાપ મહીજી લુંટારો કેમ બન્યો હતો ?
- કુસુમ અને માળણ શો પ્રયત્ન કરી રહ્યાં હતાં ?

♦ ગદ્ય - નીચેના પ્રશ્નોના ટૂંકમાં ઉત્તર લખો. (કોઈ પણ 2) [4]

- રાજમા દીકરાને પત્રમાં શો સંદેશો મોકલે છે ? દીકરા તેનો શો પ્રત્યુત્તર આપે છે ?
- બાલ્યકાળના સુખની શી કલ્પના લેખક કરે છે ?
- બિસ્મિલ્લાખાંએ પોતાના સાજની કઈ કઈ વિશિષ્ટતાઓ ગણાવી છે ?

♦ નીચેના પ્રશ્નોના સવિસ્તાર ઉત્તર લખો. (કોઈ પણ 1) [4]

- સ્વતંત્ર વિચારક તરીકે સોફ્ટીસનું ચરિત્ર આલેખો.
- નારાયણ હેમચંદ્રનું ચરિત્ર ચિત્રણ કરો.

વિભાગ : C

◆ વાક્યોમાં યોગ્ય પ્રત્યય મૂકી વાક્ય પૂરું કરી ફરીથી લખો. [1]

35. રાજારાણી હવે કશું સાંભળવું જ નથી.

◆ નીચેના વાક્યમાં યોગ્ય નામયોગી મૂકી વાક્ય ફરીથી લખો. [1]

36. મારી આળસને જ મારે ભોગવવું પડ્યું.

◆ વાક્યમાં યોગ્ય પ્રત્યય અને નામયોગી મૂકી વાક્ય કરીથી લખો. [1]

37. રમેશ વિદેશમાં રહેવું સહેલું ન હતું.

◆ નીચેના વાક્યમાં યોગ્ય વિરામચિહ્ન મૂકી ફરીથી લખો. [1]

38. ` પ્રભુ મારા અવગુણ સામે જોશો નહિ હું જેવો છું તેવો મને તમે નિભાવી લેશો.

◆ વાક્યને અર્થપૂર્ણ બનાવવા માટે વિરામચિહ્ન સુધારી વાક્ય ફરીથી લખો: [1]

39. કચવાતા મને શરત, હતી તેથી ભાગ આપી ધોધો.

◆ નીચેના વાક્યોને યોગ્ય સંયોજન વડે જોડો. [1]

40. પેલા મિત્રે સૉફ્ટીસનાં કહેવા પ્રમાણે કર્યું. એનું સારું પરિણામ આવ્યું.

◆ નીચેના વાક્યોમાં ખોટા સંયોજકોનો પ્રયોગ કર્યો છે, તે ર સુધારી વાક્ય ફરીથી લખો: [1]

41. વેશ બદલ્યું શું થયું જો મન બદલવા જોઈએ.

◆ નીચેના વાક્યોમાંથી સાદું વાક્ય ઓળખાવો: [1]

42. A. એક વાર બરાબર વિચાર કરી લો.

B. રાજા વૃદ્ધ થયા, રાણી વૃદ્ધ થયાં પણ ચિરાયું તો એવોને એવો રાજકુમાર રહ્યો.

C. આ આંખનાં ફળ મને નથી મળવાનાં કે નથી એને છાંયે હું વિસામો ખાવાનો.

D. નામ બદલ્યું શું થયું, ભાઈ કામ બદલવા જોઈએ.

◆ નીચેના વાક્યોમાંથી સંયુક્ત વાક્ય ઓળખાવો: [1]

43. A. પ્રભાશંકર આંખ ઝીલી કરીને અંધકારમાં તાકી રહ્યા.

B. બે ધ્વિસથી હસમુખને પાન લાવવાનું યાદ કરાવવા છતાં એ ભૂલી જ જતો હતો !

C. રાજકુમાર સોળ વરસનો થયો.

D. જ્યાં સુધી એના અંગ પર રેશમી વસ્ત્ર રહેશે ત્યાં સુધી કાળની એના પર કશી અસર થશે નહિ.

◆ નીચેના વાક્યોમાંથી સંકુલ વાક્ય ઓળખાવો: [1]

44. A. મને તમારા ઉપર હજી વિશ્વાસ છે.

B. યાત્રાળુઓ નદી આગળ છે.

C. આજે ખેડૂતો પાંચમાલ થતા જાય છે અને કારીગર વર્ગ બેકાર બનતો જાય છે.

D. જ્યાં આટલી ઠંડી પડે છે ત્યાં લોકો કેમ રહેતા હશે?

◆ નીચેના વાક્યોમાંથી કયા વાક્યનો પદ્ય યોગ્ય છે, તે જણાવો. [2]

45. A. સીતા સ્વયંવરમાં ગીતા રાવણ બન્યો.

B. શુદ્ધ ભેંશનું એક કિલોગ્રામ ધી મને આપો.

C. નિશાળે ગીતાબેન ગયાં છે.

D. દરવાન રાજાના રાજમહેલની ચોકી કરે છે.

◆ નીચેના વાક્યોમાંથી કયા વાક્યનો પદ્યસંવાદ યોગ્ય છે તે જણાવો.

46. A. તેણે સફરજન એક જ ખાધું.

B. પાંદડું પરથી ઝાડ પડ્યું.

C. મહેશ અને સ્મિતા શાળા ગઈ.

D. મતદાન ડરવું એ પ્રત્યેક નાગરિકની ફરજ છે.

◆ રૂઢિપ્રયોગનો અર્થ આપો. [1]

47. તુંબડીમાં કાંકરા હોવા

A. બધામાં વાકું દેખાવે

B. કશી સમજણ પડવી

C. છૂપું રાખવું

D. અર્થવિનાનું બોલવું

◆ નીચેના સામાસિક શબ્દનો અર્થ આપો: [1]

48. પિઢેરિયું

A. કાચમાંથી બનાવેલું

B. કાચું ઘર

C. લાકડામાંથી બનાવેલું

D. માટીમાંથી બનાવેલું

◆ સમાનર્થી શબ્દ આપો. [1]

49. ધોખો

A. પ્રપંચ

B. વિશ્વાસ

C. આદેશ

D. એકપણ નહિ.

◆ વિરુદ્ધાર્થી શબ્દ આપો. [1]

50. સ્મરણ

A. યાદ

B. વિસ્મરણ

C. સમજણ

D. આપેલ તમામ.

◆ વાક્યોમાં કયા વાક્યની વાક્યરચના ખોટી છે, તે જણાવો. [1]

51. A. એક મંદિરની આગળ નાનકડો બગીચો છે.

B. કોઈ ગાંડા જેવો માણસ તમને મળવા માગે છે.

C. તમે આવ્યા તેથી હું રાજી થયો.

D. દુનિયાના સાધુપુરુષોનાં દર્શન કરવાનો મેં રિવાજ રાખ્યો છે.

◆ નીચેના શબ્દોમાંથી સાચી જોડણીવાળો શબ્દ શોધો : [1]

52. A. નિશ્ચિત B. સંતુષ્ટિ C. કરતવ્ય D. કોષ્ઠ

◆ નીચેના શબ્દોમાંથી ખોટી જોડણીવાળો શબ્દ શોધો. [1]

53. A. જાહોજલાલી B. દિલગીર C. સ્વેચ્છા D. વ્યક્તિત્વ

◆ નીચેના કહેવત-જોડકાંમાંથી સમાન અર્થવાળું જોડકું શોધો. [1]

54. A. અધૂરો ઘડો છલકાય ઘણો - ઝાઝા હાથ રળિયામણ

B. ચળકે એટલું સોનું નહિ - ઊજળું એટલું દૂધ નહિ

C. વાવે તેવું લણે - સોબત તેવી અસર

D. પૂછતો નર પંડિત થાય - નાચવું નહિ ને આંગણું વાંકું

વિભાગ : D

◆ કાવ્યને વાંચીને તેને આધારે પ્રશ્નોના જવાબ આપો. [5]

તાંબા લોટો ભરી તુલસીને પાણી પાચું ખરું કે ?

જોજો પાછું ભૂલી નવ જતાં વ્યર્થ જંજાણ આડે !

રે'શે મારા તુલસી તરસ્યા, પાંદડા ઓસવાસે.

એકેય ના પરણ ચૂંટજો જીવતું છોડવેથી ;

ફૂંડામા જે ખરી- ગરી પડ્યા હોય તે માત્ર લેજો ;

રાજી રે'શે પ્રભુ, ઝાળહળશે દીપ સૌભાગ્યનો યે.

નિત્યે માના મુખથી સ્તવતા શબ્દ ભીના ભરેલા;

વૃંદા-વિષ્ણુ-પરિણય લિયે કાર્તિકે ધન્યતાથી

ધ્રુજે દીવો, અરવ કણસે ખંડ, લંબાય ઓળા,

મૂંગું મૂંગું ઘસી રહ્યું કશું ભક્ષી લેવા પિતાને

સૂતેલા જે ક્ષીણ થઈ; બધે ડસકાં કૈ થીજેલા
અર્ધા ખુલ્લા જનકમુખમા કંપતે હાથે માતા
મૂકે લીલું પરણ તુલસીનું ભીડી હોઠ સૂકા
આયુષ્યને જે ઉપર સિંચે ઉછરેલ તે છોડ કેરું !
પ્રશ્નો

- (1) મા કોને પાણી પીવાની સૂચના આપે છે ?
- (2) મા કેવા તુલસીદલ લેવાનું કહે છે ?
- (3) કવિ કોની અંતિમ ક્ષણની વાત કરે છે ?
- (4) મા કઈ રીતે એમના પતિના મુખમાં તુલસીનું પર્ણ મૂકે છે ?
- (5) કાવ્યને યોગ્ય શીર્ષક આપો.

♦ **આપેલા ફકરાને ધ્યાનથી વાંચી તેને આધારે નીચે આપેલા પ્રશ્નોના યોગ્ય ઉત્તર આપો. [5]**

સંવેદનશીલ વ્યક્તિનું હૃદય અન્યો માટે કુસુમ જેવું કોમલ અને પોતાને માટે વજ જેવું કઠોર હોય છે. હૃદયની વાત હૃદયથી સાંભળી શકાય, કાનથી નહિ. પ્રાણીમાત્ર પ્રત્યેની સંવેદના હિંદુસ્તાનની ધરતીની મહેક છે. એટલે જ અહીંના લોકો કિડીને કણ અને હાથીને મણ નાખવા જાય છે. અહીંના ચબૂતરા પર ચણ ચણતા પક્ષીઓ અહીંની સંવેદના સંદેશાવાહક છે. આ સંવેદનાના પ્રવાહમાં વહીને જ રવિશંકર મહારાજ અને ઠક્કરબાપા જેવાઓએ વગડે-વગડે ફરીને લોકોના આંસુ. આંસુ તો ચલચિત્ર જોતાંય ખરી પડે છે. ચલચિત્ર એ વાસ્તવિકતા નથી છતાં સંવેદના જગાડવાની શક્તિ અભિનય અને સંવાદમાં છે. હૃદય દ્રવી ઊઠે ત્યારે આંસુ બનીને સારી પડતી સંવેદના નક્કર રૂપ ધારણ કરે તો તે કર્મશીલતામાં પરિણમે છે. અખિલ જીવનમાં જેને કડી આંસુ સાર્યા નથી એણે જીવનને કદી પ્રેમ કર્યો નથી. પ્રશ્નો:

- (1) સંવેદનશીલ વ્યક્તિનું હૃદય કેવું હોય છે ? શા માટે ?
- (2) હિંદુસ્તાનની ધરતીની મહેક શેમાં છે? સંવેદનાના સંદેશાવાહક કોણ છે ?
- (3) કોને લોકોના આંસુ સાર્યા છે ?
- (4) ચલચિત્ર વિશેષતા શેમાં છે ?
- (5) ગદ્યખંડને યોગ્ય શીર્ષક આપો.

♦ **આપેલા ગદ્યખંડને 1/3 ભાગમાં ગુજરાતીમાં સંક્ષેપ કરો. [5]**

65. Global warming is a serious threat to earth. Causing many harmful effect on the environment and the ozone layer (which protect earth from harmful sum rays). The first reason for global warming is deforestation. Many trees get cut. They clean the air. To reduce the effect of global warming, people that cut trees should replant new trees instead to maintain balance. The second reason for global warming is garbages. Too much packages around thing we buy and too many plastic bags cause global warming. We must reduce the things we buy recycle the garbage we make and not use so much things. The last reason for global

warming is fossil fuels. Fossil fuels are burned for energies. If we do not burn the fossil fuels, we will not have the global warming smoke from factories, industries and mainly nuclear plants cause global warming is not from one country but countries all over the world. Smoke needs to stop and that means no more fossil. We need to make more fuel-efficient vehicles and find other ways to make power. If we use everything the proper way, we can reduce global warming and earth will be saved.

♦ **મુદ્દા પરથી વાર્તા લખી તેને યોગ્ય શીર્ષક આપો. [5]**

66. એક ખેડુત -ચાર દોકરા-ચારેય દોકરા આળસુ- ખેડુતને ચિંતા- ખેડુતની માંદગી - ચારેય દોકરાઓને બોલાવવા - “ખેતરમાં રૂપિયા ભરેલો ચરુ છે” એમ કહેવું -ખેડુતનું અવસાન- દોકરાઓએ આખું ખેતર ખોદી નાખવું -રૂપિયા ન મળવા -બી વાવવાં - સારો પાક થવો - શિખામણ.

વિભાગ : E

♦ **આપેલા વિચારકણિકાની સમજૂતી આપી તેનો 100 શબ્દોમાં વિચારવિસ્તાર કરો. (કોઈ પણ 1) [5]**

67. પસ્તાવો ! વિપુલ ઝરણું સ્વર્ગથી ઊતર્યું છે, પાપી તેમાં ડૂબકી દઈને પુણ્યશાળી બને છે. મનુષ્ય કર્મની કાલિમાને સમર્થ ધોવા લધુ અશ્રુબિંદુ.

અથવા

67. ઊગે કમળ પંકમાં તદપિ દેવશિરે ચડે, નહિ કુળથી, કીન્તુ મૂલ મૂલવાય ગુણો વડે.

♦ **નીચે આપેલ અહેવાલ આશર 100 શબ્દોમાં લખો. [5]**

68. તમારી શાળામાં યોજાયેલ રક્તદાન શિબિરનો અહેવાલ આધરે સો શબ્દોમાં તૈયાર કરો.

♦ **નીચે આપેલ વિષય પર આશરે 250 શબ્દોમાં મુદ્દાઓને આધારે નિબંધ લખો. (કોઈ પણ 1) [10]**

69. પુસ્તકોની મૈત્રી

[મુદ્દા: 1. પ્રસ્તાવના 2. પુસ્તકોનું મહત્વ 3. જીવન-ઘડતરમાં સારું પુસ્તકોનો ફાળો 4. મનનીય ઉદાહરણો 5. પુસ્તક : ઉત્તમ મિત્ર 6. પુસ્તકોની મૈત્રીના લાભ 7. ઉપસંહાર]

69. મોંઘવારીનું વિષયક

[મુદ્દા: 1. પ્રસ્તાવના 2. મોંઘવારી શું છે ? 3. મધ્યમ વર્ગના માનવીની હાલાકી 4. મોંઘવારીની સમસ્યાઓ 5. મોંઘવારી ડામવાના પ્રયત્નો ને નિષ્ફળતા 6. ઉપસંહાર]

69. વૃક્ષ: માનવજીવનનું સુખ

[મુદ્દા: 1. આ સૂત્રનો શબ્દાર્થ અને ભાવાર્થ 2. બાળજન્મ અને વૃક્ષજન્મ સમાંતરે ચાલે 3. જેને ત્યાં એક નવું બાળક જન્મે તે એક વૃક્ષ ઉછેરે 4. આવું કરવા પાછળનાં કારણો: બેફામ વસ્તી અને વૃક્ષ છેદન પ્રવૃત્તિ 5. વૃક્ષારોપણ ઔપચારિક નહિ 6. ઉપસંહાર]



Federation of Academic Association

PAPER - 2

- STD. 12TH EM
- SUB. GUJ.
- MARK 100
- TIME 3 Hour.

વિભાગ : A

♦ પદ્ય - નીચેના દરેક પ્રશ્નના ઉત્તર માટે આપેલા વિકલ્પોમાંથી

યોગ્ય વિકલ્પ પસંદ કરી ઉત્તર લખો: [5]

1. “વતનનો તલસાટ” કાવ્યમાં શાનો મહિમા પ્રગટ થયો છે?
A. દેશપ્રેમનો B. માતૃભૂમિનો C. રાષ્ટ્રપ્રેમનો D. સમયનો
2. “મેળો આપો તો” કાવ્યનો પ્રકાર જણાવો.
A. સૉનેટ B. ગીતકાવ્ય C. પ્રસંગકાવ્ય D. ખંડકાવ્ય
3. ‘વીડી વાઢનારા’ લોકગીતમાં શાનું નિરૂપણ થયું છે?
A. સામાજિક સંબંધો B. સામાજિક પરંપરાઓ
C. સામાજિક રિવાજો D. સમાજની કારમી -ધારદાર વાસ્તવિકતા
4. “હેકારી જા” કાવ્યમાં શબ્દોને કોની ભૂખ હતી?
A. રામદર્શન B. પ્રભુદર્શન C. જલદર્શન D. શિવદર્શન

♦ પદ્ય - નીચે આપેલા જોડકાને સાચી રીતે જોડી કરીથી લખો. [4]

અ	બ
5. ક્રોધી સ્વભાવને જીતવો ને	A. લોકગીત
6. એક સરખા દિવસ સુખન	B. ઊર્મિકાવ્ય
7. વીડી વાઢનારફ	C. પદ
8. હેકારી જા	D. ગીત
	E. સોનેટ

♦ પદ્ય - નીચેના પ્રશ્નોના એક - બે વાક્યમાં ઉત્તર લખો. [3]

9. કવિ સ્વર્ગથી પાછા આવવાની વાત શા માટે કરે છે ?
10. બા બારી ખોલવાનું શાથી કહે છે ?
11. વડલો પંખીઓને શી વિનંતી કરે છે ?
12. મૃત્યુ પછી શું સાથે આવતું નથી ?

♦ પદ્ય - નીચેના પ્રશ્નોના ટૂંકમાં ઉત્તર લખો. (કોઈ પણ 2) [4]

13. વીડી ન વાઢવા પાછળ નાચિકાનો શો હેતુ છે ?
14. કવિના પ્રાણ શાથી (ઉતાવળા) અધીર બન્યા ચી ? શા માટે ?
15. પંખીઓ વડને શો જવાબ આપે છે ?

♦ પદ્ય - નીચેના પ્રશ્નોના સવિસ્તાર ઉત્તર લખો. (કોઈ પણ 1) [4]

16. લોકગીતમાં દર્શાવાયેલ ગ્રામ્ય-જીવનની નોંધ તમારા શબ્દોમાં કરો:
17. હેકારી જા” કાવ્યનો કેન્દ્રવર્તી ભાવ સ્પષ્ટ કરો.

વિભાગ : B

♦ ગદ્ય - નીચેના દરેક પ્રશ્નના ઉત્તર માટે આપેલા વિકલ્પોમાંથી

યોગ્ય વિકલ્પ પસંદ કરી ઉત્તર લખો : [4]

18. બિસ્મિલ્લાખાને શરણાઈ ઉપરાંત શાનો શોખ હતો?
A. વાંસળી - વીણ B. હાર્મોનિયમ
C. હાર્મોનિયમ - તબલ D. સિતાર
19. પ્રભાશંકર શું સાંખી ન લેતાં?
A. નિત્યનિયમમાં કેરફાર B. પુત્રનું ખોટું બોલવું

C. પોતાનું અપમાન

D. જીવનની વાસ્તવિકતા

20. નારાયણ હેમચંદ્ર પાઠ કયા પુસ્તકમાંથી લેવામાં આવ્યો છે?

A. સત્યના પ્રયોગો

B. હિંદસ્વરાજ

C. ત્યાગભૂર્તિ

D. કેળવણીનો કોયડો

21. “જળનગરી વેનિસ” પાઠના અનુવાદક કોણ છે?

A. લાભુબહેન મહેતા

B. મુદુલાબહેન મહેતા

C. ઈશ્વર પેટલીકર

D. ચંદ્રવદન મહેતા

♦ નીચે આપેલા જોડકાને સાચી રીતે જોડી કરીથી લખો. [4]

અ	બ
22. સુખનો કાળ બાળપણને	A. પુ. લ. દેશપાંડે
23. અઘરો દિવસ	B. વેણીભાઈ પુરોહિત
24. સત્યવીર સૌંદરિસ	C. જોસેફ મેકવાન
25. બે લઘુકથાઓ	D. સંકલિત
	E. નરેન બારડ

♦ ગદ્ય - નીચેના પ્રશ્નોના એક - બે વાક્યમાં ઉત્તર લખો. [4]

26. પત્નીના અવસાન બાદ નાયક કેવું જીવન જીવતા હતાં ?
27. રાજીમાને કોનું અનહદ વળગણ હતું ?
28. સોફ્ટીસે મોતનો સ્વીકાર શા માટે કર્યો ?
29. આસ્વાદકની ધારણાં પ્રમાણે “અઘરો દિવસ” કૃતિ દયારામે કય સંજોગોમાં લખી હશે ?

♦ ગદ્ય - નીચેના પ્રશ્નોના ટૂંકમાં ઉત્તર લખો. (કોઈ પણ 2) [4]

30. નારાયણ હેમચંદ્ર કેવો પોશાક પહેરતાં ?
31. જમનાને અખા પર શો અવીશ્વાસ આવ્યો ?
32. સુંદર કોને શોધતી હતી ? તેમાં તેને શો ચિત્રવેશ જોયો ?

♦ નીચેના પ્રશ્નોના સવિસ્તાર ઉત્તર લખો. (કોઈ પણ 1) [4]

33. બિસ્મિલ્લાખાને મન પોતાના જીવનના યાદગાર પ્રસંગો કયાં કયાં છે ?
34. વેનિસની સુંદરતા અને ભવ્યતાનું તમારા શબ્દોમાં વર્ણન કરો.

વિભાગ : C

♦ વાક્યોમાં યોગ્ય પ્રત્યય મૂકી વાક્ય પૂરું કરી ફરીથી લખો. [1]

35. આવા મોટા કુળ સ્ત્રીઓ આવું કામ શી રીતે અપાય ?

♦ નીચેના વાક્યમાં યોગ્ય નામયોગી મૂકી વાક્ય ફરીથી લખો. [1]

36. સ્વાશ્રયનું જીવનમાં આગવું સ્થાન છે એ મા શીખવા મળ્યું.

♦ વાક્યમાં યોગ્ય પ્રત્યય અને નામયોગી મૂકી વાક્ય કરીથી લખો. [1]

37. શ્યામ રંગ એ કદ ન જવું.

♦ નીચેના વાક્યમાં યોગ્ય વિરામચિહ્ન મૂકી ફરીથી લખો. [1]

38. તમે જુઓ છોને મને એક પળનીય નવરાશ મળે છે

◆ વાક્યને અર્થપૂર્ણ બનાવવા માટે વિરામચિહ્ન સુધારી વાક્ય

ફરીથી લખો: [1]

39. “આ તે કેવી નવાઈની? વાત આવા રૂપાળા કુંવરને જોઈને ખુશ થવાને બદલે રાજારાણી આંસુ પાડે?”

◆ નીચેનાં વાક્યોને યોગ્ય સંયોજન વડે જોડો. [1]

40. હું પંદર વરસનો હતો. સારું વગાડતા શીખી ગયેલો.

◆ નીચેનાં વાક્યોમાં ખોટા સંયોજકોનો પ્રયોગ કર્યો છે, તે ર

સુધારી વાક્ય ફરીથી લખો: [1]

41. આ આંબાના ફળ મને નથી મળવાના પણ નથી એને છાંયે હું વિસામો ખાવાનો.”

◆ નીચેનાં વાક્યોમાંથી સાદું વાક્ય ઓળખાવો: [1]

42. A. ખેતર વાવતા પહેલાં તમારે ઘાસ દૂર કરવું હતું.
B. રામેશ્વર મંદિરમાં કીર્તન શરૂ થાય કે ખાવા-પીવાની સૂધ રહે નહિ.

C. માણસ જો ઉપયોગી અને જરૂરી કામ કરતો હોય, તો એમાં શરમજનક કશું જ નથી.

D. વેનિસની શેરીઓમાં શોક અને પશ્ચાતાપધેરા ઓથેલોના અંતિમ શબ્દો જાણે પડયાય છે.

◆ નીચેનાં વાક્યોમાંથી સંયુક્ત વાક્ય ઓળખાવો: [1]

43. A. પ્રભાશંકર આંખ ઝીલી કરીને અંધકારમાં તાકી રહ્યા.

B. બે ધ્વિસથી હસમુખને પાન લાવવાનું યાદ કરાવવા છતાં એ ભૂલી જ જતો હતો !

C. રાજકુમાર સોળ વરસનો થયો.

D. જ્યાં સુધી એના અંગ પર રેશમી વસ્ત્ર રહેશે ત્યાં સુધી કાળની એના પર કશી અસર થશે નહિ.

◆ નીચેનાં વાક્યોમાંથી સંકુલ વાક્ય ઓળખાવો: [1]

44. A. સૂર પ્રત્યેનું મારું ખેંચાણ ઠેઠ બાળપણથી રહ્યું છે.

B. શાબાશ ધિકરા, મને હવે ખાતરી થઈ કે તું મારું નામ નહિ બોળે.

C. જો તમારા બેમાંથી કોઈને એને વિશે સહેજ સરખો પણ ખરાબ વિચાર આવશે તો એ વસ્ત્રમાં કાણું પડશે.

D. મારે તો એ સાધુપુરુષને મળવું છે.

◆ નીચેનાં વાક્યોમાંથી કયા વાક્યનો પદ્યમ યોગ્ય છે, તે જણાવો. [2]

45. A. રમેશ ગાયની પાછળ ચાલી.

B. મેં તાળું કે ચાવી લીધાં નથી.

C. નવરાત્રિમાં એક-એક વિધાર્થી ભાગ લેશે.

D. ગોપી અથવા રમણલાલ આવ્યાં હતાં.

◆ વાક્યોમાંથી કયા વાક્યનો પદસંવાદ યોગ્ય છે તે જણાવો.

46. A. એ બધી વાતો કર્યા વગર ઘા ઉપર ચેવીને પાટો બાંધો.

B. બાઈ રહી તાકી આંખે ફાટી.

C. બુધલો થયો વરસનો પાંચ.

D. પૈસા તમારા જાઓ તો લેતા !

◆ રૂઢિપ્રયોગનો અર્થ આપો. [1]

47. આંખ લાલ થવી

A. આંખ આવવી

B. ગુસ્સો ચડવો

C. બીક લાગવી

D. આબરૂ મળવી

◆ નીચેના સામાસિક શબ્દનો અર્થ આપો: [1]

48. વળાવિયો

A. વળીવળીને કામ કરનાર

B. વળતાં સાથે આવનાર

C. રસ્તામાં સંભાળ રાખનાર

D. જતાં સંગાથ કરનાર

◆ સમાનર્થી શબ્દ આપો. [1]

49. કોશિશ

A. ચત્ન

B. હાર

C. અસ્વીકાર

D. એકપણ નહિ.

◆ વિરુદ્ધાર્થી શબ્દ આપો. [1]

50. પરિચિત

A. ઓળખીતું

B. જાણીતું

C. અપરિચિત

D. જ્ઞાત

◆ વાક્યોમાં કયા વાક્યની વાક્યરચના ખોટી છે, તે જણાવો. [1]

51. A. ક્રોધ અને અશ્રુથી સુન્દર ભરલી ચાલી ગઈ.

B. એકસરખા દિવસ સુખના કોઈના જાતા નથી.

C. મારે ખાવું કેટલું અને પહેરવું કેટલું?

D. અમારે હવે ઝાઝો વિચાર કરવાનો છે જ નહિ.

◆ નીચેના શબ્દોમાંથી સાચી જોડણીવાળો શબ્દ શોધો : [1]

52. A. વિધ્યાર્થી B. પરીક્ષા C. અનુસ્વાર D. નગરપાલીકા

◆ નીચેના શબ્દોમાંથી ખોટી જોડણીવાળો શબ્દ શોધો. [1]

53. A સુબેદાર B. રિયાજ C. બખ્તિયો D. પાણીયારા

◆ નીચેનાં કહેવત-જોડકાંમાંથી સમાન અર્થવાળું જોડકું શોધો. [1]

54. A. એક સાંધતાં તેર તૂટવા - દુષ્કાળમાં અધિક માસ.

B. સંપ ત્યાં જંપ - ઝાઝા રસોઈયા રસોઈ બગાડે.

C. ન જાણ્યું જાનકી નાથે થવાનું છે. કાલે સવારે આ જ

D. ફરે તે ચરે બાંધ્યો ભૂખે મરે - બોલે તેનાં બોર વેચાય.

વિભાગ : D

◆ કાવ્યને વાંચીને તેને આધારે પ્રશ્નોના જવાબ આપો. [5]

ફંફોસ્યું સૌ ફરી ફરી અને હાથ લાગ્યું ખાસ્સું :

જૂનું ઝાડુ, ટૂથબ્રશ, વળી સ્નિગ્ધ સાબુની ગોટી,

બોખી શીશી, ટિનનું ડબલું, બાલદી કૂખ કાણી,

તૂટ્યાં ચશ્માં, ક્લિપ, બટન ને ટાંકણી સોયદોરો !

લીધું દ્વારે નિત લટકતું નામનું પાટિયું,

જે મૂકી ઊંઘું, સુપરત કરી, લારી કીધી વિદાય.

ઊભાં છેલ્લી નજર ભરીને જોઈ લેવા જ ભૂમિ,

જ્યાં વિતાવ્યો પ્રથમ દસકો મુગ્ધ દામ્પત્ય કેરો;

જ્યાં દેવોના પરમ વર શો પુત્ર પામ્યાં પનોતો,

ને જ્યાંથી રે કઠણ હૃદયે અગ્નિને અંક સોંપ્યો !

કોલેથી જે નીકળી સહસા ઊઠતો બોલી જાણે :

“બા-બાપુ ! ના કશુંય ભૂલિયાં, એક ભૂલ્યાં મને કે?”

ખૂંચી તીણી સજલ દેગમાં કાય કેરી કણિકા !

ઉપાડેલાં ડગ ઉપર શા લોહ કેરા મણીકા !

- બાલમુકુંદ દવે

55. ઘરને ફંફોસતાં કવિને શું શું મળે છે ?

56. બાલદી કેવી હતી ?

57. કવિને જૂના ઘરમાં કેવો પુત્ર પ્રાપ્ત થયો ?

58. કવિ દંપતીના પગ પર શાના મણીકા પડ્યાં ?

59. આ કાવ્યને યોગ્ય શીર્ષક આપો.

♦ આપેલા ફકરાને ધ્યાનથી વાંચી તેને આધારે નીચે આપેલા

પ્રશ્નોના યોગ્ય ઉત્તર આપો. [5]

સર્વ ગૃહસંસ્કારનો આધાર માતા ઉપર છે ને સારી માતાથી સારા પરિણામ અને નઠારાથી નઠારા પરિણામ અનુભવાય છે ત્યારે સિદ્ધ થાય છે કે માતાની સમૃદ્ધિ અને સુશીલતા ઉપર મુખ્ય આધાર છે. પુરુષોને સુશિક્ષણની જેવી અને જેટલી અપેક્ષા છે તેવી અને તેટલી જ અપેક્ષા સ્ત્રીઓને છે. જેથી એકની બુદ્ધિ સ્ફુરિત થઈને વ્યવહારમાં કામ આવે છે. તેવી જ બીજાની પણ થઈ તેટલી જ ઉપયોગી થાય છે. સ્ત્રીઓને પોતાના કામકાજમાં વ્યસ્ત રાખવાની ટેવ તથા સર્વ વ્યવહારમાં દુરંદેશીપણું એ બે ગુણ ઘણા ઉપયોગી છે. તે ઉપરાંત કરકસરની ટેવ પણ અમૂલ્ય છે એ સર્વ જેથી બધે તેવા શિક્ષણનો તેનો ઘણો ઉપયોગ હોવા છતાં સ્ત્રી-પુરુષ બંનેના વ્યાપાર સાધારણ રીતે જ જુદા હોવાથી સ્ત્રી-પુરુષનાં શિક્ષણ અમુક વય સુધી એક જ હોઈ શકે પણ પછી તે જુદું પડવું જોઈએ. સુશિક્ષિત માતાઓ આ પ્રમાણે પેદા થાય છે તેમ થવાથી દેશની ઉન્નતિનાં બીજ રોપાય છે. જે જે દેશ પાયમાલ થયાં છે તે દેશમાં સ્ત્રી શિક્ષણ ઉપર લોકોએ ધ્યાન ન આપવાથી તેમ થયું છે માટે સ્ત્રીની ઉન્નતિમાં જ સર્વની ઉન્નતિ છે એમ જાણી બને તેમ દેશમાં સ્ત્રી અભ્યાસની વૃદ્ધિ થાય એવો પ્રયત્ન સર્વેએ કરવો જોઈએ.

પ્રશ્નો:

1. ગૃહસંસ્કારનો આધાર કોના ઉપર છે ?
2. સ્ત્રી અને પુરુષોના વ્યાપારો કઈ રીતે જુદાં પડે છે ?
3. અમુક વય પછી સ્ત્રી શિક્ષણ અલગ કેમ હોવું જોઈએ ? તેનાથી શા લાભ થાય છે ?
4. દેશની પાયમાલી પાછળનું કારણ કયું છે ?
5. ગદ્યખંડને યોગ્ય શીર્ષક આપો.

♦ આપેલા ગદ્યખંડને 1/3 ભાગમાં ગુજરાતીમાં સંક્ષેપ કરો. [5]

65. I want to become a teacher as childhood, I like teachers and want to become a teacher. Thinking back to the thirteen years. I spent in grade school in grade school preparing myself for colleges its hard to pick out one teacher than I would consider "my best teacher". There are always teachers that stand out for some reason or another, whether it maybe of their personality, field trips they go on, or all the holiday party fun had in their class. However, the teacher that I chose deserving of the "my best teacher" award I still remember because of the care she showed to each of her students through her personality, the field trips she took us on, and the all the fun had in her class. This teacher is my first grade teacher, Mrs. Hunter. I moved

to my hometown right before I entered the first grade. Going into my first year of school knowing on one was very scary, yet Mrs. Hunter made me feel like. I fit right in. she treated our class like we were apart of her family, which in turn made everyone feel at home and get along without the usual school cliques.

♦ મુદ્દા પરથી વાર્તા લખી તેને યોગ્ય શીર્ષક આપો. [5]

66. રામપુર ગામ - મનુ અને કનુ બે મિત્રો-મનુ શરીરે મજબૂત, કનુ સુકલકડી - જંગલમાં ફરવા જવું-ખૂબ ફર્યા -પાછા ફરતા રસ્તામાં રીંછનો ભેટો -પાછળ પડવું - કનુનું ઝાડ પર ચડી જવું-ડર - મનુની મૂંઝવણ - નીચે જમીન પર સૂઈ જવું - શ્વાસ રોક્યો - રીંછનું પાસે આવી સુંઘી ચાલ્યા જવું- રીંછ ગયા પછી કનુનું ઝાડ પરથી ઊતરવું-બોધ.

વિભાગ : E

♦ આપેલા વિચારકણિકાની સમજૂતી આપી તેનો 100 શબ્દોમાં વિચારવિસ્તાર કરો. (કોઈ પણ 1) [5]

67. પૈસાને વળી પદવીનો, વિશેષ શો વિશ્વાસ; રાવણ કેરી સિદ્ધિ પણ, પળમાં પામી નાશ.

અથવા

67. ઝેરનું અમૃત બનાવી દઉં પરંતુ મુજ કને , પ્રીત મીરાંની નથી, નરસિંહનું કીર્તન નથી.

♦ નીચે આપેલ અહેવાલ આશર 100 શબ્દોમાં લખો. [5]

68. તમારી શાળામાં યોજાયેલ વિજ્ઞાન પ્રદર્શનનો અહેવાલ લખો.

♦ નીચે આપેલ વિષય પર આશરે 250 શબ્દોમાં મુદ્દાઓને આધારે નિબંધ લખો. (કોઈ પણ 1) [10]

69. મારું શૈશવ

[મુદ્દા: 1.પૂર્વભૂમિકા 2. શૈશવ: માતાની મમતાનું મૂલ્ય 3. બચપણનાં યાદગાર સંસ્મરણો 4. બાળપણની વિશેષતાઓ 5. ઉપસંહાર]

69. પુસ્તકોની મૈત્રી

[મુદ્દા: 1.પ્રસ્તાવના 2. પુસ્તકોનું મહત્વ 3. જીવન-ઘડતરમાં સારા પુસ્તકોનો જ્ઞાનો 4. મનનીયઉદાહરણો 5. પુસ્તક : ઉત્તમ મિત્ર 6. પુસ્તકોની મૈત્રીના લાભ 7. ઉપસંહાર]

69. પરિશ્રમ એ જ પારસમણિ

[મુદ્દા: 1. પરિશ્રમનું મહત્વ 2. વર્તમાનયુગનું પ્રેરકબળ-શ્રમ 3. શ્રમનું ગૌરવ શી રીતે વધારીશકાય ? 4. વિદેશોમાં શ્રમયુક્ત જીવન 5. પરિશ્રમ પારસમણિ શા માટે ?]

All The Best



Federation of Academic Association

PAPER - 3

- STD. 12TH EM
- SUB. GUJ.
- MARK 100
- TIME 3 Hour.

વિભાગ : A

♦ પદ્ય - નીચેના દરેક પ્રશ્નના ઉત્તર માટે આપેલા વિકલ્પોમાંથી

યોગ્ય વિકલ્પ પસંદ કરી ઉત્તર લખો: [5]

1. 'કોધી સ્વભાવને' કાવ્યનો પ્રકાર
(અ) સોનેટ (બ) ગીત (ક) પદ્ય (ડ) ઊર્મિકાવ્ય
2. કયા કાવ્યમાં કવિએ અહંકાર - હું પદ છોડી ઈશ્વરની સર્વોપરિતાનો સ્વીકાર કર્યો છે.
(અ) એકસરખા દિવસ સુખના (બ) કોધી સ્વભાવને
(ક) હંકારી જા (ડ) વડલો ને પંખીડા
3. "ગાળી લાંબો સમય દૂરનાં દોહલાં પાણી પી પી," પંક્તિ કયાં કાવ્યની છે?
(અ) આ રસ્તાઓ (બ) વડલો ને પંખીડા
(ક) વીડી વાઢનારા (ડ) હંકારી જા
4. પરસ્પરના અતૂટ સ્નેહ તાંતણાને દૃઢ બનાવવાની મૂલ્યવાન શીખ કયાં કાવ્યમાંથી મળે છે ?
(અ) વડલો ને પંખીડાં (બ) હંકારી જા
(ક) કોધી સ્વભાવને (ડ) વીડી વાઢનાર
5. નરવું-ગરવું સ્ત્રીદાક્ષિણ્ય પોતાના સંસારને કેવો જીવી-જીરવી જાણે છે એ સૌંદર્યને કયું કાવ્ય છત્તું કરે છે ?
(અ) હંકારી જા (બ) વીડી વાઢનાર
(ક) વતનનો તલસાટ (ડ) વડલો ને પંખીડા

♦ પદ્ય - નીચે આપેલા જોડકાને સાચી રીતે જોડી ફરીથી લખો. [4]

અ	બ
6. હંકારી જા	(અ) હરીન્દ્ર દવે
7. આ રસ્તાઓ	(બ) ઉશનસ
8. વતનનો તલસાટ	(ક) પ્રભુલાલ દ્વિવેદી
9. એક સરખા દિવસ...	(ડ) સુન્દરમ
	(ઈ) રમણિક અરાલવાળા

♦ પદ્ય - નીચેના પ્રશ્નોના એક - બે વાક્યમાં ઉત્તર લખો. [3]

10. વડલો પંખીડાંઓને શી વિનંતી કરે છે ?
11. મનના માલિકને કવિ શું કહે છે ?
12. સમય અને પુરુષ બંનેમાં કોણ બળવાન છે ?

♦ પદ્ય - નીચેના પ્રશ્નોના ટૂંકમાં ઉત્તર લખો. (કોઈ પણ 2) [4]

13. અર્જુનના દૃષ્ટાંત દ્વારા કવિ શો સંદેશ આપે છે ?
14. ગંગાસતી અંતરમાં શું ધારણ કરવાનું જણાવે છે ? શા માટે ?
15. વીડી ન વાઢવા પાછળ નાયિકાનો શો હેતુ છે ?

♦ પદ્ય - નીચેના પ્રશ્નોના સવિસ્તાર ઉત્તર લખો. (કોઈ પણ 1) [4]

16. 'મેળો આપો તો' કાવ્યમાં કવિના મનોભાવો આલેખો.
17. વડલો પંખીડાંઓને શું કહે છે ? પંખીઓ તેનો શો પ્રત્યુત્તર આપે છે ?

વિભાગ : B

♦ ગદ્ય - નીચેના દરેક પ્રશ્નના ઉત્તર માટે આપેલા વિકલ્પોમાંથી

યોગ્ય વિકલ્પ પસંદ કરી ઉત્તર લખો : [4]

18. 'જળનગરી વેનિસ' કૃતિ સાહિત્યનો કયો પ્રકાર છે ?
(અ) ચિંતન નિબંધ (બ) પ્રવાસ વર્ણન
(ક) આત્મકથા ખંડ (ડ) લલિત નિબંધ
19. બિસ્મિલ્લાખાંની મુલાકાત લાલુભહેન મહેતાએ કઈ સાલમાં લીધેલ છે ?
(અ) 1959 (બ) 1980 (ક) 1960 (ડ) 1950
20. 'ચીંગડું' વાર્તાના લેખક કોણ છે ?
(અ) ઉમાશંકર જોષી (બ) સુરેશ જોષી
(ક) ચંદ્રકાન્ત પંડ્યા (ડ) ગોવર્ધનરામ ત્રિપાઠી
21. 'સુખનો કાળ બાળપણનો' સ્મરણકથાનો અનુવાદ કોણે કર્યો ?
(અ) અરુણા જાડેજા (બ) નીતા રામૈયા
(ક) પુ. લ. દેશપાંડે (ડ) વેણીભાઈ પુરોહિત

♦ નીચે આપેલા જોડકાને સાચી રીતે જોડી ફરીથી લખો. [4]

અ	બ
22. કુસુમનું કદાચ તપ	નાટિકા
23. સત્યવીર સોફેટીસ	નવલકથા ખંડ
24. સુખનો કાળ બાળપણને	ચરિત્રનિબંધ
25. અખાનો સંસારત્યાગ	સ્મરણકથા

♦ ગદ્ય - નીચેના પ્રશ્નોના એક - બે વાક્યમાં ઉત્તર લખો. [4]

26. માળા કુસુમની આંખોને કોની સાથે સરખાવે છે ?
27. નારાયણ હેમચંદ્ર કઈ કઈ ભાષાના જાણકાર હતા ?
28. પત્નીના અવસાન બાદ નાયક કેવું જીવન જીવતાં હતાં ?
29. વેનિસનો સુપ્રસિદ્ધ ચોક કયો છે ?

♦ ગદ્ય - નીચેના પ્રશ્નોના ટૂંકમાં ઉત્તર લખો. (કોઈ પણ 2) [4]

30. શા કારણ થી રાજમાએ કાગળ લખવાનો નિર્ણય માંડી વાળ્યો ?
31. નાટક મંડળીમાં રામાયણનો અભિનય શી રીતે થતો ?
32. લેખિકાએ વેનિસમાં શી મુશ્કેલી અનુભવી ?

♦ નીચેના પ્રશ્નોના સવિસ્તાર ઉત્તર લખો. (કોઈ પણ 1) [4]

33. 'મોરનાં ઈંડાં' શીર્ષક સમજાવો.
34. સ્વતંત્ર વિચારક તરીકે સોફેટીસનું ચરિત્ર આલેખો.

વિભાગ : C

♦ વાક્યોમાં યોગ્ય પ્રત્યય મૂકી વાક્ય પૂરું કરી ફરીથી લખો. [1]

35. તે કાળ એથેન્સ ઝેર મોત સજા કરવાં આવતી.

♦ નીચેના વાક્યમાં યોગ્ય નામયોગી મૂકી વાક્ય ફરીથી લખો. [1]

36. ગંડોલાની મુસાફરી..... સહેલાણીઓ પુષ્કળ દામ ખર્ચે.

◆ વાક્યમાં યોગ્ય પ્રત્યય અને નામયોગી મૂકી વાક્ય કરીથી લખો.

[1]

37. તે ધાબે આવી ગયો.

◆ નીચેનાં વાક્યમાં યોગ્ય વિરામચિહ્ન મૂકી ફરીથી લખો.[1]

38. સીંચાયેલું અબ નીરખવું મોઢું ક્યાં માવડીનું

◆ વાક્યને અર્થપૂર્ણ બનાવવા માટે વિરામચિહ્ન સુધારી વાક્ય

ફરીથી લખો: [1]

39. બુધલો ચ્યાં ગ્યો કંઈ દેખાતો કેમ નથી

◆ નીચેનાં વાક્યોને યોગ્ય સંયોજન વડે જોડો. [1]

40. (i) હું અઢી વરસનો હતો. (ii) મા મરી ગયેલી.

(iii) મોસાળમાં જ મોટો થયો.

◆ નીચેનાં વાક્યોમાં ખોટા સંયોજકોનો પ્રયોગ કર્યો છે, તે ૨

સુધારી વાક્ય ફરીથી લખો: [1]

41. પોતાનું માથું ટેબલ પર ઢાળી દીધું. આંખો મીંચી દીધી.

◆ નીચેનાં વાક્યોમાંથી સાદું વાક્ય ઓળખાવો: [1]

42. (અ) વિદ્યાર્થી ભણે છે અને રમે છે.

(બ) અમારે જમવું હોય તો અમે તમને જાણ કરીએ ને !

(ક) ફૂવામાં સરવાણી જ નથી તેથી પાણી આવે ક્યાંથી ?

(ડ) ખેતર વાવતાં વહેલાં તમારે ઘાસ દૂર કરવું હતું.

◆ નીચેનાં વાક્યોમાંથી સંયુક્ત વાક્ય ઓળખાવો: [1]

43. (અ) શિયાળો શરૂ થયો એટલે તે ઘેર આવ્યો.

(બ) ગોવાળ ગાય ચારે છે.

(ક) હવે જ્યારે હું ત્યાં આવીશ ત્યારે તમને યાદ કરીશ.

(ડ) વગર વિચાર્યું વર્તન કરી નાખે છે તે પાછળથી ઘણો જ પસ્તાય છે.

◆ નીચેનાં વાક્યોમાંથી સંકુલ વાક્ય ઓળખાવો: [1]

44. (અ) તમે અહીં આવશો કે સીધા જ ભાવનગર જશો ?

(બ) જો હું કશું બોલ્યો ન હોય તો તેઓને પરિસ્થિતિની જાણ થવાની નહોતી.

(ક) સુદી પાંચમનો ચંદ્ર દૂર રહ્યો.

(ડ) એક ગાડું તો ખાસ્સું સરસામાનથી જ ખીચોખીચ ભરાઈ ગયું.

◆ નીચેનાં વાક્યોમાંથી કયા વાક્યનો પદ્યમ યોગ્ય છે, તે જણાવો.[2]

45. (અ) ખેતરમાં ઘાસ ગાય ચરતી હતી.

(બ) દરવાન ચોકી કરે છે રાજાના રાજમહેલની.

(ક) મોરલાનું નૃત્ય જોવાની સૌને બહુ જ મજા આવી!

(ડ) રૂમમાં વર્ગમંત્રીઓ બેઠા હતા.

◆ નીચેનાં વાક્યોમાંથી કયા વાક્યનો પદ્યસંવાદ યોગ્ય છે તે જણાવો.

46. (અ) પેન ખોવાઈ છે, ચોપડો ખોવાયો છે.

(બ) આંબા પરથી કેરી ખરી પડ્યાં.

(ક) 'સીતા સ્વયંવર' - નાટકમાં ગીતા રાવણ બન્યો.

(ડ) મયજીભાઈ સજ્જન છે.

◆ રૂઢિપ્રયોગનો અર્થ આપો. [1]

47. કેફના કસુંબાને ઘોળવા

(અ) નશામાં રહેવું (બ) પ્રવાહની ધારામાં રહેવું

(ક) આનંદમાં રહેવું (ડ) મયજીભાઈ સજ્જન છે.

◆ નીચેના સામાસિક શબ્દનો અર્થ આપો: [1]

48. ઝંઝા -

(અ) પવન સાથે પડતો વરસાદ (બ) ઝાંઝવાનું પાણી

(ક) ખૂબ વરસાદ પડવો (ડ) સ્થિતિ કે ગતિમાં ફેરફાર

◆ સમાનર્થી શબ્દ આપો. [1]

49. કાન્તિ

(અ) આવડ (બ) છત્ર (ક) તલ્લિન (ડ) તેજ

◆ વિરુદ્ધાર્થી શબ્દ આપો. [1]

50. સોડમ

(અ) સુગંધ (બ) દુગંધ (ક) ગંધ (ડ) સોડ્સ

◆ વાક્યોમાં કયા વાક્યની વાક્યરચના ખોટી છે, તે જણાવો. [1]

51. (અ) આ ટીશર્ટની શું કિંમત છે.

(બ) મારા દાદા મંદિરે ગયાં છે.

(ક) હેમરાજભાઈ સજ્જન વ્યક્તિ છે.

(ડ) સવિનય આપને હું આ હકીકત જણાવું છું.

◆ નીચેના શબ્દોમાંથી સાચી જોડણીવાળો શબ્દ શોધો : [1]

52. (અ) કોથમિર (બ) આદીકાળ (ક) બીરાજમાન (ડ) રૂવાડા

◆ નીચેના શબ્દોમાંથી ખોટી જોડણીવાળો શબ્દ શોધો. [1]

53. (અ) મિનિટ (બ) અઠવાડીયું (ક) અગિયાર (ડ) ચતુર્દશી

◆ નીચેનાં કહેવત-જોડકાંમાંથી સમાન અર્થવાળું જોડકું શોધો. [1]

54. (અ) બોલે તેનાં બોર વેચાય - ન બોલ્યામાં નવ ગુણ.

(બ) જાગ્યા ત્યાંથી સવાર - સૂતાં ત્યાંથી રાત.

(ક) પારકી આશ સદા નિરાશ - અપના હાથ જગન્નાથ

(ડ) ગરથ ગાંઠે ને વિદ્યા પાઠે - હાજર સો હથિયાર

વિભાગ : D

◆ કાવ્યને વાંચીને તેને આધારે પ્રશ્નોના જવાબ આપો. [5]

'મને શું ના લેશો ? કુસુમ કગર્યું ધૂળે કર થકી

ઉવેખી નાખ્યું મે - મુજ કર વિશે શુદ્ધ કુસુમો

ચૂંટેલા વૃક્ષેથી લઇ કદમ જ્યાં માંડું - ઉચર્યું :

'મને શું...' ને મેં તે ઊંચકી ધૂળ ખંખેરી ત્યહીં રે.

વદી ધૂલી ઊઠી : 'પ્રભુચરણનો સ્પર્શ કરવા

અભાગી હું એવી ? કવણ મુજનો દોષ અસહ ?

અને ધૂળે રંગ્યું કુસુમ ઊંચકી ધૂલિસભર

પળું, ત્યાં પાસેના કણકણી ઊઠ્યાં કંકર કંઈ :

'ગુનેગારી શી છે ! પથર બનિયા તે જ - અમની ?'

અને એ ધૂળાળા કંઈક કર હું કંકર લઈ

પળ્યો, ત્યારે ઊભાં પથ ઉભય પાર્શ્વ સહુય તે

રહ્યાં ડોળા ફાળી દુખિત હૃદયે જીવ - અજીવ.

અને મારી બાથે બલ રહ્યું ત્યારે હું કગર્યો :

હવે તો લૈ લે આ અખિલ જગ : એ માર્ગ જ રહ - 'સુન્દરમ્'

55. ધૂળમાં પડેલું ફૂલ કવિને શું કહે છે ?

56. ફૂલ ઉપરાંત બીજા કયા પદાર્થો કવિને પ્રાર્થે છે ? એ દરેક

પદાર્થ કયા શબ્દોમાં આજીજી કરે છે ?

57. બધાની એકસરખી માગણીથી કવિ શી મૂંઝવણ અનુભવે છે?

58. આખરે કવિ પ્રભુને શી પ્રાર્થના કરે છે ?

59. કાવ્યને યોગ્ય શીર્ષક આપો.

✦ આપેલા ફકરાને ધ્યાનથી વાંચી તેને આધારે નીચે આપેલા પ્રશ્નોના યોગ્ય ઉત્તર આપો. [5]

ભારતની ખરી દુર્બળતા તેની ગરીબાઈમાં નથી. ગરીબાઈને તો આપણે જીતી શકીશું પણ ભારતની સૌથી કમજોર કડી છે - ધર્મઝૂન, ઘાત-પ્રતિઘાતના રૂપમાં તેનો પડઘો વધતો જઈ રહ્યો છે. કારણ કે ધર્મઝૂનનો મોટો ઢગલો તો અંતે પૂરા વળતર સાથે મતપેટીઓ છલકાવી દેવાની પ્રયત્નશક્તિ ધરાવતો થયો છે. આપણે એવી પરિસ્થિતિનું નિર્માણ કરી ચૂક્યા છીએ કે પૂરી ધર્મનિરપેક્ષતા, પૂરી કોમનિરપેક્ષતા કે પૂરી નોકરી-નિરપેક્ષતાથી ઉચ્ચ અને મહાન આદર્શો સાથે ચૂંટણી લડી શકીએ તેમ નથી. જેમ યુદ્ધમાં બધું જ કર્તવ્ય બની જાય છે તેમ ચૂંટણીમાં બધું જ આકરી શકાતું હોય છે. ચૂંટણીનો દોર મોટા ભાગે એવા લોકોના હાથમાં ચાલ્યો જતો હોય છે, જે ચોખ્ખા હાથના ના કહેવાય. ધર્મઝૂન, કોમવાદ, ભ્રષ્ટાચાર, નોકરીવાદ અને અસામાજિકતા વગેરે મળીને નિશ્ચિત પરિણામ લાવતા હોય છે. અનિષ્ઠોનો પ્રભાવ તથા શક્તિ એટલા વધી ગયા છે કે ઈષ્ટ તત્વો બિચારાં બની ગયાં છે ! - સ્વામી સચ્ચિદાનંદ

60. ભારતની સૌથી કમજોર કડી કઈ છે ?
61. ચૂંટણીનો દોર કેવા લોકોના હાથમાં હોય છે ?
62. આપણે કેવી પરિસ્થિતિનું નિર્માણ કર્યું છે ?
63. ઈષ્ટ તત્વો બિચારાં કેમ બની ગયાં છે ?
64. ગદ્યખંડને યોગ્ય શીર્ષક આપો.

✦ આપેલા ગદ્યખંડને 1/3 ભાગમાં ગુજરાતીમાં સંક્ષેપ કરો. [5]

65. Remember how I constantly tell you both about the importance of making your way up in the world without waiting for your parents to pull strings ? I believe it is best for children to work hard to make their dreams come true and to not have things handed to them on platter. When you are home visiting us, Deepika, you make your own bed, clear the table after meals, and sleep on the floor if there are guests at home. If you occasionally wonder why we refuse to treat you like a star, it is because you are our daughter first and a film star later. The cameras that follow you every where and the arc lights will eventually fade and what will remain is the real world. Strive to generate positivity around you even

All The Best

though you are new and too small a player to effect a big change. You are in an industry where there's always going to be big money, but I believe that it is important to try to be the best in whatever you do regardless of money.

✦ મુદ્દા પરથી વાર્તા લખી તેને યોગ્ય શીર્ષક આપો. [5]

66. એક સાંકડો પુલ - બે ફૂતરાંઓનું સામસામું આવવું - બંને ઝઘરાણું - બંનેનું ઝઘડવું-નદીમાં પડવું - એ જ પુલ પરથી બે બકરીઓનું સામસામું આવવું બંને સમજદાર - એક બકરીનું નીચે બેસવું અને બીજી બકરીનું તેના પરથી પસાર થવું - બોધ.

વિભાગ : E

✦ આપેલા વિચારકણિકાની સમજૂતી આપી તેનો 100 શબ્દોમાં વિચારવિસ્તાર કરો. (કોઈ પણ 1) [5]

67. નિશાનચૂક માફ, નહિ માફ નીચું નિશાન.

અથવા

“શમે ના વેરથી વેર, ટળે ના પાપ પાપથી ઔષધ સર્વ દુઃખોનું, મૈત્રીલાવ સનાતન.”

✦ નીચે આપેલ અહેવાલ આશરે 100 શબ્દોમાં લખો. [5]

68. તમારી સંસ્થાના સ્વાંતર્યદિનની ઉજવણીનો આશરે 100 શબ્દોમાં અહેવાલ લખો.

✦ નીચે આપેલ વિષય પર આશરે 250 શબ્દોમાં મુદ્દાઓને આધારે નિબંધ લખો. (કોઈ પણ 1) [10]

69. સ્વદેશ પ્રેમ

[પ્રસ્તાવના - સ્વદેશ પ્રેમ - વતનનું સ્મરણ - વિતાવેલું બાળપણ - વતન છોડાવાનું કારણ - આઘાત અનુકરણ - દેશપ્રેમીઓનું ઉદાહરણ - ઉપસંહાર.]

રાષ્ટ્રીય એકતા

[પ્રસ્તાવના વિવિધતામાં એકતા - શહીદોની ઉચ્ચ ભાવના અને હાલની પરિસ્થિતિનું મૂલ્યાંકન - એકતાની જરૂરિયાત - ઉપસંહાર.]

વૃક્ષો વાવો, પર્યાવરણ બચાવો

[પ્રસ્તાવના - વૃક્ષોની ઉપયોગિતા - વસ્તી વધારાની આડ અસર - પર્યાવરણ બચાવોમાં વૃક્ષોનો ફાળો - ઉપસંહાર.]



- ✓ **Step :- 1**
Scan the QR code. And download the MY PAPER Application.
- ✓ **Step :- 2**
Sign up in My Paper Application
- ✓ **Step :- 3**
Go to Board Paper
- ✓ **Step :- 4**
Set your Medium & Std.
- ✓ **Step :- 5**
Then Click on Your subject.
- ✓ **Step :- 6**
Click on Q. Paper to get your Question paper PDF & Click on A. Key to get your Answer Key.

☛ You can see answer key on MY PAPER application in January month.

For Answer Keys Follow the Bellow Given Instructions



Step :- 1

Scan the QR code. And download the MY PAPER Application.

Step :- 2

Sign up in My Paper Application


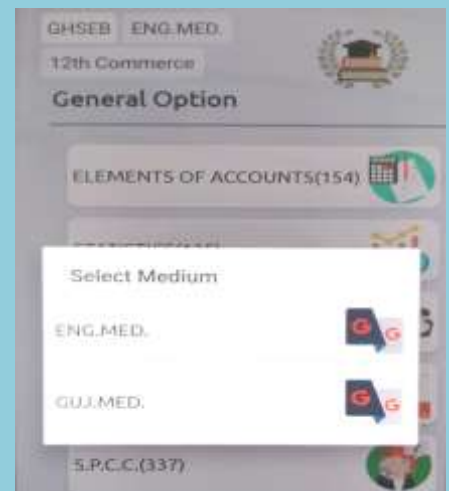
A screenshot of the 'My Paper' application login screen. It features a light blue header with a lightbulb icon. Below the header, there are input fields for 'Mobile Number' and 'Password', each with an eye icon for toggling visibility. A 'LOGIN' button is positioned below the password field. At the bottom, there are links for 'Don't have an account? Sign up' and 'Forgot Password?'.

Step :- 3

Go to Board Paper

Step :- 4

Set your Medium, Std. & Subject



Step :- 5

Click on Q. Paper to get your Question paper PDF & Click on A. Key to get your Answer Key.

MEMBERS OF FAA

(FEDERATION OF ACADEMIC ASSOCIATION)

**AHMEDABAD
EDUCATION
GROUP**

**BARODA
ACADEMIC
ASSOCIATION**

**ACADEMIC
ASSOCIATION
OF BHAVNAGAR**

**GANDHINAGAR
ACADEMIC
ASSOCIATION**

**GONDAL
ACADEMIC
ASSOCIATION
(GCA)**

**HIMMATNAGAR
ACADEMIC
ASSOCIATION**

**SURAT
ACADEMIC
ASSOCIATION**

**JAMNAGAR
COACHING
CLASS
ASSOCIATION**

**JETPUR
COACHING
CLASSES
ASSOCIATION**

**JUNAGADH
PRESCHOOL
ASSOCIATION**

**KESHOD
ACADEMIC
ASSOCIATION**

**JUNAGADH
ACADEMIC
ASSOCIATION**



**UNITED FOR EDUCATION.
STRENGTH IN COLLABORATION.**



MEMBERS OF FAA

(FEDERATION OF ACADEMIC ASSOCIATION)

**MEHSANA
ACADEMIC
ASSOCIATION**

**PORBANDAR
ACADEMIC
ASSOCIATION
(P.A.A.)**

**ACADEMIC
ASSOCIATION OF
SURENDRANAGAR**

**RAJKOT
COACHING
ASSOCIATION**

**VERAVAL
ACADEMIC
ASSOCIATION
VAA**

**VADODARA
ACADEMIC
ASSOCIATION**

**THE
VARACHHA
CLASSES
ASSOCIATION**

**COACHING
CLASSES
ASSOCIATION
RAJKOT**

**VALSAD
ACADEMIC
ASSOCIATION**

**SURAT
EDUCATIONAL
ASSOCIATION**

**SMRUTI
CLASSES VYARA
DIST. - TAPI**

